

**NANYANG PRIMARY SCHOOL
MATHEMATICS
PRIMARY TWO
TOPICAL TEST 1**

(Numbers to 1000 and Addition & Subtraction within 1000)

Name: _____ () Marks: /40

Class: Primary 2 () Parent's Signature: _____

Date: _____

Section A

Questions 1 to 8 carry two marks each. For each question, four choices are given. One of them is the correct answer. Choose the correct answer and write its number 1, 2, 3 or 4 in the bracket () provided.

(Total: 16 marks)

1. In 946, the digit 4 is in the _____ place.

- | | | |
|--------------|---------------|-----|
| (1) ones | (2) tens | () |
| (3) hundreds | (4) thousands | () |

2. The difference between 173 and 489 is _____.

- | | | |
|---------|---------|-----|
| (1) 116 | (2) 316 | () |
| (3) 652 | (4) 662 | () |

3. How many tens are there in 200?

- | | | |
|--------|---------|-----|
| (1) 0 | (2) 2 | () |
| (3) 20 | (4) 200 | () |

4. _____ is 135 less than 700.

- (1) 565
- (3) 635

- (2) 575
- (4) 835

()

5. $431 + 345 =$ _____

- (1) 758
- (3) 776

- (2) 767
- (4) 785

()

6. Jason has 609 stickers.
Ali has 235 fewer stickers than Jason.
How many stickers does Ali have?

- (1) 99
- (3) 183

- (2) 101
- (4) 374

()

7. _____ + 30 tens = $689 - 150$

- (1) 239
- (3) 539

- (2) 269
- (4) 569

()

8. Mrs Lim baked 387 cupcakes on Monday.
She baked 229 cupcakes on Tuesday.
How many cupcakes did she bake altogether?

- (1) 158
- (3) 606

- (2) 162
- (4) 616

()

Section B

Questions 9 to 16 carry 2 marks each. Write your answers in the blanks provided.

(Total: 16 marks)

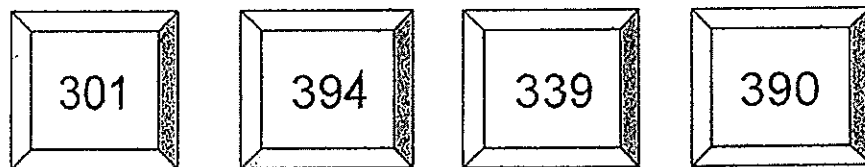
9. Write seven hundred and five in numerals.

Ans: _____

10. Study the number pattern and fill in the blanks.

990, 970, 950, _____, _____

11. Arrange the following numbers in order.
Begin with the smallest number.



_____, _____, _____, _____

12. 920 is _____ tens more than 890.

Ans: _____ tens

13. You are given four digits as shown below.

2, 4, 9, 3


Using the digits given, what is the **smallest 3-digit odd number** that you can form?
Use each digit once only.

Ans: _____

14. What are the missing digits?
Write your answers in the box.

$$\begin{array}{r} \square \quad 3 \quad 9 \\ - \quad 2 \quad \square \quad 7 \\ \hline 6 \quad 5 \quad 2 \end{array}$$

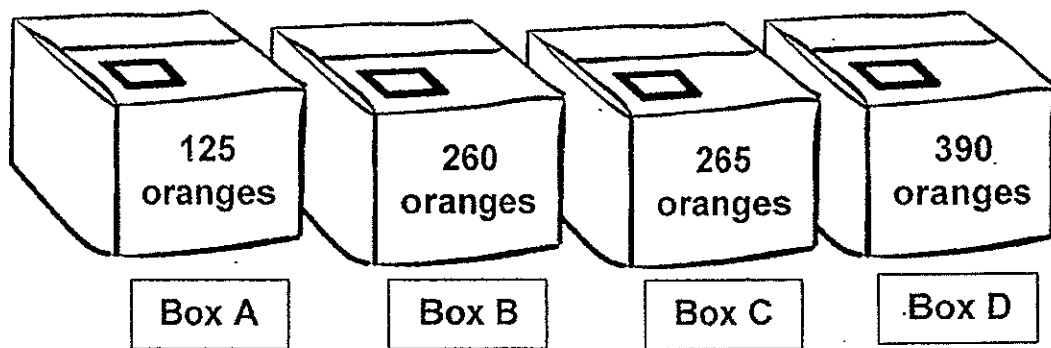
15. June and Mary have 20 apples.
June has 2 fewer apples than Mary.
Draw in the number of apples that each girl have in the box below.



June:

Mary:

16. Farmer Brown has 4 boxes of oranges.
The number of oranges in each box is shown below.



Which 2 boxes contain 525 oranges altogether?

Ans: Box _____ and Box _____

Section C

Questions 17 to 18 carry 4 marks each. Do these word problems carefully. You are required to write the number equations, show your workings and write your final answer in the space provided.
(Total: 8 marks)

17. There are 950 erasers in a bag.
215 of them are red, 427 of them are blue and the rest are green.
How many green erasers are there?

There are _____ green erasers.

18. Albert has 289 stamps.
He has 415 fewer stamps than Devi.
How many stamps do they have altogether?

They have _____ stamps altogether.

End of Paper ☺
Please Check Carefully



YEAR: 2014

LEVEL: P2

SCHOOL: NANYANG

SUBJECT: MATHEMATICS

SEMESTER: CA1

Q1	Q2	Q3	Q4	Q5	Q6	Q7	Q8
2	2	3	1	3	4	1	4

9. 705

10. 930, 910

11. 301, 339, 390, 394

12. 3

13. 239

14. 9

8

15. June: 9 apples

Mary: 11 apples

16. B & C

17. $950 - 215 = 735$

$735 - 427 = 308$

18. $289 + 415 = 704$

$704 + 289 = 993$

