

SINGAPORE CHINESE GIRLS' SCHOOL (PRIMARY)  
PRIMARY 1 MATHEMATICS  
TOPICAL TEST 2  
UNIT 2 – NUMBER BONDS

Name: \_\_\_\_\_ ( )

Date: \_\_\_\_\_

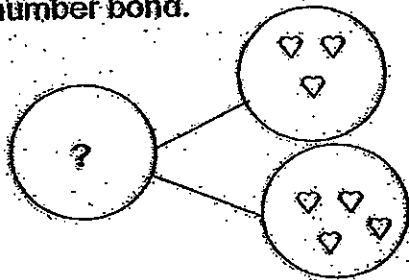
Class: Primary 1 SY / C / G / SE / P / GR



Parent's Signature \_\_\_\_\_

For each question, four options are given.  
Choose the correct answer and write its number in the brackets provided.

1. Study the number bond.



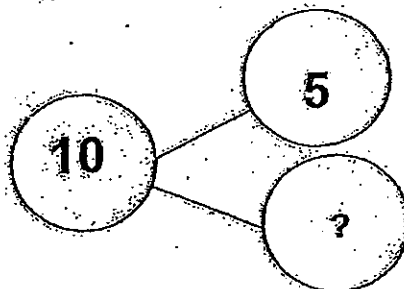
What is the missing number?

- 1) 1
- 3) 3

- 2) 6
- 4) 7

( )

2. Study the number bond.



What is the missing number?

- 1) 15
- 3) 10

- 2) 5
- 4) 4

( )

3. \_\_\_\_\_ and 2 make 7.

- 1) 5
- 3) 3

- 2) 2
- 4) 4

(     )

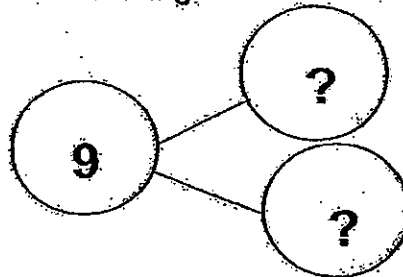
4. \_\_\_\_\_ and 3 make 3.

- 1) 0
- 3) 3

- 2) 6
- 4) 4

(     )

5. What are the missing numbers in the number bond?

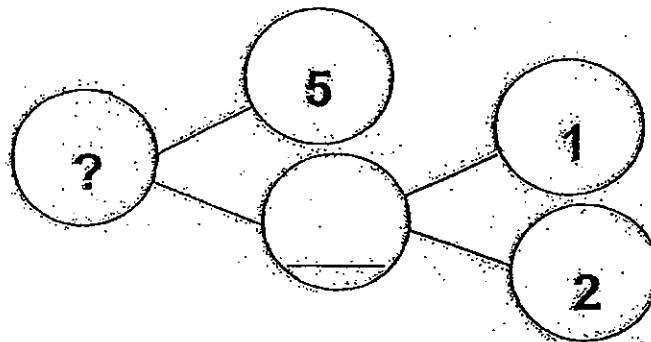


- 1) 1 and 7
- 3) 3 and 6

- 2) 2 and 5
- 4) 4 and 4

(     )

6. What is the missing number?



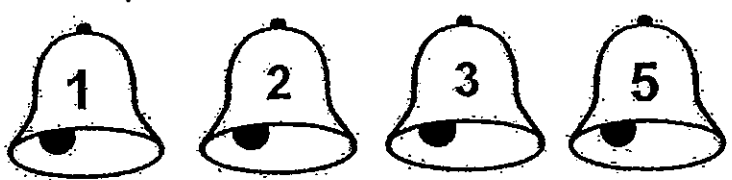
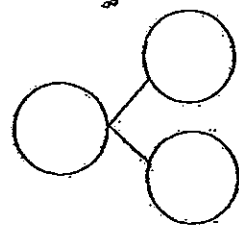
- 1) 8
- 3) 3

- 2) 2
- 4) 9

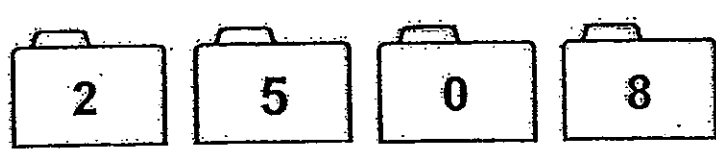
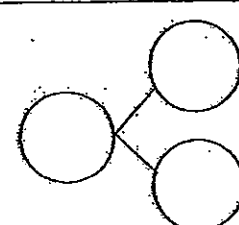
(     )

Read the questions carefully.  
Write the correct answers in the space provided.

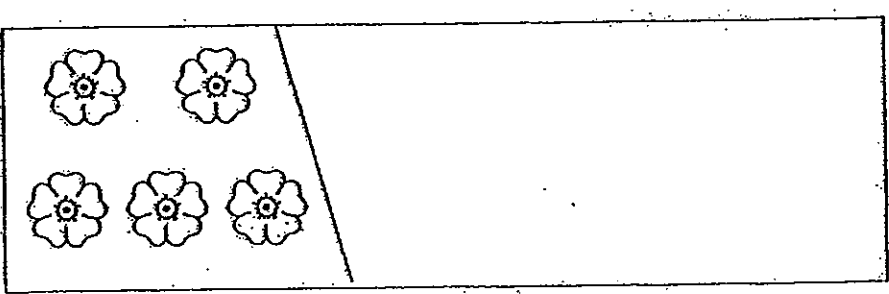
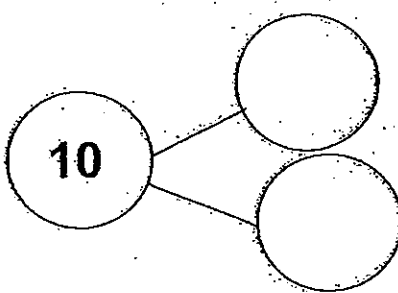
7. Colour two items that make 5. Then complete the number bond.

	
---	---

8. Colour two items that make 8. Then complete the number bond.

	
---	--

9. Draw more flowers to make 10.  
Then complete the number bond below.



# ANSWER SHEET

**EXAM PAPER 2012**

**SCHOOL : SINGAPORE CHINESE GIRLS' SCHOOL**

**SUBJECT : PRIMARY 1 - MATHEMATICS**

**TERM : TOPICAL TEST 2**

1. 4

2. 2

3. 1

4. 1

5. 3

6. 1

