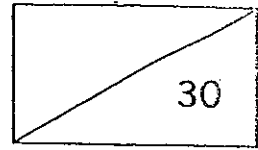


PRIMARY 1
MATHEMATICS
Addition and Subtraction Within 100
TOPICAL TEST 2

Name: _____ ()

Marks:



Class: P1 - _____

Date: 26.8.2013


Duration: 40 minutes

Parent's Signature: _____

Section A (5 x 2m)

There are 5 questions in this section. Read the questions carefully.
Choose the correct answer. Write its number 1, 2, 3 or 4 in the
brackets provided.

1. $54 + 2 =$ _____



1) 52

2) 54

3) 56

4) 57

()

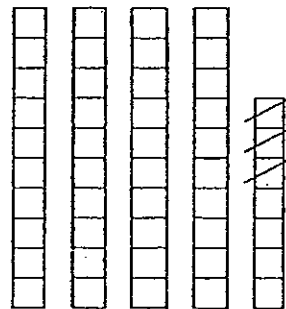
2. $47 - 3 =$ _____

1) 43

2) 44

3) 45

4) 50



()

3. 3 tens + 69 = _____

1) 30

2) 39

3) 72

4) 99

()

4. 6 tens - 1 ten = _____

1) 5

2) 7

3) 50

4) 70

()

5. 15 + 61 = _____ tens + 6 ones

1) 6

2) 7

3) 76

4) 82


()

Section B (8 x 2m)

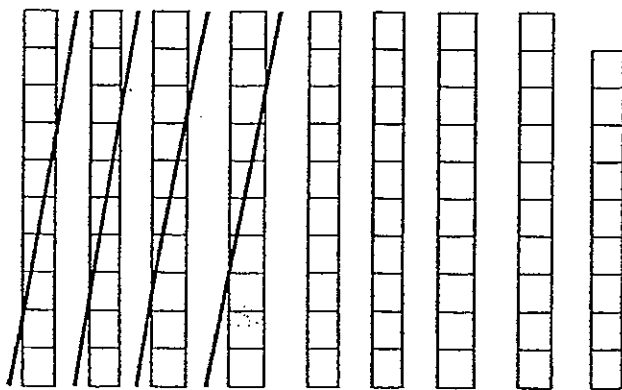
There are 8 questions in this section.

Read the questions carefully. Write your answer in the space provided.

6. $27 + 50 =$



7. $89 - 40 =$



Show your working clearly.

8. $44 + 16 =$

Tens	Ones
4	4
+ 1	6
<hr/>	
<hr/>	

9. 9 tens 8 ones $-$ 3 tens 6 ones $=$

10. 10 more than 21 is

11. Subtract 25 from 78. The answer is

12. Fill in the boxes with the correct number.

$$\begin{array}{r} 5 \quad \square \\ + \square \quad 8 \\ \hline 7 \quad 9 \end{array}$$

13. Billy is thinking of a number.
When he subtracts 23 from that number, he gets 47.
What number is he thinking of?

The number is



Section C (2 x 2m)


There are 2 questions in this section.

Show your working and number sentence clearly in the space provided.

14. Mrs Tan made 35 cupcakes.

Mrs Lee made 43 cupcakes.

How many cupcakes did they make altogether?




They made _____ cupcakes altogether.

Working

15. John had 66 stickers.

He gave 24 stickers to his brother.

How many stickers had he left?



John had _____ stickers left.

Working

ANSWER SHEET

EXAM PAPER 2013

SCHOOL : ROSYTH SCHOOL

SUBJECT : PRIMARY 1 MATHEMMATICS

TERM : TOPICAL TEST 2 - CA 2

Q1	Q2	Q3	Q4	Q5
3	2	4	3	2

Q6 77

Q7 49

Q8 60

Q9 62

Q10 31

Q11 53

Q12 1, 2

Q13 70

Q14 $35 + 43 = 78$

Q15 $66 - 24 = 42$

