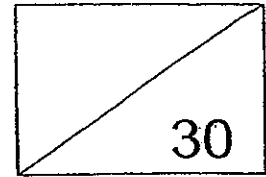


Red Swastika School  
Primary 2  
Mini Test 1  
Mathematics



Name: \_\_\_\_\_ ( )

Date: 29 February 2012

Class: \_\_\_\_\_

Duration: 50 minutes

**Section A: 5 Questions (2 marks each)**

**Choose the correct answer and write its number in the brackets provided.**

1 64 more than 345 is \_\_\_\_\_.

- (1) 109
- (2) 281
- (3) 309
- (4) 409

( )

2 Which number is **greater** than 9 hundreds 3 tens 2 ones but **smaller** than 94 tens?

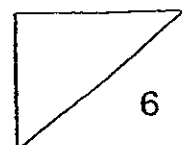
- (1) 940
- (2) 935
- (3) 932
- (4) 928

( )

3 In the number 785, the digit 8 has the value \_\_\_\_\_.

- (1) 8
- (2) 80
- (3) 800
- (4) 8000

( )



147

4  $354 + 504 = \underline{\hspace{2cm}}$ .

- (1) 894
- (2) 858
- (3) 408
- (4) 186

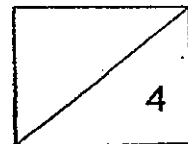
(      )

5 What is the missing number in the box?

$800 = \boxed{\hspace{2cm}} + 406$

- (1) 304
- (2) 394
- (3) 404
- (4) 494

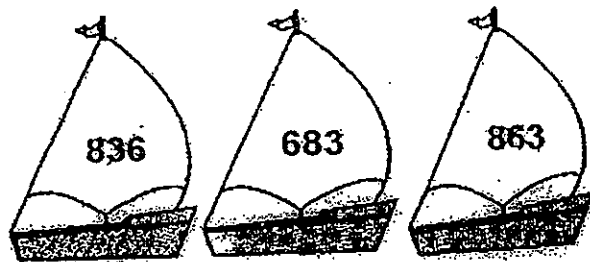
(      )



**Section B: 6 Questions (2 marks each)**

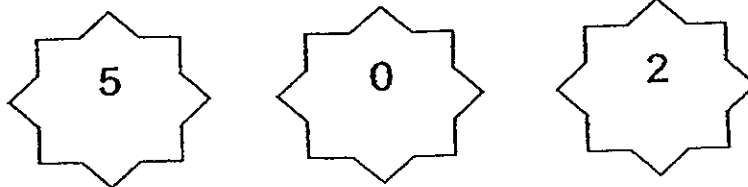
**Work out the following sums and write the answers in the spaces provided.**

6 Arrange these numbers in order. Begin with the greatest.

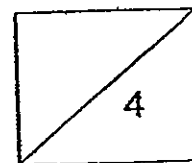


\_\_\_\_\_ , \_\_\_\_\_ , \_\_\_\_\_  
greatest , , smallest

7 Use all the digits below to make the smallest 3-digit number.

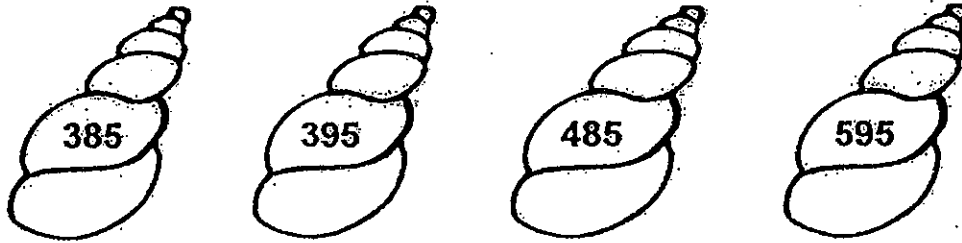


Ans: \_\_\_\_\_



149

8 Look at the numbers carefully and fill in the blanks.



\_\_\_\_\_ is 100 more than \_\_\_\_\_

---

9 7 tens 4 ones + 2 tens = \_\_\_\_\_ tens \_\_\_\_\_ ones

Ans: \_\_\_\_\_ tens \_\_\_\_\_ ones

---

10 Subtract 3 hundreds 9 ones from 832.

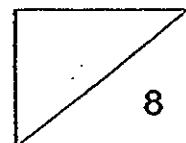
Ans: \_\_\_\_\_

---

11 The sum of three numbers is 678. If the first two numbers are 125 and 342, what is the third number?

Ans: \_\_\_\_\_

---



**Section C : 2 Questions (4 marks each)**

**Do the following sums. Show your workings and statements clearly.**

- 12 Jayden had 500 marbles. He gave 78 marbles to Li Kai and found that they had the same number of marbles. How many marbles did Li Kai have at first?

Li Kai had \_\_\_\_\_ marbles at first.

---

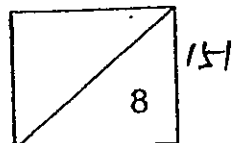
- 13 Ling Ling has 76 beads. Siti has 45 beads. How many more beads do they need to have 130 beads altogether?

They need to have \_\_\_\_\_ more beads to have 130 beads altogether.

---

**END OF PAPER**

Please check your work carefully.





---

# ANSWER SHEET

## EXAM PAPER 2012

SCHOOL : RED SWASTIKA  
SUBJECT : PRIMARY 2 MATHEMATICS

TERM : CA1

---

Q1	Q2	Q3	Q4	Q5
4	2	2	2	2

6)863, 836, 683

7)205

8)485, 385

9)9 tens 4 ones

10)523

11)211

12)500 – 78 = 422

422 – 78 = 344

Li Kai had 344 marbles at first.

13)76 + 45 = 121

130 – 121 = 9

They need to have 9 more beads to have 130 beads altogether.

