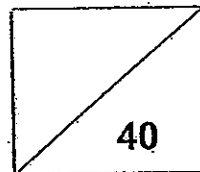


RED SWASTIKA SCHOOL  
2012 MINI TEST 2  
MATHEMATICS  
PRIMARY 2



Name : \_\_\_\_\_ ( )

Date : 9 May 2012

Class: P2 / \_\_\_\_\_

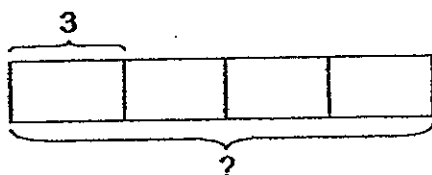
Duration : 50 minutes

Parent's signature: \_\_\_\_\_

**Section A : 14 marks (2 marks each)**

**Choose the correct answer and write its number in the brackets provided.**

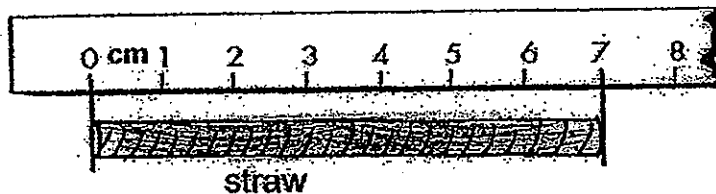
- 1 4 children went to a bookstore.  
They bought 3 books each.  
They bought \_\_\_\_\_ books altogether.



- (1) 16  
(2) 12  
(3) 3  
(4) 9

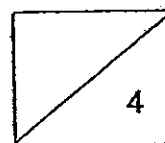
( )

- 2 What is the length of the straw below?




- (1) 0 cm  
(2) 5 cm  
(3) 7 cm  
(4) 8 cm

( )



155

3



The mass of the bag of jelly beans is \_\_\_\_\_ g.

- (1) 200
- (2) 230
- (3) 240
- (4) 250

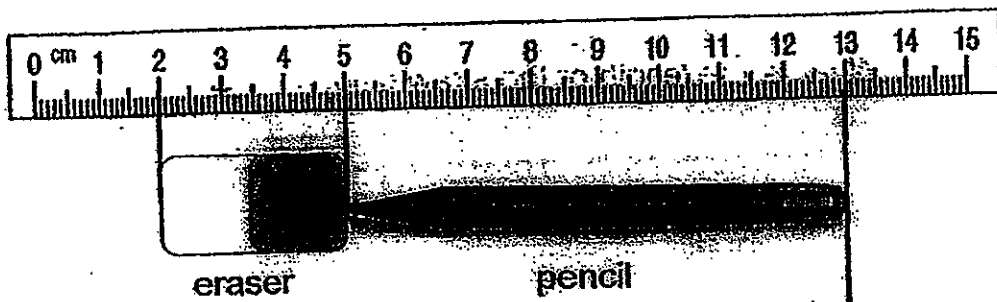
(      )

4       $30 \div 5$  is the same as  $2 \times$  \_\_\_\_\_.

- (1) 25
- (2) 12
- (3) 3
- (4) 6

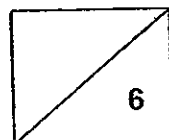
(      )

5      What is the total length of the pencil and eraser?

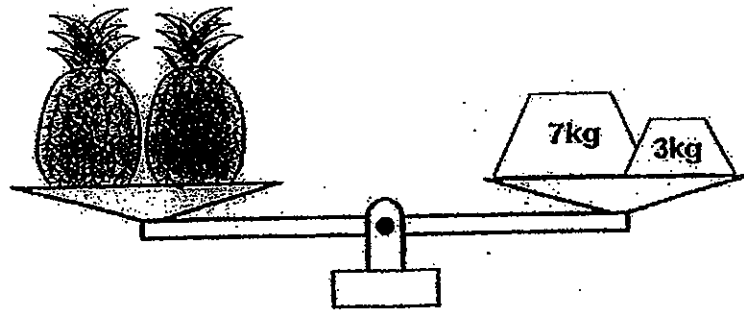


- (1) 13 cm
- (2) 11 cm
- (3) 8 cm
- (4) 4 cm

(      )



6 Study the picture below.

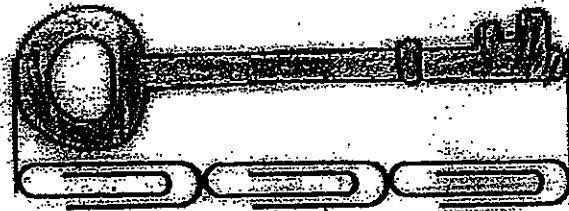
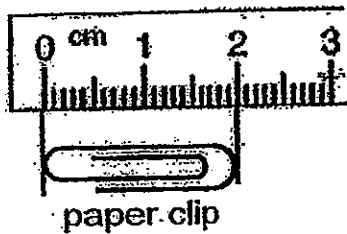


What is the mass of 1 pineapple?

- (1) 1 kg
- (2) 5 kg
- (3) 3 kg
- (4) 7 kg

( )

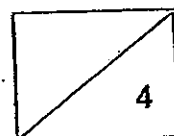
7 Study the pictures below carefully.



The key is three paper clips long.  
What is the length of the key?

- (1) 5 cm
- (2) 2 cm
- (3) 3 cm
- (4) 6 cm

( )

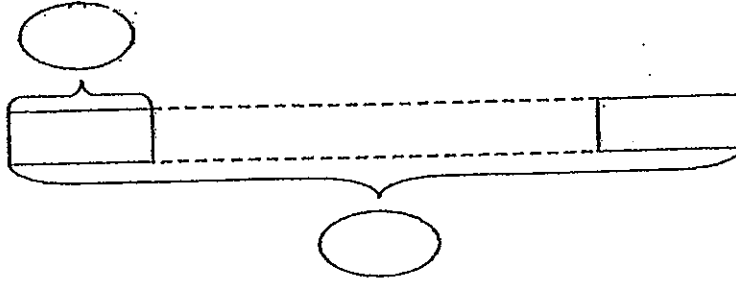


157


**Section B : 14 marks (2 marks each)**

**Work out following sums and write the answer in the spaces provided.**

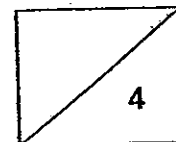
- 8 Mdm Zehan bought 50 cupcakes. She put 5 cupcakes in 1 box. How many boxes did Mdm Zehan have?  
(Complete the model by filling in the ovals with the correct **number**)



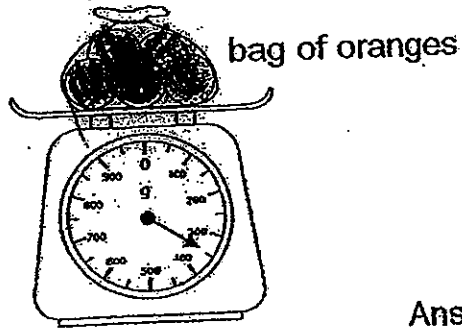
- 9 Look at the picture carefully and answer the question below.



Ans: \_\_\_\_\_ is shorter than \_\_\_\_\_ but taller than \_\_\_\_\_



- 10 Find the mass of the bag of oranges.



Ans: \_\_\_\_\_ g

---

- 11  $8 \times 2 =$  \_\_\_\_\_ fours

Ans: \_\_\_\_\_

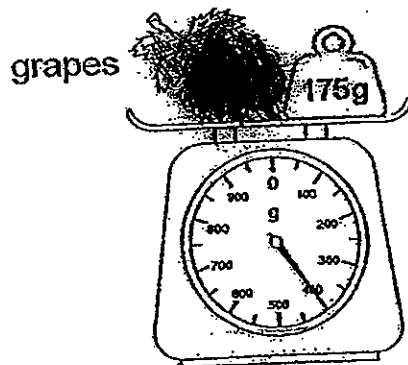
---

- 12 Ryan is 140 cm tall. He is 24 cm shorter than his sister.  
How tall is his sister?

Ans: \_\_\_\_\_ cm

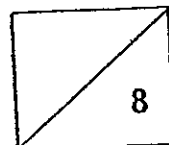
---

- 13 What is the mass of the grapes?



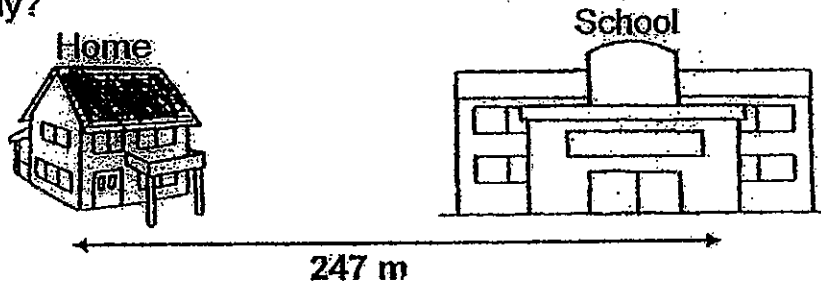
Ans: \_\_\_\_\_ g

---



159

- 14 Susan walks to school and back home every day. What is the total distance that she walks to and from school in one day?



Ans: \_\_\_\_\_ m

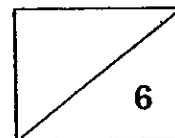
---

**Section C : 12 marks (4 marks each )**

**Do the following sums. Show your workings and statements clearly.**

- 15 There are 30 boys in Class 3B. There are 3 times as many boys as girls in the class. How many girls are there in Class 3B?

There are \_\_\_\_\_ girls in Class 3B.



- 16 5 girls bought a present and shared the cost equally.  
Each girl paid \$10. What was the cost of the present?

The cost of the present was \_\_\_\_\_

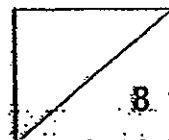
---

- 17 Andy has a mass of 38 kg.  
Billy is 9 kg heavier than Andy.  
What is their total mass?

Their total mass is \_\_\_\_\_

---

END OF PAPER



Please check your work carefully.





# ANSWER SHEET

## EXAM PAPER 2012

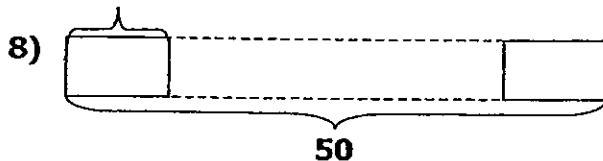
SCHOOL : RED SWASTIKA  
SUBJECT : PRIMARY 2 MATHEMATICS

TERM : SA1

ORDER CALL : MR GAN @ 8606 5443 . 9299 8971 . 8181 9329

Q1	Q2	Q3	Q4	Q5	Q6	Q7
2	3	3	3	2	2	4

5



9) Steve is shorter than Terry but taller than Raju

10) 350g      11) 4

12)  $140 + 24 = 164$   
His sister is 164cm tall.

13)  $400 - 75 = 225g.$                       14)  $247 + 247 = 494m.$

15)  $30 \div 3 = 10$   
There are 10 girls in Class 3B.

16)  $5 \times 10 = 50$   
The cost of the present was \$50.

17)  $38kg + 9kg = 47kg$   
 $38kg + 47kg = 85kg$   
Their total mass is 85kg.

