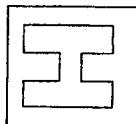


--	--

Candidate Name: _____



millennia
institute

2022 Preliminary Examination
Pre-University 3

H2 CHEMISTRY

9729/01

Paper 1 Multiple Choice

21st Sep 2022

1 hour

Additional materials: Multiple Choice Answer Sheet

Data Booklet

READ THESE INSTRUCTIONS FIRST

Do not turn over this question paper until you are told to do so

Write in soft pencil.

Do not use staples, paper clips, glue or correction fluid.

Write your name, class and admission number in the spaces provided at the top of this page and on the Multiple Choice Answer Sheet provided.

There are **thirty** questions on this paper. Answer **ALL** questions. For each question there are four possible answers **A, B, C** and **D**.

Choose the **one** you consider correct and record your choice in **soft pencil** on the Multiple Choice Answer Sheet provided.

Read the instructions on the Multiple Choice Answer Sheet very carefully.

Each correct answer will score one mark. A mark will not be deducted for a wrong answer.

Any rough working should be done in this question paper.

The use of an approved scientific calculator is expected, where appropriate.

FOR EXAMINER'S USE	
TOTAL (30 marks)	

1	D	7	D	13	C	19	A	25	D
2	D	8	B	14	D	20	C	26	D
3	B	9	C	15	D	21	A	27	C
4	B	10	C	16	C	22	C	28	B
5	C	11	C	17	B	23	A	29	D
6	A	12	B	18	A	24	D	30	D

For each question there are four possible answers, A, B, C, and D. Choose the one you consider to be correct.

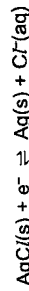
- 1 Which of the following conversions have a percentage yield of 73%?
- 74 g of butan-1-ol ($M_r = 74.0$) \rightarrow 52.56 g of butanal ($M_r = 72.0$)
 - 72 g of butanone ($M_r = 72.0$) \rightarrow 54.02 g of butan-2-ol ($M_r = 74.0$)
 - 56 g of but-2-ene ($M_r = 56.0$) \rightarrow 87.60 g of ethanoic acid ($M_r = 60.0$)
- A 1 only
 B 1 and 2 only
 C 2 and 3 only
 D 1, 2 and 3

- 2 Ferric oxalate, $\text{Fe}_2(\text{C}_2\text{O}_4)_3$, is an ionic salt. A sample of 10.0 cm^3 of $0.100 \text{ mol dm}^{-3}$ ferric oxalate is titrated against $0.100 \text{ mol dm}^{-3}$ acidified KMnO_4 .

What is the volume of KMnO_4 required to reach end point, and the total volume of CO_2 gas evolved at r.t.p.?

	volume of KMnO_4	volume of gas
A	4.0 cm^3	72 cm^3
B	4.0 cm^3	144 cm^3
C	12.0 cm^3	72 cm^3
D	12.0 cm^3	144 cm^3

- 3 Use of the Data Booklet is relevant to this question.
- The silver chloride electrode is a type of reference electrode commonly used in electrochemical measurements. It can be represented as below.



The reduction potential of the $\text{Co}^{3+}/\text{Co}^{2+}$ half-cell is $+1.69 \text{ V}$ when it is measured using the AgCl/Ag reference electrode at standard conditions.

What is the reduction potential of the AgCl/Ag electrode when it is measured against the standard hydrogen electrode as reference?

- A -1.89 V B $+0.20 \text{ V}$ C $+1.49 \text{ V}$ D $+1.89 \text{ V}$

- 4 Use of the Data Booklet is relevant to this question.

Which of the following statements are true?

- I_2 can reduce $\text{S}_2\text{O}_3^{2-}$ to $\text{S}_4\text{O}_6^{2-}$.
- K is a stronger reducing agent than Ca.
- When $\text{Br}_2(\text{g})$ is bubbled into $\text{NaI}(\text{aq})$, an orange solution is produced.

A 1 only

B 2 only

C 1 and 2 only

D 2 and 3 only

- 5 The first six ionisation energies of an element, E, in kJ mol^{-1} , are shown.

578 1817 2745 11577 14842 18379

E forms an oxide when it is heated with oxygen gas.

What is the electronic configuration of E in its oxide form?

A $1s^2$

B $1s^2 2s^2 2p^1$

C $1s^2 2s^2 2p^6 3s^2 3p^1$

D $1s^2 2s^2 2p^6 3s^2 3p^1$

- 6 In which of the following pairs of compounds would the second compound have a higher boiling point than the first compound?

1 CH_3CHO , $\text{CH}_3\text{CH}_2\text{OH}$

2 AlF_3 , AlCl_3

3 $\text{CH}_3\text{CH}_2\text{CH}_2\text{CH}_2\text{CH}_3$, $\text{C}(\text{CH}_3)_4$

A 1 and 2 only

B 1 and 2 only

C 1 and 3 only

D 2 and 3 only

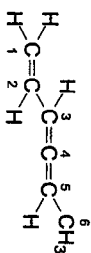
- 7 Information about the properties of some compounds are given below.

compound	boiling point / °C
HF	19.5
NH ₃	-33.3
H ₂ O	100

Which statement about the hydrogen bonding in these compounds is correct?

- A HF has a higher boiling point than NH₃ because each HF molecule can form more hydrogen bonds on average compared to each NH₃ molecule.
 B H₂O has a higher boiling point than HF because the H–O bond dipole is greater than the H–F bond dipole.
 C H₂O has a higher boiling point than HF because hydrogen bonding between two molecules of H₂O causes it to dimerise.
 D NH₃ has the lowest boiling point because it forms few hydrogen bonds on average and has the smallest bond dipole.

- 8 Covalent bonds involve the overlapping of orbitals.

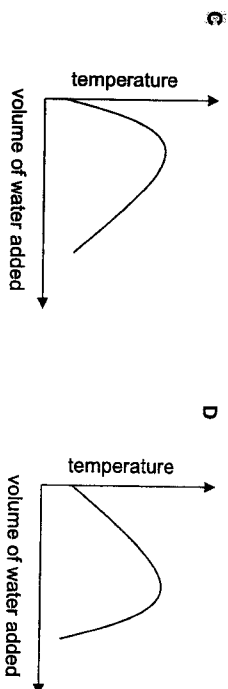
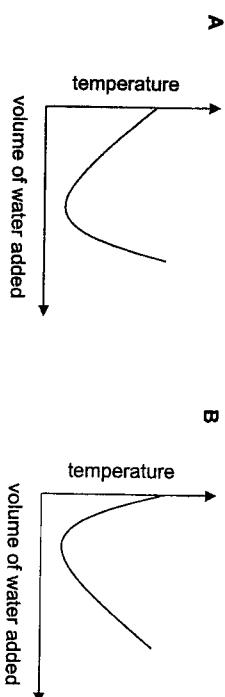


Which statement does not describe the molecule above?

- A The σ bond between C2–H is formed by $2sp^2-1s$ overlap.
 B The σ bond between C3–C4 is formed by $2sp^2-2sp^2$ overlap.
 C The σ bond between C5–C6 is formed by $2sp^2-2sp^3$ overlap.
 D The π bond between C4–C5 is formed by $2p-2p$ overlap.

- 9 When glucose is stirred into water and dissolved, strong hydrogen bonds are formed initially between the glucose and water molecules. As more water is added, these same hydrogen bonds are subsequently broken.

Assuming that the rate of energy change remains relatively constant throughout, which of the following graphs best represents the observed temperature changes?



- 10 The ΔH_c values of some hydrocarbons are given below.

hydrocarbon	$\Delta H_c / \text{kJ mol}^{-1}$	M_r
CH ₄	-889	16.0
C ₂ H ₆	-1560	30.0

What is the ratio of heat generated by CH₄ to C₂H₆ when the same mass of each hydrocarbon is burnt?

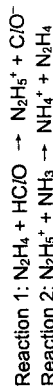
- A 0.57 B 0.94 C 1.07 D 1.14

11 20 m³ of neon gas at a pressure of 30 kPa and 30 m³ of argon gas at a pressure of 50 kPa were introduced into an evacuated 15 m³ flask at a constant temperature of 300 K. The final pressure in the flask was F kPa.

What are the value of F?

	F / kPa
A	42
B	80
C	140
D	178

12 Two acid-base reactions are shown below:



Which of the following statements is incorrect?

- ClO^- is the conjugate base of HClO .
 - N_2H_5^+ is the Bronsted acid in Reaction 2.
 - N_2H_4 is the Lewis acid in Reaction 1.
- A 1 only
 B 3 only
 C 1 and 2 only
 D 2 and 3 only

13 The radioactive decay of an element, H, is a first order reaction and produces element I as the product:



1.00 mol of H was set aside and allowed to decay. Given that it takes 8 days for 0.75 mol of I to be produced, what fraction of H remains after 40 days?

- A $\left(\frac{1}{2}\right)^1$ B $\left(\frac{1}{2}\right)^5$ C $\left(\frac{1}{2}\right)^{10}$ D $\left(\frac{1}{2}\right)^{25}$

14 N_2O decomposes in the presence of gold catalyst as follows:

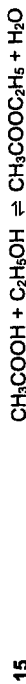


The following data is obtained from an experiment carried out at 1200 K.

time / s	0	1040	2370	4250	7460
partial pressure of N_2O / kPa	25.0	20.0	15.0	10.0	5.0

Which of the following statements is incorrect?

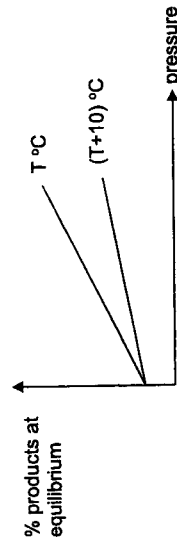
- A The reaction is first order with respect to N_2O .
 B The total pressure upon reaction completion can be determined from the above data.
 C The values of the partial pressures of N_2O are affected by temperature.
 D The value of the constant of the reaction remains the same even in a different solvent.



Which of the following conditions will be met when the above reaction has reached dynamic equilibrium?

- A The equilibrium constant K is equal to 1.
 B The reaction between the acid and the alcohol has stopped.
 C The concentrations of the products equal those of the reactants.
 D The rate of production of the products is the same as the rate of the reactants.

16 The graph below shows the percentage of products present at equilibrium over a range of temperatures and pressures.



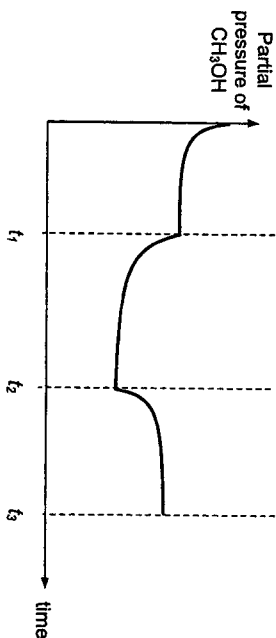
Which of the following reactions could the graph represent?

- A $\text{C}(\text{s}) + \text{O}_2(\text{g}) \rightleftharpoons 2\text{CO}(\text{g})$ $\Delta H = -99 \text{ kJ mol}^{-1}$
 B $\text{H}_2(\text{g}) + \text{I}_2(\text{g}) \rightleftharpoons 2\text{HI}(\text{g})$ $\Delta H = +20 \text{ kJ mol}^{-1}$
 C $\text{N}_2(\text{g}) + 3\text{H}_2(\text{g}) \rightleftharpoons 2\text{NH}_3(\text{g})$ $\Delta H = -92 \text{ kJ mol}^{-1}$
 D $\text{N}_2\text{O}_4(\text{g}) \rightleftharpoons 2\text{NO}_2(\text{g})$ $\Delta H = +57 \text{ kJ mol}^{-1}$

- 17 A synthesis was carried out to produce methanol from hydrogen and carbon monoxide at a high temperature:



The partial pressure of $\text{CH}_3\text{OH}(\text{g})$ was monitored over time, and changes were made to the reaction system at times t_1 and t_2 .



- What are the possible changes made to the system at t_1 and t_2 ?
- | | |
|--|--|
| <p>A CH_3OH was removed</p> <p>B CO was removed</p> <p>C Temperature was increased</p> <p>D Temperature was decreased</p> | <p>A Temperature was increased</p> <p>B Temperature was decreased</p> <p>C CO was removed</p> <p>D CH_3OH was added</p> |
|--|--|

- 18 Pure water undergoes slight auto-ionisation:



Which of the following equations about water at 10°C is true?

- A** $\text{pH} > 7$
B $\text{pH} = 7$
C $\text{pH} < 7$
D $[\text{H}^+] < [\text{OH}^-]$

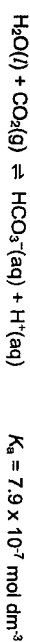
- 19 Trimethylamine, $(\text{CH}_3)_3\text{N}$, has a $\text{p}K_b$ of 4.1.

10.0 cm^3 of 0.1 mol dm^{-3} $(\text{CH}_3)_3\text{N}$ was pipetted into a conical flask and titrated against 10.00 cm^3 of 0.1 mol dm^{-3} HCl .

Which of the following statements is true about the pH of the reaction mixture?

	before addition of HCl	after adding 10.00 cm^3 HCl
A	11.5	5.6
B	11.5	9.9
C	13.8	5.6
D	13.8	9.9

- 20 The blood buffer system in the human body which maintains the pH of blood at 7.40 can be represented with the following equilibrium:



Which of the following statements about the blood buffer system is **not** true?

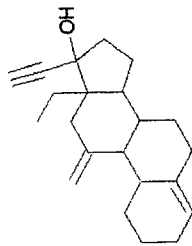
- A** During vigorous exercise which produces large amounts of lactic acid in the blood, the body regulates pH by exhaling more CO_2 .
B When a person hyperventilates (breathes in and out excessively quickly), the loss of CO_2 causes the pH of blood to increase slightly.
C The pH of blood is 7.40 when the ratio of $[\text{HCO}_3^-] : [\text{CO}_2]$ is 16:1.
D The blood buffer system is made up of H_2CO_3 and HCO_3^- .

- 21 Ag_2CO_3 is a sparingly soluble salt with a K_{sp} value of $8.2 \times 10^{-12} \text{ mol}^3 \text{ dm}^{-9}$.

Which one of the following statements about a solution containing solid Ag_2CO_3 is correct?

- A** Addition of $\text{NaCl}(\text{aq})$ causes more Ag_2CO_3 solid to dissolve.
B Addition of sodium carbonate increases the solubility of Ag_2CO_3 .
C Addition of AgNO_3 solution decreases the K_{sp} value of Ag_2CO_3 .
D Addition of water decreases the solubility of Ag_2CO_3 .

22 Desogestrel is a medication used in birth control pills.




desogestrel

How many stereoisomers does desogestrel have?

- A 2⁴ B 2⁵ C 2⁶ D 2⁷

23 The structures of two amino acids are given below.



Which of the following statements about the amino acids is correct?

- A Both compounds are able to form zwitterions.
 B Both compounds are able to react with ethanoic acid in the presence of concentrated sulfuric acid to give an amide.
 C Both compounds are able to react with NaBH₄ in methanol to give an alcohol.
 D Both compounds are soluble in water due to the formation of intermolecular hydrogen bonding.

24 Benzene, C₆H₆, is a non-polar molecule.

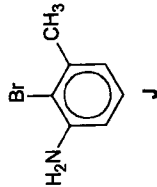
Which of the following statements are true about benzene?

- 1 Benzene is a good conductor of electricity due to its delocalised π electrons.
 2 Benzene undergoes addition reactions readily due to its unsaturated C=C bonds.
 3 The enthalpy change of hydrogenation of benzene is less exothermic than that predicted for cyclohexene.
 4 There is a high energy barrier to rotation about the C-C bond in benzene.

- A 1 and 2 only
 B 1 and 3 only
 C 2 and 3 only
 D 3 and 4 only

25 Use of the Data Booklet is relevant to this question.

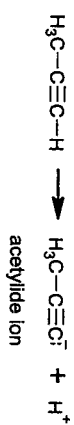
Compound J can be synthesised starting from benzene.



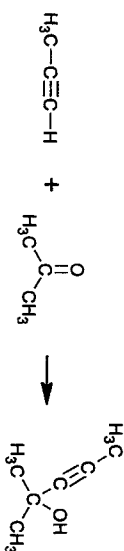
Which of the following synthetic routes will yield the optimum amount of J?

- A alkylation → bromination → nitration → reduction
 B alkylation → nitration → reduction → bromination
 C bromination → alkylation → nitration → reduction
 D bromination → nitration → alkylation → reduction

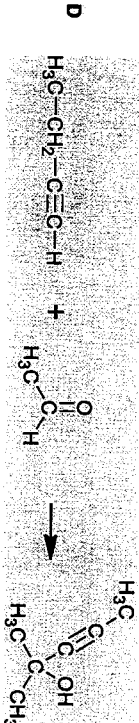
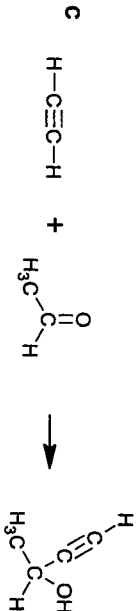
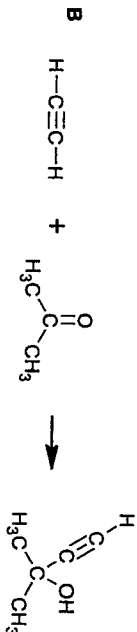
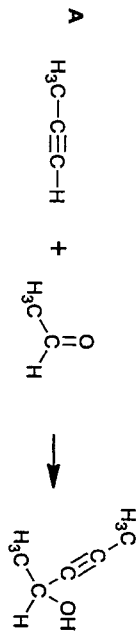
- 26 Alkynes can be deprotonated to form strong nucleophilic ions known as acetylides.



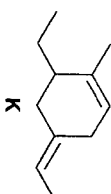
The acetylide ion can react with carbonyl compounds. An example of such a reaction is shown below.



Which of the following reaction schemes does not show the correct corresponding product formed?



- 27 Compound **K** has the following structure:



Which of the following statements are correct when **K** is treated with hot acidified KMnO_4 ?

- 1 There is only one organic product.
 - 2 The product(s) contain at least one carbonyl functional group.
 - 3 The product(s) contain at least one carboxylic acid functional group.
- A** 1 only
B 1 and 2 only
C 2 and 3 only
D 1, 2 and 3

- 28 A Period 3 chloride and Period 3 oxide are dissolved in two separate portions of water to form aqueous solutions.

Both of the resulting solutions can be used to dissolve Al_2O_3 but only one of the two can dissolve SiO_2 slightly.

Which of the following could be the chloride and the oxide used?

- | | | |
|---|-----------------|---------------------------|
| 1 | PCl_5 | P_4O_{10} |
| 2 | MgCl_2 | SO_3 |
| 3 | SiCl_4 | Na_2O |
- A** 2 only
B 3 only
C 1 and 2 only
D 1 and 3 only

- 29 Which of the following correctly describes the complex formed when different reagents are added to solid copper(II) sulfate?

	reagent added	colour of resultant solution	identity of coloured complex ion
A	H ₂ O	pale blue	[Cu(H ₂ O) ₆] ²⁺
B	H ₂ O, followed by Zn	pink	[Cu(H ₂ O) ₆] ²⁺
C	conc. HCl	yellow	[CuCl ₄] ²⁻
D	excess NH ₃ (aq)	dark blue	[Cu(NH ₃) ₄ (H ₂ O) ₂] ²⁺

- 30 Solid Cr₂O₃ can be used as a catalyst in the synthesis of methanol.



- Which of the following statements is **false** about the use of Cr₂O₃ in this synthesis?

- A Cr₂O₃ functions as a catalyst by increasing the concentration of reactant molecules on its surface.
 B Cr₂O₃ lowers the activation energy by using its partially filled 3d orbitals for the adsorption of reactant molecules.
 C The Cr atom of Cr₂O₃ is able to form temporary bonds to the reactants.
 D The oxidation state of Cr is increased after the reaction.

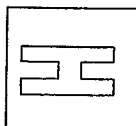
END OF PAPER 1

BLANK PAGE

[Turn over

Candidate Name: _____

--	--



millennia
institute

2022 Preliminary Exams

Pre-University 3

H2 CHEMISTRY

Paper 2 Structured Questions

9729/02

14 Sep 2022

2 hours

Candidates answer on the Question paper.

Additional materials: Data Booklet

READ THESE INSTRUCTIONS FIRST

Do not turn over this question paper until you are told to do so

Write your name, class and admission number on all the work you hand in.

Write in dark blue or black pen.

You may use an HB pencil for any diagrams or graphs.

Do not use staples, paper clips, glue or correction fluid.

Answer all questions.

The use of an approved scientific calculator is expected, where appropriate.

A Data Booklet is provided.

At the end of the examination, fasten all your work securely together.

The number of marks is given in brackets [] at the end of each question or part question.

Question	1	2	3	4	5	Total
Marks	20	13	24	9	9	75

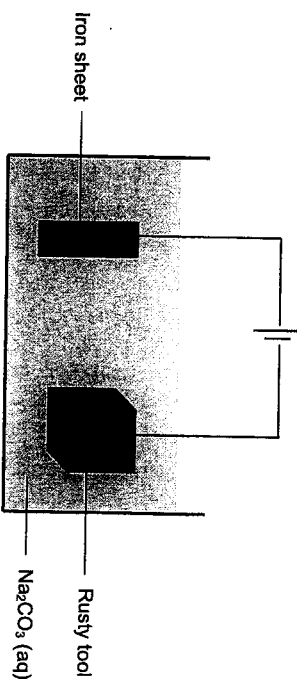
This question paper consists of 16 printed pages and 2 blank pages.

Answer all questions in the spaces provided.

- 1 Many household tools are made from stainless steel as it is highly resistant to corrosion and rust. Stainless steel contains iron, chromium, manganese, nickel, molybdenum, silicon and carbon which interacts with oxygen from water and air to form oxides. Of these elements, chromium has the highest resistance to corrosion.

Despite the high resistance, rusting still occurs in a humid environment. A 'Do-it-Yourself' (DIY) kit has been launched in the market to remove rust from household tools and the set-up is shown in Figure 1.1.

Figure 1.1



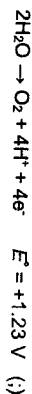
- (a) (i) State if the iron sheet is the anode or the cathode. [1]

anode

- (ii) Use of Data Booklet is relevant to this question.

State and explain the observations found at the iron sheet electrode. [2]

The iron sheet will become smaller. (✓)

Since $E^\ominus_{\text{Fe}^{2+}/\text{Fe}}$ is more negative than $E^\ominus_{(\text{O}_2/\text{H}_2\text{O})}$, Fe is preferentially oxidized to Fe^{2+} . (✓)

- (iii) Suggest why carbonate ions from Na_2CO_3 electrolyte cannot be oxidised at the anode. [1]

Carbon in carbonate is at the maximum oxidation state of +4 or the electrode potential involving carbonate ion is very positive.

(iv) A consumer saw the DIY kit and decided to purchase it and try out on his rusted dumbbell. He prepared the set up as shown in Figure 1.1 with a 20 A power source and switched it on for 6 hours.

Determine the change in mass of the iron sheet. [2]

$$Q = It = 20 \times 6 \times 60 \times 60 = 432000 \text{ C}$$

$$\text{Amount of electrons} = 432000 / 96500 = 4.477 \text{ mol (i)}$$

$$\text{Amount of Fe} = 4.477 / 2 = 2.238 \text{ mol}$$

$$\text{Mass of Fe} = 2.238 \times 55.8 = 125 \text{ g (i)}$$

(b) Fe₂O₃ is the main constituent of the rust found on household items. The standard electrode potentials involving the iron containing species can be found in Table 1.1.

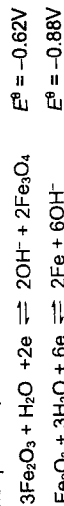
Table 1.1

Half-equations	E°/V
3Fe ₂ O ₃ + H ₂ O + 2e ⇌ 2OH ⁻ + 2Fe ₃ O ₄	-0.62
Fe ₂ O ₃ + 3H ₂ O + 6e ⇌ 2Fe + 6OH ⁻	-0.88
Fe ₃ O ₄ + 4H ₂ O + 8e ⇌ 3Fe + 8OH ⁻	-0.91

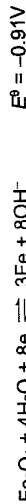
A layer was coated around the rusty tool after using the DIY kit.

With reference to the standard electrode potentials given in Table 1.1, explain fully whether the layer coated is iron. [2]

Using data from the question,



The layer is Fe₃O₄. Since E°_{Fe₂O₃/Fe₃O₄} is more positive/less negative than E°_{Fe₂O₃/Fe}, Fe₂O₃ will be reduced to Fe₃O₄ and not to Fe. (i)



It is not possible to regenerate pure iron as the reduction potential E°_{Fe₃O₄/Fe} is the least positive/most negative, thus Fe₃O₄ will not be further reduced. (i)

Hence, the layer coated is Fe₃O₄.

(c) The metal alloy that made up the main components of stainless steel are transition metals. [1]
(i) Define transition metal.

A transition element is a **d-block element** which forms **at least one simple ion**, in compounds, with a **partially filled d-subshell**.

(ii) State a physical property of transition metals which makes them a suitable material used for household tools compared to main group metals. [1]
They have high densities

(iii) Iron(III) ions catalyse the reaction between I⁻ ions and S₂O₈²⁻ ions through homogeneous catalysis.

Explain the term *homogeneous catalyst*. [1]

The catalyst is in the **same phase** as the reactants and it **speeds up the rate of reaction** by **lowering the activation energy** without itself being chemically changed at the end of the reaction.


(iv) By considering relevant E° values from the Data Booklet, and using balanced equations, determine whether chromium(III) ions are suitable catalyst for the reaction between I⁻ ions and S₂O₈²⁻ ions. [2]

No it is not suitable as the E_{cell} for one of the step is less than zero, making the reaction non-spontaneous. (i)

$$2\text{Cr}^{3+} + 2\text{I}^- \rightarrow \text{I}_2 + 2\text{Cr}^{2+} \quad E_{\text{cell}} = -0.41 - (+0.54) = -0.95 \text{ V (i)}$$

$$2\text{Cr}^{2+} + \text{S}_2\text{O}_8^{2-} \rightarrow 2\text{Cr}^{3+} + 2\text{SO}_4^{2-} \quad E_{\text{cell}} = +2.01 - (-0.41) = +2.42 \text{ V}$$

(v) Describe the structure and bonding in the element chromium. Draw a diagram to illustrate your answer. [2]



(i)

Cr has giant metallic structure held by strong electrostatic forces of attraction between (positive) chromium ions and 'sea' of delocalised electrons. (i)

(f) Chromium(III) oxide has the same acid-base behaviour as aluminium oxide.

(i) State the type of oxide chromium(III) oxide exists as in terms of its acid-base behaviour. [1]

Amphoteric oxide

(ii) By quoting relevant data from the *Data Booklet*, explain why chromium(III) oxide and aluminium oxide have the same acid-base behaviour. [2]

Cr^{3+} has an ionic radius of 0.062 nm while Al^{3+} has an ionic radius of 0.050 nm (:) while both have the charge of +3. As the charge density of the cations are similar (:), they have similar degree of covalent character, hence behave similarly.

(iii) Use of *Data Booklet* is relevant to this question.

Describe the observations when dilute NaOH is slowly added to the solution containing chromium(III) ions until in excess. [2]

Grey-green precipitate is formed which dissolves in excess to give a dark green solution.

[Total: 20]

- 2 (a) An aqueous solution of chlorine dioxide undergoes disproportionation in sodium hydroxide to form chlorate(V) ion, ClO_3^- , and hypochlorite ion, ClO^- . The reaction is catalysed by OBr^- ion.



To study the kinetics of this reaction at 25 °C, initial rates were measured using various concentrations of ClO_2 , OH^- and OBr^- .

experiment	$[\text{ClO}_2]/$ mol dm^{-3}	$[\text{OH}^-]/$ mol dm^{-3}	$[\text{OBr}^-]/$ mol dm^{-3}	initial rate/ $\text{mol dm}^{-3} \text{ s}^{-1}$
1	0.02	0.05	0.01	2.30×10^{-3}
2	0.10	0.02	0.03	6.90×10^{-2}
3	0.02	0.10	0.01	4.60×10^{-3}
4	0.04	0.02	0.03	1.10×10^{-2}

(i) Explain, in terms of oxidation numbers, why this reaction is a disproportionation reaction. [2]

The oxidation number of Cl in ClO_2 increases from +4 to +5 in ClO_3^- and decreases from +4 to +1 in ClO^- (:). Since ClO_2 is oxidised and reduced at the same time (:), it is a disproportionation reaction.

(ii) Determine the orders of reaction with respect to ClO_2 , OH^- and OBr^- . [3]

Comparing experiment 1 and 3, when $[\text{OH}^-]$ increases by 2 times, keeping $[\text{ClO}_2]$ and $[\text{OBr}^-]$ constant, initial rate is increased by 2 times, order of reaction w.r.t. OH^- is 1.

Comparing experiment 2 and 4, when $[\text{ClO}_2]$ increase by 2.5 times, keeping $[\text{OH}^-]$ and $[\text{OBr}^-]$ constant, initial rate is increased by 6.27 times, order of reaction w.r.t. ClO_2 is 2.

Let the rate equation be: rate = $k[\text{ClO}_2]^x[\text{OH}^-]^y[\text{OBr}^-]^z$

Using Expt 1 and 4

$$\frac{2.30 \times 10^{-3}}{1.10 \times 10^{-2}} = \frac{k(0.02)^x(0.05)^y(0.01)^z}{k(0.04)^x(0.02)^y(0.03)^z}$$

$$0.3345 = \left(\frac{0.01}{0.03}\right)^z$$

$$x = 1$$

order of reaction w.r.t. OBr^- is 1.

(iii) Hence, write the rate equation for the reaction. [1]

$$\text{Rate} = k[\text{ClO}_2]^2[\text{OH}^-][\text{OBr}^-]$$

(iv) Calculate the rate constant, k , of the reaction and state its units. [2]

Using Expt 1,

$$2.3 \times 10^{-3} = k(0.02)^2(0.05)(0.01)$$

$$k = 11500 \text{ (:) mol}^3 \text{ dm}^9 \text{ s}^{-1} \text{ (:)}$$

(v) Determine the initial pH of an aqueous solution of the reaction mixture if the concentration of chlorine dioxide is $0.200 \text{ mol dm}^{-3}$ and the concentration of OBr^- is 0.1 mol dm^{-3} , given that the initial rate of reaction is $1.45 \text{ mol dm}^{-3} \text{ s}^{-1}$. [2]

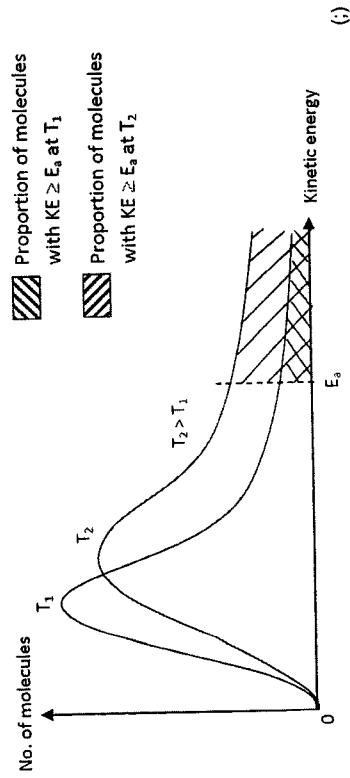
$$[\text{OH}^-] = 0.03152 \text{ mol dm}^{-3} \text{ (:)}$$

$$\text{pOH} = -\log [\text{OH}^-]$$

$$= 1.50$$

$$\text{pH} = 14 - 1.50 = 12.5 \text{ (:)}$$

- (b) With an appropriate sketch of the Maxwell-Boltzmann distribution, explain how a rise in temperature affects the rate of reaction. [3]



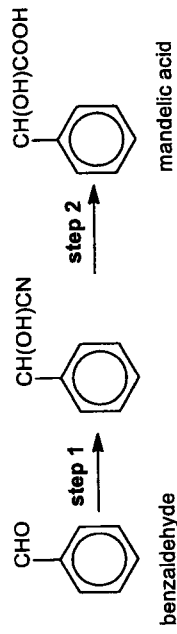
At higher temperatures, molecules gain kinetic energy. (:) The fraction of molecules with kinetic energy greater than or equal to activation energy increases. Thus, frequency of effective collision increases, rate increases. (:)

[Total: 13]

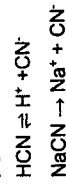
- 3 Alpha hydroxy acids (AHA) have a general formula of $RCH(OH)COOH$. They are a group of plant and animal-derived acids used in a variety of skincare products and are known to tackle hyperpigmentation and signs of skin aging.

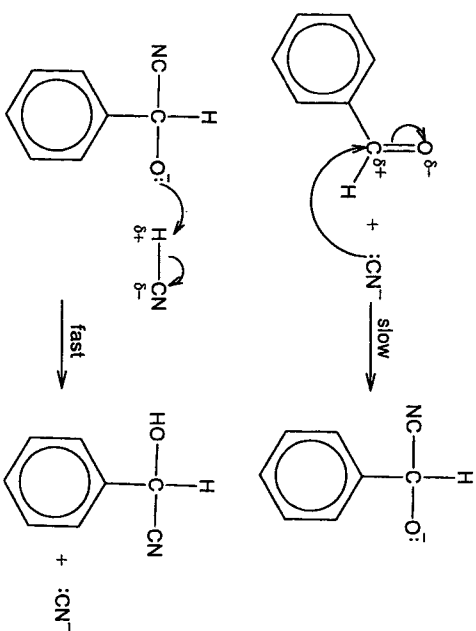
- (a) (i) Explain why AHAs are generally water-soluble. [2]
 Energy given out from the formation of hydrogen bonding between AHA and water is sufficient to overcome the hydrogen bonding between AHA and between water molecules.
- (ii) Glycolic acid, $CH_2(OH)COOH$, lactic acid, $CH_3CH(OH)COOH$, and mandelic acid, $C_6H_5CH(OH)COOH$, are examples of AHA. [1]
 Suggest, with reasoning, which of the three AHAs is the most soluble in water.
 Glycolic acid as it is the most polar with the smallest hydrocarbon chain.

- (b) Mandelic acid can be synthesised in the laboratory from benzaldehyde by the following reactions.



- (i) State the reagent and conditions used in step 1. [1]
 HCN, trace amount of NaCN, cold
- (ii) State the type of reaction that occurs in step 1 and 2. [2]
 Step 1: Nucleophilic addition
 Step 2: acidic hydrolysis
- (iii) Describe the mechanism of the reaction in step 1. Show clearly all charges and the intermediate formed and use curly arrows to indicate the movement of electron pairs. [3]





(W) Predict, with reasoning, whether the product of **step 1** is able to rotate plane-polarised light.

There is a trigonal planar arrangement about the carbonyl carbon (1). The CN⁻ nucleophile can attack from either side of the plane with equal probability. This results in an equimolar mixture of both enantiomers/ racemic mixture (1) being formed which does not rotate the plane of polarised light. (1)

(V) A scientist carrying out the synthesis of mandelic acid would like to check if all the reactants in **step 1** have been used up.

Devise a suitable chemical test which can help him verify if all the reactants in **step 1** have been used up and include observations in your answer. [2]

Add Tollens' reagent and warm to a small sample of the reaction mixture. (1)

No silver mirror precipitate will be formed if all the reactants have been used up. (1)

(c) Glycolic acid is produced by plants during photorespiration and is recycled by conversion to glycine, $\text{H}_2\text{NCH}_2\text{COOH}$, within the cytoplasm. The same conversion can be done in the laboratory.

Devise a two-step synthetic route that converts glycolic acid to glycine in a laboratory.

Include the reagents and conditions and the structure of the intermediate product. [3]



Step 1: $\text{HCl}(\text{g}) / \text{NaCl}$, conc H_2SO_4 , heat

Step 2: excess concentrated ethanolic NH_3 , heat in sealed tube

[Turn over

(d) A polypeptide made up of 10 amino acid residues is partially hydrolysed to give four smaller fragments. The four fragments are:

ala-gly-ser-gln
lys-trp-arg-pro
gln-his-lys
asp-ala-gly.

Deduce the sequence of the peptide chain. [1]

asp-ala-gly
ala-gly-ser-gln
gln-his-lys
lys-trp-arg-pro
asp-ala-gly-ser-gln-his-lys-trp-arg-pro

(e) Amino acids can be neutral, positively or negatively charged, depending on the pH of the solution.

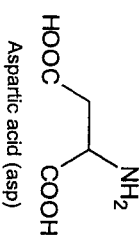
Amino acid exists as zwitterions at the isoelectric point.

(i) Define zwitterion.

[1]

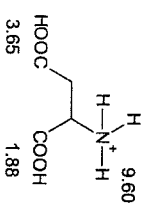
Zwitterion is a dipolar ion formed by the intramolecular migration of the proton (H^+), from the carboxyl group to the amino group. There is no net charge and is electrically neutral.

(ii) Aspartic acid is an α -amino acid which has the R group $-\text{CH}_2\text{COOH}$.

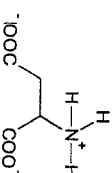


When fully protonated, the pK_a values of the acidic groups are 1.88, 3.65 and 9.60.

Draw the fully protonated aspartic acid and assign the pK_a values. [2]



(iii) Hence, draw the major species of aspartic acid at pH 5. [1]



(iv) Aspartic acid was accidentally mixed with lysine at pH 5.



Electrophoresis is a technique to separate the amino acids in an electric field. The sample was loaded onto an electrophoresis tank buffered at pH 5.0 and an electric field was applied.

On Figure 3.1, draw and label the relative positions of lysine and aspartic acid after the electrophoresis.

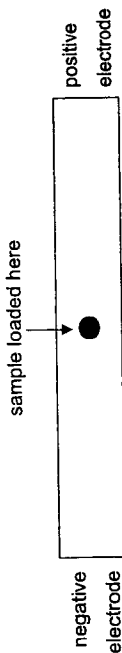
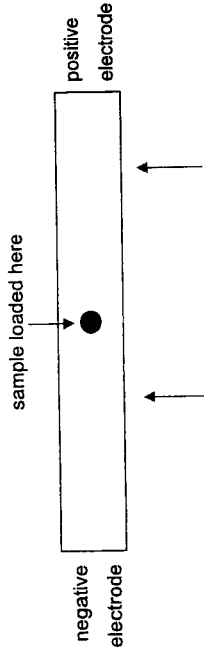


Figure 3.1




[Total: 24]

[Turn over

4 (a) Methane, CH₄ is the second major greenhouse gas after CO₂, exerting a significant influence on the climate and the chemistry of the atmosphere.

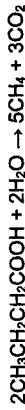
Biological methods have also been developed to produce methane from organic acids using bacteria. An example of this reaction where methane is produced from butanoic acid is shown below.



(i) Calculate the average oxidation state of C in each of the following carbon-containing compound.

- C in CH₃CH₂CH₂COOH:
- C in CH₄:
- C in CO₂:
- C in CH₃CH₂CH₂COOH: -1
- C in CH₄: -4
- C in CO₂: +4

(ii) Hence, or otherwise, balance the equation by filling in the stoichiometric coefficient in the above equation where methane is produced from butanoic acid in (a). [1]

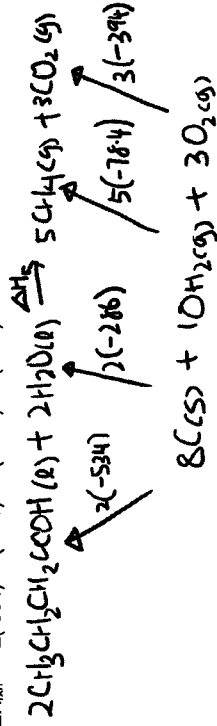


(iii) Using the thermochemical data shown in Table 4.1, draw a fully-labelled energy cycle to calculate the standard enthalpy change of reaction, ΔH_r, in (a). [3]

Table 4.1

Standard enthalpy change of formation of liquid butanoic acid	-534 kJ mol ⁻¹
Standard enthalpy change of combustion of carbon	-394 kJ mol ⁻¹
Standard enthalpy change of combustion of hydrogen	-286 kJ mol ⁻¹
Standard enthalpy change of formation of methane	-78.4 kJ mol ⁻¹

$$\Delta H_{\text{rxn}} = -2(-534) - 2(-286) + 5(-78.4) + 3(-394) = +66.0 \text{ kJ mol}^{-1}$$



1m for balanced energy cycle

1m for correct substitution of values

1m for final answer

(iv) Hence, predict the sign of ΔS for the reaction in (a) and explain the spontaneity of the reaction at high temperatures. [2]

- ΔH is positive
- ΔS is positive as the number of gaseous particles increases. [1]
- $-\Delta S$ is negative
- Since $\Delta G = \Delta H - T\Delta S$

$\Rightarrow \Delta G$ will only be negative when T is large and the reaction is spontaneous at high temperatures. [1]

(b) Trouton's rule states that the entropy change of vapourisation for liquids such as benzene and hexane at their boiling points is almost the same value at around $+85$ to $+88 \text{ J K}^{-1} \text{ mol}^{-1}$.

However, the entropy change of vapourisation for butanoic acid is $+130 \text{ J K}^{-1} \text{ mol}^{-1}$.

Compare and explain the difference in the entropy change of vapourisation for butanoic acid and benzene. [2]

$\Delta S^\circ_{\text{vap}}$ (butanoic acid) is more positive than $+85 \text{ J mol}^{-1} \text{ K}^{-1}$ (?), as hydrogen bonds between butanoic acid molecules in the liquid state reduces its entropy due to the relatively strong intermolecular forces of attraction between the molecules which results in less ways to arrange the molecules. In the gaseous state, the molecules are further apart and would be much more disordered with less significant intermolecular forces of attraction between the molecules. (?)

[Total: 9]

5 Compounds **P**, **Q**, **R** and **S** are oxides or chlorides of Period 3 elements.

Table 5.1 shows some properties of the compounds.

Table 5.1

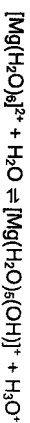
Compounds	Melting point	Solubility in water	pH of solution
P	High	Yes	13
Q	Low	Yes	2
R	High	Yes	6.5
S	High	No	

(a) Based on the information from Table 5.1, deduce the identities of compounds **P** and **R** and write the equations to justify the pH of the respective solutions. [2]

P: Na_2O



R: MgCl_2



(b) **S** is only soluble in hot concentrated sodium hydroxide.

Identify compound **S** and write the equation for the reaction with hot concentrated sodium hydroxide. [2]

S is SiO_2 (as it has a high melting point, insoluble in water and only reacts with hot concentrated NaOH .)

Reaction of **S** with hot NaOH :

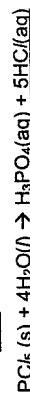


(c) When water is added to 0.0500 mol of **Q**, the resulting solution requires 0.250 mol of silver nitrate for complete reaction.

Identify compound **Q** and write the equations to show:

- its reaction with water
- the reaction between the resulting solution and silver nitrate [3]

Q is PCl₅



(d) The melting point of compound **P** is 1132 °C while that of potassium carbonate is 891 °C.

Explain the difference in the melting points in terms of structure and bonding. [2]

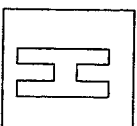
Na₂O and K₂CO₃ have giant ionic structures held by strong electrostatic forces of attraction between oppositely charged ions.

$$|L.E.| \propto \frac{q^+q^-}{r^+ + r^-}$$

Since the charge of cation and anions are the same for both compounds while K⁺ is larger in size than Na⁺ and CO₃²⁻ is larger than O²⁻, the magnitude of lattice energy for K₂CO₃ is smaller than Na₂O. Less energy is required to overcome the weaker ionic bonds in K₂CO₃. K₂CO₃ has a lower melting point.

[Total: 9]

END OF PAPER 2



2022 Preliminary Examination
Pre-University 3

H2 CHEMISTRY

Paper 3 Free Response

9729/103

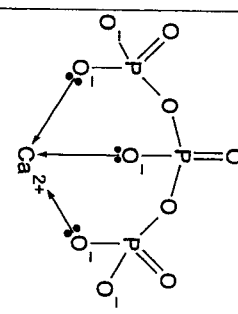
Section A

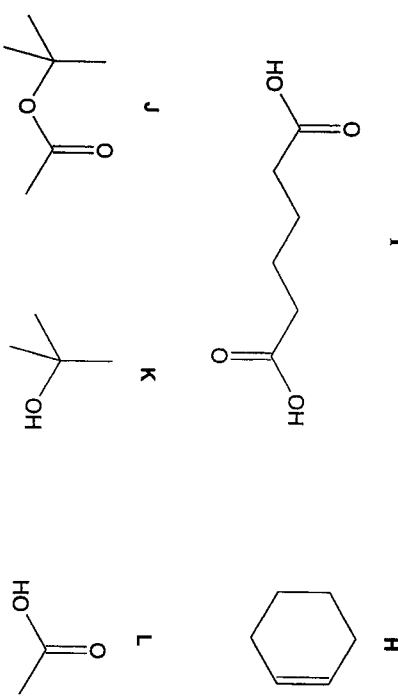
1	(a)	(i)		[3] 7/7 [2] 5/7 [1] 3/7 max [1] battery or making of solutions salt bridge
		(ii)	anode: $\text{Zn} \rightarrow \text{Zn}^{2+} + 2\text{e}^-$ cathode: $\text{NO}_3^- + 2\text{H}^+ + \text{e}^- \rightarrow \text{NO}_2 + \text{H}_2\text{O}$ [1] sum: $\text{Zn} + 2\text{NO}_3^- + 4\text{H}^+ \rightarrow \text{Zn}^{2+} + 2\text{NO}_2 + 2\text{H}_2\text{O}$ or $\text{Zn} + 2\text{HNO}_3 + \text{H}_2\text{SO}_4 \rightarrow \text{ZnSO}_4 + 2\text{NO}_2 + 2\text{H}_2\text{O}$ [1]	
		(iii)	$E_{\text{cell}} = +0.81 - (-0.76) = +1.57 \text{ V}$	
		(iv)	concentration of H^+ / NO_3^- higher than 1.00 mol dm^{-3} / temperature higher and reaction is endothermic / NO_2 gas formed escapes the solution [1] equilibrium position of cathode half-equation shifts right, higher E_{cell} [1]	

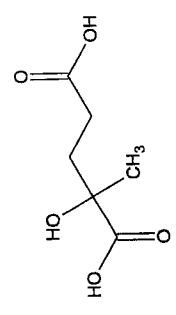
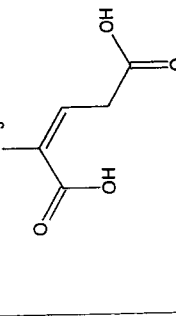
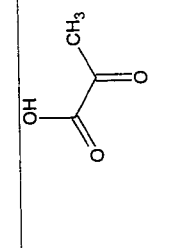
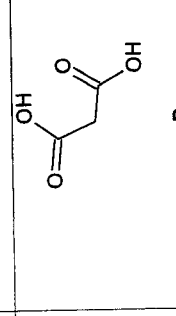
	(b)	(i)																		
		(iii)	$\Delta H_{\text{reaction}} = -2(33.2) + 9.2 = -57.2 \text{ kJ mol}^{-1}$ bond is formed between two NO_2 energy released / exothermic																	
		(iv)	decrease in number of moles of gases [1] decreased ways to arrange molecules (1) and distribute energy (2) decreased disorder (3) hence decreased entropy (4) [1]																	
		(v)	$\Delta G = \Delta H - T\Delta S$ at high T , $-T\Delta S$ (positive) has larger magnitude than ΔH (negative) $\Delta G > 0$ / more positive at low T , $-T\Delta S$ (positive) has smaller magnitude than ΔH (negative) $\Delta G < 0$ / more negative																	
		(vi)	<table border="1"> <tr> <td>$P_{\text{initial}} / \text{bar}$</td> <td>$2\text{NO}_2(\text{g})$</td> <td>$\rightleftharpoons$</td> <td>$\text{N}_2\text{O}_4(\text{g})$</td> </tr> <tr> <td></td> <td>1.00</td> <td></td> <td>0</td> </tr> <tr> <td>$P_{\text{change}} / \text{bar}$</td> <td>-0.702</td> <td></td> <td>+0.351</td> </tr> <tr> <td>$P_{\text{final}} / \text{bar}$</td> <td>0.298</td> <td></td> <td>0.351</td> </tr> </table> $K_p = \frac{P_{\text{N}_2\text{O}_4}}{P_{\text{NO}_2}^2} = \frac{0.351}{(0.298)^2} = 3.95 \text{ bar}^{-1}$	$P_{\text{initial}} / \text{bar}$	$2\text{NO}_2(\text{g})$	\rightleftharpoons	$\text{N}_2\text{O}_4(\text{g})$		1.00		0	$P_{\text{change}} / \text{bar}$	-0.702		+0.351	$P_{\text{final}} / \text{bar}$	0.298		0.351	
$P_{\text{initial}} / \text{bar}$	$2\text{NO}_2(\text{g})$	\rightleftharpoons	$\text{N}_2\text{O}_4(\text{g})$																	
	1.00		0																	
$P_{\text{change}} / \text{bar}$	-0.702		+0.351																	
$P_{\text{final}} / \text{bar}$	0.298		0.351																	

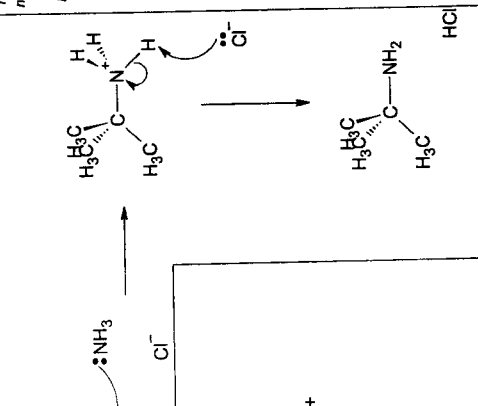
2 (a) (i)	octahedral, 90° [1] 6 electron domains maximise distance from one another to minimise repulsion [1]	
(ii)	ligands approach at 3 axes (\downarrow) z^2 and x^2-y^2 point at 3 axes, greater electronic repulsion, higher energy xy, yz and xz point away from the 3 axes / diagonal, less electronic repulsion, lower energy	[2] 6/6 [1] 3/6
(iii)	less electronic repulsion as z^2 is further away from the ligand / z^2 points directly at axial ligands	
(iv)	Co^{3+} : [Ar] $3d^7$ yes, decreased energy of z^2 electron Ni^{2+} : [Ar] $3d^8$ no net energy change, decreased z^2 electron energy, increased x^2-y^2 electron energy or even number of electrons	[2] 4/4 [1] 2/4
(v)	Cu^+ : [Ar] $3d^{10}$ Since the d orbitals are fully-filled, there is no d-d transition. Hence, the complex ions are not coloured.	
(b)	$Cu^{2+} + 2e^- \rightarrow Cu$ $E = +0.34$ V $Cu + 4NH_3 \rightarrow [Cu(NH_3)_4]^{2+} + 2e^-$ $E = +0.05$ V $E_{cell} = +0.34 + 0.05 = +0.39$ V [1] $\Delta G = -nFE_{cell} = -(2)(96500)(+0.39) = -75.3$ kJ mol $^{-1} < 0$, hence feasible [1]	[1]

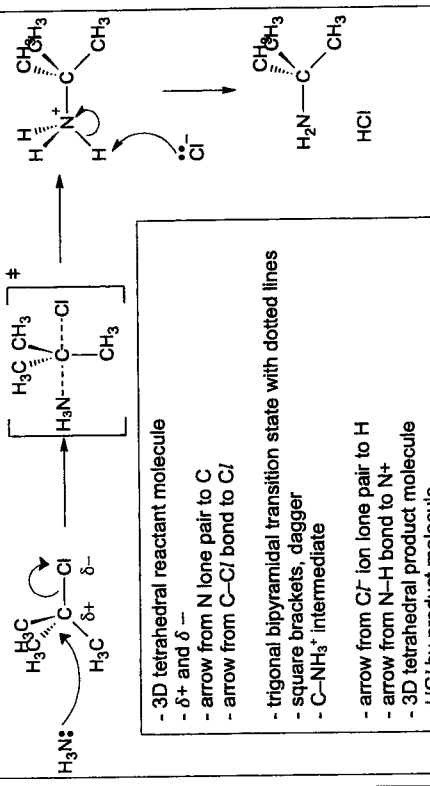
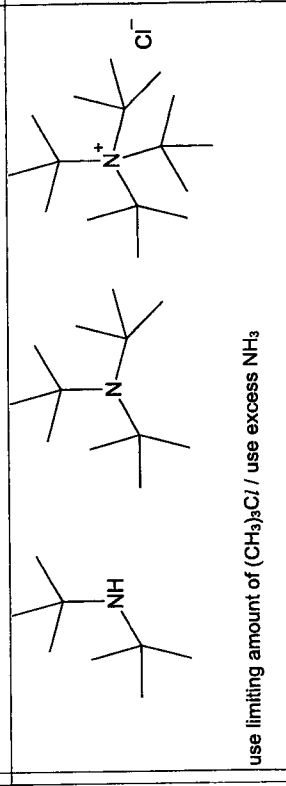
3 (a) (i)	Buffer solutions are solutions which resist pH changes when small amounts of acids or bases are added to it.																																																																	
(ii)	H^+ (that tries to leave) are more strongly attracted to the more negatively-charged ion more difficult dissociation																																																																	
(iii)	$\eta_{H_2PO_4^-} = \frac{2.00\text{ g}}{136.1\text{ g/mol}} = 0.0147$ mol hence $[H_2PO_4^-] = 0.0147$ mol dm $^{-3}$ [1] $\eta_{HPO_4^{2-}} = \frac{1.42\text{ g}}{142.0\text{ g/mol}} = 0.0100$ mol hence $[HPO_4^{2-}] = 0.0100$ mol dm $^{-3}$ [1] $K_a(H_2PO_4^-) = \frac{[H^+][HPO_4^{2-}]}{[H_2PO_4^-]} = 10^{-7.20}$ $\frac{[H^+](0.0100)}{(0.0147)} = 10^{-7.20}$ hence $[H^+] = 9.275 \times 10^{-8}$ mol dm $^{-3}$ hence pH = 7.03 [1]																																																																	
(iv)	$H_2PO_4^- + OH^- \rightarrow HPO_4^{2-} + H_2O$																																																																	
(v)	i. 10.0 cm 3 <table border="1" style="margin-left: 20px;"> <thead> <tr> <th></th> <th>$H_2PO_4^-$</th> <th>+</th> <th>OH^-</th> <th>\rightarrow</th> <th>HPO_4^{2-}</th> <th>+</th> <th>H_2O</th> </tr> </thead> <tbody> <tr> <td>Before rxn /mol</td> <td>0.00147</td> <td></td> <td>0.0001</td> <td></td> <td>0.001</td> <td></td> <td>[1]</td> </tr> <tr> <td>Change</td> <td>-0.0001</td> <td></td> <td>-0.0001</td> <td></td> <td>+0.0001</td> <td></td> <td></td> </tr> <tr> <td>After rxn /mol</td> <td>0.00137</td> <td></td> <td>0</td> <td></td> <td>0.0011</td> <td></td> <td>[1]</td> </tr> </tbody> </table> <p>pH = $7.20 + \log \frac{(0.0011/V)}{(0.00137/V)} = 7.10$ [1]</p> <p>ii. 200 cm3 <table border="1" style="margin-left: 20px;"> <thead> <tr> <th></th> <th>$H_2PO_4^-$</th> <th>+</th> <th>OH^-</th> <th>\rightarrow</th> <th>HPO_4^{2-}</th> <th>+</th> <th>H_2O</th> </tr> </thead> <tbody> <tr> <td>Before rxn /mol</td> <td>0.00147</td> <td></td> <td>0.002</td> <td></td> <td>0.001</td> <td></td> <td></td> </tr> <tr> <td>Change</td> <td>-0.00147</td> <td></td> <td>-0.00147</td> <td></td> <td>+0.00147</td> <td></td> <td></td> </tr> <tr> <td>After rxn /mol</td> <td>0</td> <td></td> <td>0.000530</td> <td></td> <td>[1] 0.00247</td> <td></td> <td></td> </tr> </tbody> </table> <p>$[OH^-] = \frac{0.000530}{0.3} = 0.001768$ [1] <poh 2.75<br="" ==""></poh> pH = $14 - 2.75 = 11.2$ [1]</p></p>		$H_2PO_4^-$	+	OH^-	\rightarrow	HPO_4^{2-}	+	H_2O	Before rxn /mol	0.00147		0.0001		0.001		[1]	Change	-0.0001		-0.0001		+0.0001			After rxn /mol	0.00137		0		0.0011		[1]		$H_2PO_4^-$	+	OH^-	\rightarrow	HPO_4^{2-}	+	H_2O	Before rxn /mol	0.00147		0.002		0.001			Change	-0.00147		-0.00147		+0.00147			After rxn /mol	0		0.000530		[1] 0.00247			
	$H_2PO_4^-$	+	OH^-	\rightarrow	HPO_4^{2-}	+	H_2O																																																											
Before rxn /mol	0.00147		0.0001		0.001		[1]																																																											
Change	-0.0001		-0.0001		+0.0001																																																													
After rxn /mol	0.00137		0		0.0011		[1]																																																											
	$H_2PO_4^-$	+	OH^-	\rightarrow	HPO_4^{2-}	+	H_2O																																																											
Before rxn /mol	0.00147		0.002		0.001																																																													
Change	-0.00147		-0.00147		+0.00147																																																													
After rxn /mol	0		0.000530		[1] 0.00247																																																													

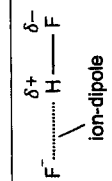
(b) (i)	$2\text{Na}_2\text{HPO}_4 + \text{NaH}_2\text{PO}_4 \rightarrow \text{Na}_5\text{P}_3\text{O}_{10} + 2\text{H}_2\text{O}$	
(ii)	tetrahedral	
(iii)		overall 3- charge okay
(iv)	$[\text{Ca}^{2+}]_{\text{present}} = \frac{5.06 \times 10^{-5} \text{ g/dm}^3}{40.1 \text{ g/mol}} = 1.2618 \times 10^{-6} \text{ mol dm}^{-3}$ [1] $K_{\text{sp}}(\text{Ca}_3(\text{PO}_4)_2) = [\text{Ca}^{2+}]^3[\text{PO}_4^{3-}]^2 = 2.07 \times 10^{-33} \text{ mol}^5 \text{ dm}^{-15}$ $[\text{Ca}^{2+}]^3 (6.53 \times 10^{-8})^2 = 2.07 \times 10^{-33}$ hence maximum $[\text{Ca}^{2+}]$ allowed in solution = $7.859254 \times 10^{-7} \text{ mol dm}^{-3}$ [1] hence $\eta_{\text{Ca}^{2+}}$ to remove = $\eta_{\text{Na}_5\text{P}_3\text{O}_{10}}$ to add = $1.2618 \times 10^{-6} - 7.859254 \times 10^{-7}$ = $4.7587 \times 10^{-7} \text{ mol}$ mass of $\text{Na}_5\text{P}_3\text{O}_{10}$ to add = $4.7587 \times 10^{-7} \text{ mol} \times 368.0 \text{ g/mol} = 1.75 \times 10^{-4} \text{ g}$ [1]	

4 (a)		
(b)	<p>Information</p> <p>A, $\text{C}_8\text{H}_{10}\text{O}_5$, is a chiral compound</p> <p>When 1 mol of A is reacted with excess solid sodium carbonate at room temperature and pressure, 24 dm³ of CO_2 is formed.</p> <p>A does not react with hot acidified potassium dichromate(VI)</p> <p>A reacts with excess hot concentrated H_2SO_4 to form B, $\text{C}_8\text{H}_8\text{O}_4$</p> <p>1 mol of B reacts completely with 2 mol of $\text{NaOH}(\text{aq})$</p> <p>When B is heated with acidified $\text{KMnO}_4(\text{aq})$, C, $\text{C}_3\text{H}_4\text{O}_3$, and D, $\text{C}_3\text{H}_4\text{O}_4$, are formed.</p> <p>C gives a yellow precipitate with warm aqueous alkaline iodine</p> <p>Both C and D react with magnesium to give effervescence</p>	<p>Deduction</p> <p>A has a carbon with 4 different groups / atoms attached to it</p> <p>Acid-carbonate reaction</p> <p>A has 2 -COOH groups</p> <p>A cannot be oxidised</p> <p>elimination</p> <p>A has a tertiary alcohol (since cannot be oxidised but can undergo elimination)</p> <p>B has an alkene group</p> <p>B has 2 -COOH groups</p> <p>acid-base reaction</p> <p>oxidative cleavage / oxidation</p> <p>C has CH_3CO-oxidation</p> <p>Both C and D have -COOH group</p>

Section B	
 <p style="text-align: center;">A</p>	 <p style="text-align: center;">B</p>
 <p style="text-align: center;">C</p>	 <p style="text-align: center;">D</p>

5	<p>(i) $pK_a = pK_1 + pK_2$ $pK(200) = 155(150) + 80(120)$ [1] sub $pK = 164 \text{ kPa}$ [1] ans</p> <p>(ii) nucleophilic substitution, S_N1</p> <p>3 electron-donating methyl groups disperse positive charge stabilising the carbocation</p> <p>3 methyl groups sterically hinder nucleophile approach from opposite C-Cl</p>	<p>[2] 4/4 [1] 2/4</p>	
	<p>(iii) S_N1:</p>  <div style="border: 1px solid black; padding: 5px; margin-top: 10px;"> <ul style="list-style-type: none"> - 3D tetrahedral reactant molecule - δ^+ and δ^- - arrow from C-Cl bond to Cl - slow - trigonal planar intermediate with C^+ - arrow from N lone pair to C^+ - $C-NH_3^+$ intermediate - arrow from Cl^- ion lone pair to H - arrow from N-H bond to N - 3D tetrahedral product molecule - HCl by-product molecule </div>	<p>no need to name again</p> <p>[3] 10/11 [2] 7/11 [1] 4/11</p>	

	<p>S_N2 (accept only if (ii) is S_N2):</p>  <div style="border: 1px solid black; padding: 5px; margin-top: 10px;"> <ul style="list-style-type: none"> - 3D tetrahedral reactant molecule - δ^+ and δ^- - arrow from N lone pair to C - arrow from C-Cl bond to Cl - trigonal bipyramidal transition state with dotted lines - square brackets, dagger - $C-NH_3^+$ intermediate - arrow from Cl^- ion lone pair to H - arrow from N-H bond to N - 3D tetrahedral product molecule - HCl by-product molecule </div>	<p>no need to name again</p> <p>[3] 10/11 [2] 7/11 [1] 4/11</p>	
(iv)	 <p style="text-align: center;">use limiting amount of $(CH_3)_3N$ / use excess NH_3</p> <p style="text-align: center;">OR</p> <p>HCl (if HCl given as answer, no possible method to limit the formation)</p>	<p>any one</p>	

(b)	<p>(i)</p>  <p style="text-align: center;">ion-dipole</p>	<p>[1] correct 2 species</p> <p>[1] dipoles on HF, correctly labelled</p>	
	<p>(ii) HF is a Brønsted acid as it lost / released H^+</p>		<p>electrode labels required</p>
	<p>(iii) anode: $2F^- \rightarrow F_2 + 2e^-$ cathode: $2H^+ + 2e^- \rightarrow H_2$</p>		
	<p>(iv) $\eta_{KHF_2} = \frac{355 \text{ g}}{78.1 \text{ g/mol}} = 4.545 \text{ mol}$ $\eta_{HF} = \frac{145 \text{ g}}{20.0 \text{ g/mol}} = 7.25 \text{ mol}$ [1]</p> <p>from KHF_2:</p>		

	η_{H^+} discharged = η_{H^-} discharged = 4.545 mol from H_2 : η_{H^+} discharged = η_{H^-} discharged = 7.25 mol hence total η_{H^+} discharged = total η_{H^-} discharged = 4.545 mol + 7.25 mol = 11.795 mol [1] since $\frac{\eta_{H_2}}{\eta_{H^+}} = \frac{\eta_{H_2}}{\eta_{H^-}} = \frac{1}{2} \eta_{H_2} = \eta_{H_2} = \frac{11.795 \text{ mol}}{2} = 5.8977 \text{ mol}$ $PV = nRT$ volume of each gas H_2 and F_2 , $V = \frac{nRT}{P} = \frac{(5.8977)(8.31)(223)}{101325} = 0.108 \text{ m}^3$ [1]	
(v)	H_2 less electrons weaker instantaneous dipole – induced dipole forces of attraction between molecules more ideal gas	[0] wrong gas [2] 4 / 4 [1] 2 / 4
(vi)		[1] correct orbital overlaps for all 3 molecules [1] correct orbital labels x 6
6 (a) (i)	name of mechanism: electrophilic substitution electrophile generation: $AlCl_3 + Cl \rightarrow AlCl_4^- + \cdot$ 1m for correct name and correct generation of electrophile (ignore arrows) benzene attack electrophile: deprotonation: 	
(ii)	hydrocarbon substituent is electron-donating increasing electron density of delocalised π electrons in benzene - arrow from circle to C^+ - slow - positive charge with break - side chain attached - arrow from C^- lone pair / bond pair to H - arrow from $C-H$ bond to ring - restored delocalisation - HCl + $AlCl_3$ + HCl [2] 7 / 8 [1] 3 / 8	[2] 4 / 4 [1] 2 / 4


	more reactive towards (subsequent) electrophilic substitution / benzene becomes a stronger nucleophile to attack electrophile (again)	
(iii)		

(b)	(i)	increasing atomic radii down Group 2 [1] although nuclear charge and shielding increases distance of valence electrons from nucleus increases weaker electrostatic forces of attraction between them [1]	
	(ii)	more thermally-stable carbonates down Group 2 [1] lower charge density of Group 2 ions polarises carbonate ion less stronger C-O bond, require more energy to break [1]	
	(iii)	mass of $\text{CO}_2 = 1.02 \text{ g} - 0.505 \text{ g} = 0.515 \text{ g}$ $\eta_{\text{CO}_2} = \frac{0.515 \text{ g}}{44.0 \text{ g/mol}} = 0.0117 \text{ mol}$ $= \eta_{\text{XCO}_3}$ [1] M_r of $\text{XCO}_3 = \frac{1.02}{0.0117} = 87.1$ M_r of $\text{X}^{2+} = 87.1 - 60.0 = 27.1$ [1] nearest Group 2 element is Mg [1]	

(c)	(i)	$\text{UO}_2 + 4\text{HF} \rightarrow \text{UF}_4 + 2\text{H}_2\text{O}$ [1] $\text{UF}_4 + \text{F}_2 \rightarrow \text{UF}_6$ $\text{UO}_2 + 4\text{HF} + \text{F}_2 \rightarrow \text{UF}_6 + 2\text{H}_2\text{O}$ [1]	Award 2m if only correct final equation shown.
	(ii)	UO_2 was oxidised to UF_6 the oxidation state of U increased from +4 (in UO_2) to +6 (in UF_6) [1] F_2 was reduced to UF_6 the oxidation state of F decreased from 0 (in F_2) to -1 (in UF_6) [1]	
	(iii)	M_r of $^{235}\text{UF}_6 = 349$ M_r of $^{238}\text{UF}_6 = 352$ let abundance of $^{235}\text{UF}_6 = x$ $349x + 352(1-x) = 351.95$ $x \times 100\% = 1.67\%$ [1]	
	(iv)	Since % abundance is less than 2% it cannot be used. [1]	

Candidate Name: _____

Shift
Laboratory



2022 Preliminary Examinations

Pre-University 3

H2 CHEMISTRY

Paper 4 Practical

9729/04

31 Aug 2022

2 hours 30 min

Candidates answer on the Question paper.

READ THESE INSTRUCTIONS FIRST

Do not turn over this question paper until you are told to do so

Write your name, class and admission number on all the work you hand in.

Write in dark blue or black pen.

You may use an HB pencil for any diagrams or graphs.

Do not use staples, paper clips, glue or correction fluid.

Answer **all** questions in the spaces provided on the Question Paper.

The use of an approved scientific calculator is expected, where appropriate.

You may lose marks if you do not show your working or if you do not use appropriate units.

Qualitative Analysis Notes are printed at the back of the Question Paper.

At the end of the examination, fasten all your work securely together.

The number of marks is given in brackets [] at the end of each question or part question.

Question	1	2	3	4	Total
Marks					
	13	17	12	13	55

1 Determination of amount of water of crystallization in $\text{CuSO}_4 \cdot n\text{H}_2\text{O}$

Copper is a transition metal capable of exhibiting variable oxidation states. Compounds containing Cu^{2+} ions tend to be relatively stable.

Cu^{2+} ions react with excess potassium iodide, KI, to produce iodine, I_2 , and a stable precipitate, CuI . To determine the concentration of Cu^{2+} via iodometric titration, all the Cu^{2+} ions are reduced to Cu^+ ions. A brown suspension, made up of an off-white precipitate of CuI in a brown solution of I_2 , will be produced.



I_2 has a relatively low solubility in water. However, the presence of an excess of I^{-} ions in the reaction mixture allows the soluble tri-iodide ion, I_3^{-} , to form as shown by equation 2. This ensures that the I_2 formed as shown in equation 1 is fully dissolved.



The I_3^{-} ions formed may be titrated against a standard solution of $\text{Na}_2\text{S}_2\text{O}_3$ as shown in equation 3.



The solution should be titrated immediately after addition of KI because the I_2 may be adsorbed onto the CuI precipitate, rendering the end-point less sharp.

You are provided with:

FA 1 is solid hydrated copper(II) sulfate, $\text{CuSO}_4 \cdot n\text{H}_2\text{O}$, where n is an integer

FA 2 is 0.10 mol dm^{-3} sodium thiosulfate, $\text{Na}_2\text{S}_2\text{O}_3$

FA 3 is 1.00 mol dm^{-3} potassium iodide, KI

FA 4 is 10% potassium thiocyanate, KSCN

Starch indicator

The presence of thiocyanate ion, SCN^{-} , in the titration mixture near to the end-point will have an impact on the accuracy of the results. The procedure described is designed to improve on the accuracy.

In this experiment, you will determine the amount of water of crystallisation in 1 mol of $\text{CuSO}_4 \cdot n\text{H}_2\text{O}$. You will titrate **FA 1** against **FA 2**.

(a) Procedure

Preparation of solution of FA 1

1. Weigh accurately about 5.0 g of FA 1 in a weighing bottle. Record your readings in an appropriate manner in the space provided below.
2. Transfer all the solid into a 250 cm³ beaker. Dissolve this solid in about 100 cm³ of deionised water.
3. Transfer the solution to a 250 cm³ volumetric flask. Rinse the beaker with deionised water several times, adding each rinsing to the volumetric flask.
4. Make up the solution to 250 cm³ with deionised water. Stopper, invert and shake well to obtain a homogenous solution. Label this solution as FA 1 solution.

Results

Mass of empty weighing bottle /g	4.10
Mass of weighing bottle + FA1 /g	9.11
Mass of weighing bottle + residual FA1 /g	4.11
Mass of FA1 /g	5.00

[2]

M1: All masses consistently recorded to 2 (or 3) decimal places and correct mass headers
 M2: Mass of FA 1 used correctly calculated and Mass of FA 1 used 5.00 ±0.05

(b) Titration

1. Fill the burette with FA 2.
2. Use a pipette to transfer 25.0 cm³ of FA 1 solution into a 250 cm³ conical flask.
3. Use a measuring cylinder to add about 15 cm³ of FA 3 into this flask.
4. Titrate FA 1 against FA 2. Near the end-point, when the brown suspension becomes pale yellow, add about 10 drops of starch solution.
5. Continue adding FA 2 until the blue-black colour just disappears. Add 10 cm³ of FA 4 using a measuring cylinder.
6. Continue adding FA 2 slowly. The end-point is reached when the solution first becomes colourless. The white precipitate remains.
7. Record your titration results in the space provided on page 4. Make certain that your recorded results show the precision of your working.
8. Repeat the titration as many times as you think necessary to obtain consistent results.

[Turn over

(i) Results

Initial burette reading / cm ³	0.00	0.00
Final burette reading / cm ³	21.00	21.00
Volume of FA2 added / cm ³	21.00	21.00
	✓	✓

M3
M4
M5

M3: A table including the appropriate header and units for:

- Initial burette readings
- Final burette readings
- volume added

M4: All accurate burette readings are recorded to the nearest 0.05 cm³. Do not award this mark if: 50.00cm³ is used as an initial burette reading

M5: Accuracy: Titre/mass ratio: 4.05 ± 0.50

[3]

M1
M2

(ii) From your titres, obtain a suitable volume of FA 2 to be used in your calculations. Show clearly how you obtained this volume.

$$\text{Volume of FA2} = \frac{21.00 + 21.00}{2} = 21.00 \text{ cm}^3$$

M6: Correct calculation of the average of two consistent readings within 0.10 cm³ difference

$$\text{Volume of FA 2} = \dots\dots\dots [1]$$

M6

(c) Calculations

(i) Calculate the amount of iodine, I₂, liberated from 25.0 cm³ of FA 1 solution.

$$\text{amount of S}_2\text{O}_3^{2-} = \frac{21.00}{1000} \times 0.10 = 0.00210 \text{ mol}$$

$$\text{amount of I}_2 = \frac{1}{2} \times 0.00210 = 0.00105 \text{ mol}$$

$$\text{amount of I}_2 \text{ liberated from 25.0 cm}^3 \text{ of FA 1 solution} = \dots\dots\dots [1]$$

M7

- (ii) Hence, calculate the amount of copper(II) ions, Cu^{2+} , in 25.0 cm³ of FA 1 solution.
Amount of Cu^{2+} in 25.0 cm³ = $2 \times 0.00105 = 0.00210$ mol

amount of Cu^{2+} in 25.0 cm³ of FA 1 solution =[1]

M18

- (iii) Determine the amount of $\text{CuSO}_4 \cdot n\text{H}_2\text{O}$ in 250 cm³ of FA 1 solution.
Amount of Cu^{2+} in 250 cm³ = $10 \times 0.00210 = 0.0210$ mol = Amount of $\text{CuSO}_4 \cdot n\text{H}_2\text{O}$

amount of $\text{CuSO}_4 \cdot n\text{H}_2\text{O}$ in 250 cm³ of FA 1 solution =[1]

M19

- (iv) Calculate the M_r of $\text{CuSO}_4 \cdot n\text{H}_2\text{O}$, and hence the value of n .
[A: H, 1.0; O, 16.0; S, 32.1; Cu, 63.5]

$$M_r = \frac{5.00}{0.0210} = 238.1$$

$$n = \frac{238.1 - 63.5 - 32.1 \times 4}{16.0} = 4.36 \approx 4 \text{ (nearest integer)}$$

M_r of $\text{CuSO}_4 \cdot n\text{H}_2\text{O}$ =
value of n = [2]

M10
M11

- (d) Starch forms a dark blue-black complex with the tri-iodide ion, I_3^- . The starch indicator is not added at the beginning of the titration as the resulting complex at high I_3^- concentration is relatively stable, dissociating only slowly.

Predict and explain the effect of adding the starch indicator at the start of the titration on the M_r of $\text{CuSO}_4 \cdot n\text{H}_2\text{O}$ determined in (c)(iv).

Due to the slow release of I_3^- from the starch- I_3^- complex, the end point would have exceeded the equivalence point, resulting in a larger titre value.
This leads to larger amount of $\text{CuSO}_4 \cdot n\text{H}_2\text{O}$ hence the M_r would have been smaller than the actual value.

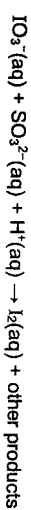
[2]
[Total: 13]

M12
M13

[Turn over

2 Investigation of the effect of concentration changes on the rate of a reaction

Iodate(V) ions, IO_3^- , also react with sulfite ions, SO_3^{2-} , in the presence of acid to produce iodine:



The rate of this reaction is affected by the concentration of acid present in the reaction mixture.

In the presence of starch, the iodine produced will give a dark blue colour. Therefore, the effect of the concentration of the acid on the initial rate of the reaction can be studied by measuring the time taken for a fixed amount of iodine to be produced.

You are also provided with:

FA 5 is 0.0500 mol dm⁻³ dilute sulfuric acid, H_2SO_4

FA 6 is 0.0400 mol dm⁻³ sodium sulfite, Na_2SO_3

FA 7 is 3.50 g dm⁻³ aqueous potassium iodate(V), KIO_3

Starch solution (from Question 1)

- (a) You are required to perform a series of five 'iodine clock' experiments, by varying the concentration of acid and measuring the time, t , taken for the dark blue colour to appear.
- For each experiment, **solution 1** will contain the same volume of FA 6 but a different volume of FA 5. You will need to ensure that the total volume of **solution 1** is kept constant at 50 cm³ by adding deionised water as required.
 - For each experiment, prepare **solution 2** as described in (a)(i).

Note: Use separate measuring apparatus to prepare **solutions 1** and **2**.

For each experiment, you will note the volume of FA 5, $V_{\text{FA } 5}$, and the time taken, t , for the reaction mixture to turn dark blue.

You will then calculate the following values to 3 significant figures:

- $1/t$,
- $\lg(1/t)$,
- $\lg(V_{\text{FA } 5})$.

In the space provided on page 9, prepare a table in which to record, to an appropriate level of precision:

- all volumes used to prepare **solution 1**,
- all values of t ,
- all calculated values of $1/t$, $\lg(1/t)$ and $\lg(V_{\text{FA } 5})$.

(i) **Experiment 1****Solution 1**

- Pour 10.0 cm³ of **FA 6** to a 50 cm³ measuring cylinder and make up the volume to 50.0 cm³ by adding **FA 5**.

Solution 2

- Pour 10.0 cm³ of **FA 7** to a 10 cm³ measuring cylinder.

1. Transfer **solution 1** into a 100 cm³ beaker placed on a white tile.
2. Using a 10 cm³ measuring cylinder, add 5.0 cm³ of the starch indicator to the beaker.
3. Pour **solution 2** from the measuring cylinder **rapidly but carefully** into the beaker containing **solution 1**. Start the stopwatch immediately.
4. Stir the mixture using a glass rod.
5. Stop the stopwatch when the dark blue colour first appears.
6. Record the time taken, t , to the nearest second in your table.
7. Wash the beaker thoroughly with water and dry it.

(ii) **Experiment 2**

8. Prepare a different **solution 1** using 10.0 cm³ of **FA 6** and 10.0 cm³ of **FA 5**. Make up the volume to 50.0 cm³ by adding deionised water.
9. Prepare **solution 2** as described in **experiment 1** above.

10. Repeat steps 1 to 7.

(iii) **Experiment 3 to 5**

Choose **three** other suitable volumes of **FA 5**, between 10.0 cm³ and 40.0 cm³, for use in the remaining three experiments.

In each case,

- Use 10.0 cm³ of **FA 6**, together with your selected volume of **FA 5** and deionised water to prepare 50.0 cm³ of **solution 1**.
- Prepare **solution 2** as described in **experiment 1**.
- Determine the time taken, t , for the solution to turn dark blue.

Record all required volumes, time taken and calculated values in your table.

Results

Volume of FA5 / cm ³	Volume of FA6 / cm ³	Volume of deionised water / cm ³	time / s	$\frac{1}{t} / \text{s}^{-1}$	$\lg \frac{1}{t}$	$\lg (V_{\text{FA6}})$
40.0	10.0	0.0	4	0.250	-0.602	1.60
10.0	10.0	30.0	28	0.0357	-1.45	1.00
20.0	10.0	20.0	15	0.0667	-1.18	1.30
25.0	10.0	15.0	12	0.0833	-1.08	1.40
30.0	10.0	10.0	9	0.111	-0.954	1.48

M14
M15
M16
M17
M18

M14: Table with correct headers and units

- volumes of **FA 5**, **FA 6** and deionised water
- time
- $1/t$
- $\lg (1/t)$
- $\lg (V_{\text{FA5}})$

M15: Record all data with correct precision

- volumes to 0.5 cm³
- t to nearest second
- calculated values to 3 sf

M16: Complete set of volume of **FA 5** and time readings for 5 experiments and all values of t increase as volume of **FA 5** decreases. Data for experiments 1 and 2 must be included

M17: Choose 3 other well-spaced values for the volume of **FA 5**. All volumes must differ by at least 5 cm³

M18: Correctly calculate $1/t$, $\lg (1/t)$ and $\lg (V_{\text{FA5}})$ values for all stated experiments.

[5]

Graphical determination of order of reaction

In a series of experiments, where the same end-point (i.e. appearance of dark blue colour) is timed, while changing the concentration of one of the reactants and keeping the total volume of the mixture constant,

- $1/t$ can provide a measure of its initial rate,
- volume of the reactant that is changed in each experiment, can be used as a measure of its initial concentration.

Since the total volume of the reaction mixture is kept constant and only the concentration of **FA 5** has been changed, the rate equation, where m is the order of reaction with respect to H^+ , can be simplified to

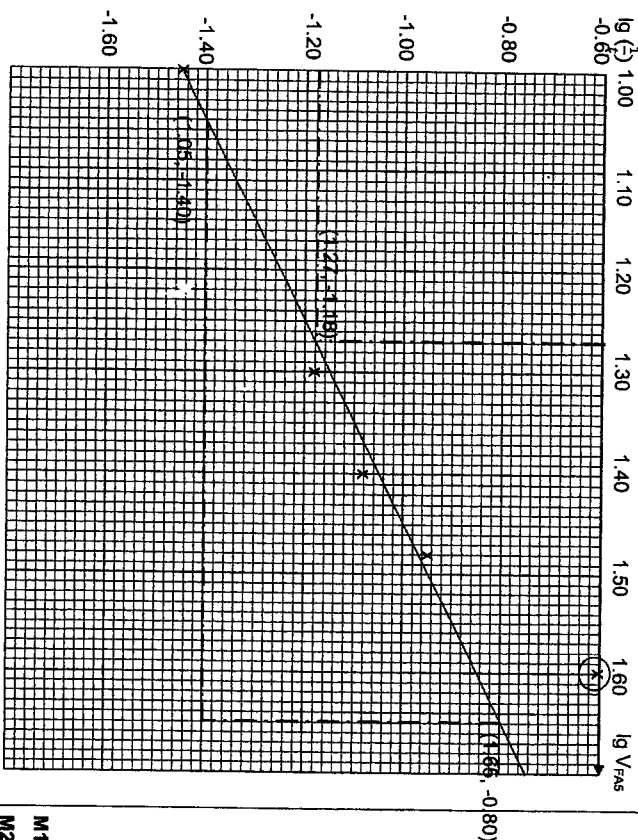
$$\text{rate} = k[\text{H}^+]^m$$

By taking logarithms of the factors in this equation and by substituting $1/t$ for rate and V_{FA} for concentration respectively,

$$\lg(1/t) = m \times \lg(V_{FA} s) + \lg k$$

Therefore, by plotting a graph of $\lg(1/t)$ against $\lg(V_{FA} s)$, you will be able to draw a straight line of best-fit graph, where m is the gradient of the line.

(b) Plot a graph of $\lg(1/t)$ on the y-axis against $\lg(V_{FA} s)$ on the x-axis. Draw the best-fit straight line, taking into account all of your plotted points.



[3]

- M19: Axes correct way round, with correct labels and appropriate scale. Scale must be chosen so that plotted points occupy at least half the graph grid in both x and y directions
- M20: All plotted points correct to within $\pm 1/2$ small square
- M21: A best fit line is drawn with anomalous points excluded

- M19
- M20
- M21

(ii) From your graph, determine the value of m , showing clearly all your working. Give your answer to 3 significant figures and hence state the order of reaction with respect to $[H^+]$.

$$\text{Gradient} = \frac{(-0.80 - (-1.40))}{1.65 - 1.05} = 1.00 = m$$

Correct calculation of gradient of the graph with working shown. The m value is equal to the gradient of the line
Must show accurate coordinates falling on the line with triangle

$$m = \dots \dots \dots \text{order of reaction with respect to } [H^+] = \dots \dots \dots [1]$$

M22

(c) This experiment is known to be very reliable. When it is performed carefully, it is possible to make a reaction mixture that changes colour after a specified time interval.

Use your graph to determine the volume of FA 5 which would need to be added in solution 1 so that the reaction mixture turns dark blue at 15 seconds.

Show your working clearly.

$$\text{When } t = 15 \text{ s, } \lg(1/t) = \lg(1/15) = -1.18$$

$$\text{From the graph, } \lg V_{FA5} = 1.27$$

$$V_{FA5} = 18.6 \text{ cm}^3 \text{ (3s.f.)}$$

$$\text{volume of FA 5 required} = \dots \dots \dots [2]$$

M23

- Correct calculation of $\lg(1/15) = -1.18$
- Correct reading of $\lg(V_{FA5})$ value from graph to within $\pm 1/2$ small square.
- Correct calculation of volume of FA 5 using value for $\lg(V_{FA5})$

M24

[2] for all 3 points correct
[1] for 2 points correct

(d) State and explain which experiment, from experiments 1 to 5, is likely to have the greatest error.

Experiment 1 as time, t , is smallest value and so has greatest % error

OR

Selects Experiment 2 and explains that volume of FA 5 used (20 cm³) is smallest and so has greatest % error

[1]

M25

- (e) Calculate the concentration of hydrogen ions, $[H^+]$, in mol dm^{-3} , that is present in the reaction mixture for **experiment 1** at time $t = 0$ s.
You may assume that the solutions are perfectly mixed and that the reaction has **not** started at $t = 0$ s.

$$\text{amount of } H^+ = 0.05 \times 2 \times 40 \times 10^{-3} = 0.00400 \text{ mol}$$

$$[H^+] = 0.00400 / (65/1000) = 0.0615 \text{ mol dm}^{-3}$$

$$[H^+] = \dots\dots\dots \text{mol dm}^{-3} \text{ [3]}$$

M26: correct value

M27: Show correct units and appropriate significant figures in all final answers in **1(c)**, **2(e)**

M28: Show all relevant workings in **1(c)**, **2(e)**

M28 deducted for any blank questions

- (f) Suppose that the following mistake was made in the preparation of **solution 1** for **experiment 2**.
Kaleyn added 10.0 cm^3 of **FA 6** to the 50.0 cm^3 measuring cylinder and added **FA 5** up to the 30.0 cm^3 mark, instead of 20.0 cm^3 mark, on the measuring cylinder. After that, she made up the volume to 50.0 cm^3 by adding deionised water.

- (i) State and explain how the value of t is affected for **experiment 2** described above.
The value of t will be lower. This is because the $[H^+]$ is higher than expected, so rate of reaction is faster. [1]
- (ii) Suggest a modification to the experimental procedure to avoid this error.

Measuring volumes of **FA 5**, **FA 6** and deionized water using separate measuring cylinders to make solution 1. [1]

[Total: 17]

3 Planning

Like iodine solution, many transition metal complex ions are coloured. It is possible to use this property to determine the concentration of a solution of a coloured complex ion. A few cm^3 of the solution is placed inside a machine, known as a spectrometer. This machine measures the amount of light that is absorbed when a specific wavelength of visible light is shone through a coloured solution. It does this by comparing the amount of light passing through the sample with the amount of light passing through the pure solvent. The amount of light absorbed is expressed as an **absorbance value**. The higher the concentration of the solution, the higher the absorbance value, i.e., the absorbance value is directly proportional to the concentration of the solution.

This technique can be used to determine the concentration of a solution of aqueous $[\text{Ni}(\text{en})_3]^{2+}$. A series of known concentration of solution containing $[\text{Ni}(\text{en})_3]^{2+}$ is prepared. A spectrometer is used to measure the absorbance of each solution. A graph of absorbance against concentration is then plotted. This graph is known as a calibration line.

The experiment is then repeated using a solution of unknown concentration. By comparing the absorbance of this solution with the calibration line, the concentration of $[\text{Ni}(\text{en})_3]^{2+}$ in the unknown solution can be determined.

- (a) Explain why transition metal compounds are often coloured.

- As the ligands approach the central metal ions, it results in interelectronic repulsion and splits the d orbitals into 2 energy levels with a small energy gap, ΔE .
- As the d orbitals are partially filled, when electrons absorb energy from the visible light region of the electromagnetic spectrum corresponding to ΔE , they are promoted from the lower energy d orbital to be promoted to higher energy d orbital.
- The colour of the complex is the complementary colour of the light absorbed. [2]

M31

M32

- (c) Given that $[\text{Ni}(\text{en})_3]^{2+}$ absorbs radiation of a wavelength of about 570 nm , use the information below to predict the colour of $[\text{Ni}(\text{en})_3]^{2+}$.

Wavelength range (nm)	Colour	Complementary colour
400 - 450	Violet	Yellow
450 - 490	Blue	Orange
490 - 550	Green	Red
550 - 580	Yellow	Violet
580 - 650	Orange	Blue
650 - 700	Red	Green

violet [1]

M33

(a) Using the information given above, you are required to write a plan to determine the

concentration of $[\text{Ni}(\text{en})_3]^{2+}$ in a solution of X.

You may assume that you are provided with:

- solution X, of unknown $[\text{Ni}(\text{en})_3]^{2+}$ concentration less than 2 mol dm^{-3} ;
- a stock solution containing 5.00 mol dm^{-3} of $[\text{Ni}(\text{en})_3]^{2+}$;
- access to a spectrometer and instructions for its use;
- graph paper;
- the apparatus and chemicals normally found in a school laboratory.

Your plan should include details of:

- the preparation of 100.0 cm^3 of 2.00 mol dm^{-3} aqueous $[\text{Ni}(\text{en})_3]^{2+}$ from the stock solution;
- the preparation of a suitable range of diluted solutions of accurate concentrations;
- an outline of how the results would be obtained;
- a sketch of the calibration line you would expect to obtain;
- how the calibration line would be used to determine the concentration of $[\text{Ni}(\text{en})_3]^{2+}$ in solution X.

• Calculation of vol of stock solution needed:

$$\text{Vol of stock solution needed} = \frac{100 \times 2}{5} = 40 \text{ cm}^3$$

• Procedure for preparation of standard solution of 2.00 mol dm^{-3}

1. Fill the 50.00 cm^3 burette with the stock solution of 5.00 mol dm^{-3} $[\text{Ni}(\text{en})_3]^{2+}$.
2. Run 40.00 cm^3 of the solution into a 100 cm^3 volumetric flask
3. Top up to the mark with deionised water
4. Stopper, invert and shake the volumetric flask to obtain a homogeneous solution. Label this solution P.

• Preparation of a suitable range of diluted solutions

1. Fill the 50.00 cm^3 burette with solution P
2. Run 15.00 cm^3 of P into a 100 cm^3 beaker.
3. Using another 50.00 cm^3 burette, transfer 5.00 cm^3 of deionised water into the same beaker. Stir the solution with a glass rod to obtain a homogeneous solution.

4. Repeat steps 2 and 3 with different volumes of solution P and deionised water as shown in the table below (Expt 3 to 5).

Expt	Volume of solution cm^3	P/Volume of deionised water cm^3	Conc of $[\text{Ni}(\text{en})_3]^{2+}$ prepared / mol dm^{-3}	Absorbance / A
1	20.00	0.00	2.00	
2	15.00	5.00	1.50	
3	10.00	10.00	1.00	
4	5.00	15.00	0.50	
5	0.00	20.00	0.00	

• Outline of how the results would be obtained

1. Use the spectrometer to measure the absorbance of each of the solutions of different concentrations prepared and record the absorbance value.
2. Plot a graph of the absorbance against concentration and draw a best-fit line. This is the calibration line.

• Determining concentration of solution X

1. Use the spectrometer to measure and record the absorbance of $[\text{Ni}(\text{en})_3]^{2+}$ in solution X
2. Using the calibration line drawn, read off the concentration of $[\text{Ni}(\text{en})_3]^{2+}$ corresponding to the absorbance.

[9]

[Total: 12]

1. correct volume of stock solution used to prepare the standard solution.	M34
2. correct procedure for preparing the standard solution, including top up to the mark, stopper and shake	M35
3. use of suitable apparatus with stated capacity for the preparation of standard solution <ul style="list-style-type: none"> o burette for measuring out 40.00 cm^3 stock solution o 100 cm^3 volumetric flask 	M36
4. correct dilution concept for preparation of range of diluted solutions using 2.00 mol dm^{-3} solution	M37
5. select a suitable range of concentrations for the diluted solutions (at least 3 more solutions with concentrations not less than 0.3 mol dm^{-3} apart)	M38
6. measurement of absorbance value using the diluted solutions	M39
7. plotting of graph (mention axis)	M40
8. sketch of the calibration line graph (straight line graph passing through the origin) (if sketch is correct and with appropriate axes, M40+M41)	M41
9. description of use of calibration line to determine concentration of $[\text{Ni}(\text{en})_3]^{2+}$ in solution X	M42

M34

M35

M36

M37

M38

M39

M40

M41

M42

Qualitative Analysis Notes
[ppt. = precipitate]

(a) Reactions of aqueous cations

cation	reaction with	
	NaOH(aq)	NH ₄ (aq)
aluminium, Al ³⁺ (aq)	white ppt. soluble in excess	white ppt. insoluble in excess
ammonium, NH ₄ ⁺ (aq)	ammonia produced on heating	-
barium, Ba ²⁺ (aq)	no ppt. (if reagents are pure)	no ppt.
calcium, Ca ²⁺ (aq)	white ppt. with high [Ca ²⁺ (aq)]	no ppt.
chromium(III), Cr ³⁺ (aq)	grey-green ppt. soluble in excess giving dark green solution	grey-green ppt. insoluble in excess
copper(II), Cu ²⁺ (aq)	pale blue ppt. insoluble in excess	blue ppt. soluble in excess giving dark blue solution
iron(II), Fe ²⁺ (aq)	green ppt. insoluble in excess	green ppt. insoluble in excess
iron(III), Fe ³⁺ (aq)	red-brown ppt. insoluble in excess	red-brown ppt. insoluble in excess
magnesium, Mg ²⁺ (aq)	white ppt. insoluble in excess	white ppt. insoluble in excess
manganese(II), Mn ²⁺ (aq)	off-white ppt. insoluble in excess	off-white ppt. insoluble in excess
zinc, Zn ²⁺ (aq)	white ppt. soluble in excess	white ppt. soluble in excess

[Turn over

(b) Reactions of anions

<i>ions</i>	<i>reaction</i>
carbonate, CO_3^{2-}	CO_2 liberated by dilute acids
chloride, Cl^- (aq)	gives white ppt. with Ag^+ (aq) (soluble in NH_3 (aq))
bromide, Br^- (aq)	gives pale cream ppt. with Ag^+ (aq) (partially soluble in NH_3 (aq))
iodide, I^- (aq)	gives yellow ppt. with Ag^+ (aq) (insoluble in NH_3 (aq))
nitrate, NO_3^- (aq)	NH_3 liberated on heating with OH^- (aq) and Al foil
nitrite, NO_2^- (aq)	NH_3 liberated on heating with OH^- (aq) and Al foil; NO liberated by dilute acids (colourless $\text{NO} \rightarrow$ (pale) brown NO_2 in air)
sulfate, SO_4^{2-} (aq)	gives white ppt. with Ba^{2+} (aq) (insoluble in excess dilute strong acids)
sulfite, SO_3^{2-} (aq)	SO_2 liberated with dilute acids; gives white ppt. with Ba^{2+} (aq) (soluble in dilute strong acids)

(c) Test for gases

<i>ions</i>	<i>reaction</i>
ammonia, NH_3	turns damp red litmus paper blue
carbon dioxide, CO_2	gives a white ppt. with limewater (ppt. dissolves with excess CO_2)
chlorine, Cl_2	bleaches damp litmus paper
hydrogen, H_2	"pops" with a lighted splint
oxygen, O_2	relights a glowing splint
sulfur dioxide, SO_2	turns aqueous acidified potassium manganate(VII) from purple to colourless

(d) Colour of halogens

<i>halogen</i>	<i>colour of element</i>	<i>colour in aqueous solution</i>	<i>colour in hexane</i>
chlorine, Cl_2	greenish yellow gas	pale yellow	pale yellow
bromine, Br_2	reddish brown gas / liquid	orange	orange-red
iodine, I_2	black solid / purple gas	brown	purple

2022 PU3 H2 Chemistry EOY Paper 4 Mark Scheme

Question	Answer	Marks
1 (a)	All masses consistently recorded to 2 (or 3) decimal places. and correct mass headers Mass of bottle + FA 1 Mass of bottle + residual of FA 1 Mass of FA 1 Mass of empty bottle Mass of bottle + FA 1 Mass of FA 1	M1
	*Inform students to be always reminded to weigh residual mass	
	Mass of FA 1 used correctly calculated Mass of FA 1 used 5.00 ±0.05	M2
(b)(i)	A table including the appropriate header and units for: <ul style="list-style-type: none"> Initial burette readings Final burette readings volume added All accurate burette readings are recorded to the nearest 0.05 cm ³ . Do not award this mark if: 50.00cm ³ is used as an initial burette reading	M3
	Accuracy	M4
	Titre/mass ratio: 4.05 ± 0.50	M5
(b)(ii)	Correct calculation of the average of two consistent readings within 0.10 cm ³ difference	M6
(c)(i)	amount of I ₂ = 0.5 (ans from b(ii)/(1000) x 0.10 = A mol	M7
(ii)	amount of Cu ²⁺ in 25.0 cm ³ = A x 2 = B mol	M8
(iii)	amount of CuSO ₄ .nH ₂ O in 250 cm ³ = 10 x B = C mol	M9
(iv)	Mr = mass of FA 1 / C = D Must be 1dp, will affect M27	M10
	n = (D - 159.6) / 18.0 n must be an Integer	M11
(d)	Due to the slow release of I ₃ ⁻ from the starch-I ₃ ⁻ complex, the end point would have exceeded the equivalence point, resulting in a larger titre value. This leads to larger amount of CuSO ₄ .nH ₂ O hence the Mr would have been smaller than the actual value. OR The I ₂ is trapped by the starch complex and hence resulting in less I ₂ a smaller titre value This leads to a smaller amount of CuSO ₄ and hence Mr will be larger	M12 M13

Question	Answer	Marks
2(a)	Table with correct headers and units <ul style="list-style-type: none"> volumes of FA 5, FA 6 and deionised water time 1/t lg (1/t) lg (V_{FA 5}) Record all data with correct precision <ul style="list-style-type: none"> volumes to 0.5 cm³ t to nearest second calculated values to 3 sf 	M14 M15
	Complete set of volume of FA 5 and time readings for 5 experiments and all values of t increase as volume of FA 5 decreases. Data for experiments 1 and 2 must be included	M16
	Choose 3 other well-spaced values for the volume of FA 5. All volumes must differ by at least 5 cm ³	M17
	Correctly calculate 1/t, lg (1/t) and lg (V _{FA 5}) values for all stated experiments.	M18
(b)(i)	Axes correct way round, with correct labels and appropriate scale. Scale must be chosen so that plotted points occupy at least half the graph grid in both x and y directions 	M19
	Both accepted, must be in logical numerical sense	
	All plotted points correct to within ± ½ small square	M20
	A best fit line is drawn with anomalous points excluded	M21
(b)(ii)	Correct calculation of gradient of the graph with working shown. The m value is equal to the gradient of the line Must show accurate coordinates falling on the line or triangle or best both	M22
(c)	<ul style="list-style-type: none"> Correct calculation of lg(1/15) = -1.18 Correct reading of lg(V_{FA 5}) value from graph to within ±½ small square. Correct calculation of volume of FA 5 using value for lg(V_{FA 5}) 	M23 M24
	[2] for all 3 points correct [1] for 2 points correct	
(d)	Selects Experiment 1 and explains that time, t, is smallest value and so has greatest % error Says that reaction time is fastest and hence it is the most significant OR	M25

	Selects Experiment 2 and explains that volume of FA 5 used (20 cm ³) is smallest and so has greatest % error	
(e)	amount of H ⁺ = $0.05 \times 2 \times 40 \times 10^{-3} = 0.00400$ mol [H ⁺] = $0.00400 / (65/1000) = 0.0615$ mol dm ⁻³	M26
	Show correct units and appropriate significant figures in all final answers in 1(c), 2(e)	M27
	Penalise only if answer is correct	
	Show all relevant workings in 1(c), 2(e)	M28
(f)(i)	M28 deducted for any blank questions The value of t will be lower. This is because the [H ⁺] is higher than expected, so rate of reaction is faster.	M29
(ii)	Measuring volumes of FA 4, FA 6 and deionised water separately and mixing to make solution 1	M30

Question	Answer	Marks
3(a)	<ul style="list-style-type: none"> presence of partially filled d-orbitals splitting of d orbitals into 2 groups with a small energy gap absorbs light energy for electrons from lower energy d orbital to be promoted to higher energy d orbital light not absorbed is seen as the colour of the complex 	M31 M32
(b)	2m - all 3 points 1m - any correct 2 points	
(c)	<ul style="list-style-type: none"> Calculation of vol of stock solution needed: Vol of stock solution needed = $\frac{100 \times 2}{5} = 40$ cm³ Procedure for preparation of standard solution of 2.00 mol dm⁻³ <ol style="list-style-type: none"> Fill the burette with the stock solution of 5.00 mol dm⁻³ [Ni(en)₃]²⁺ Run 40.00 cm³ of the solution into a 100 cm³ volumetric flask Make up to the mark with deionised water Stopper and shake the volumetric flask to obtain a homogeneous solution. Label this solution P. Preparation of a suitable range of diluted solutions <ol style="list-style-type: none"> Fill the burette with solution P Run 15.00 cm³ of P into a 100 cm³ beaker. Using another burette, transfer 5.00 cm³ of deionised water into the same beaker. Stir the solution with a glass rod to obtain a homogeneous solution. Repeat steps 2 and 3 with different volumes of solution P and deionised water as shown in the table below (Expt 3 to 5). 	M33

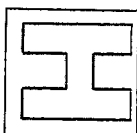
	solution P / cm ³	deionised water / cm ³	prepared / mol dm ⁻³	
1	20.00	0.00	2.00	
2	15.00	5.00	1.50	
3	10.00	10.00	1.00	
4	5.00	15.00	0.50	
5	0.00	20.00	0.00	

- Outline of how the results would be obtained
 - Use the spectrometer to measure the absorbance of each of the solutions of different concentrations prepared and record the absorbance value.
 - Plot a graph of the absorbance against concentration and draw a best-fit line. This is the calibration line.
- Determining concentration of solution X
 - Use the spectrometer to measure and record the absorbance of [Ni(en)₃]²⁺ in solution X
 - Using the calibration line drawn, read off the concentration of [Ni(en)₃]²⁺ corresponding to the absorbance.

1.	correct volume of stock solution used to prepare the standard solution.	M34
2.	correct procedure for preparing the standard solution, including top up to the mark, stopper and shake	M35
3.	use of suitable apparatus with stated capacity for the preparation of standard solution <ul style="list-style-type: none"> burette for measuring out 40.00 cm³ stock solution 100 cm³ volumetric flask 	M36
4.	correct dilution concept for preparation of range of diluted solutions using 2.00 mol dm ⁻³ solution	M37
5.	select a suitable range of concentrations for the diluted solutions (at least 3 more solutions with concentrations not less than 0.3 mol dm ⁻³ apart)	M38
6.	measurement of absorbance value using the diluted solutions	M39
7.	plotting of graph (mention axis)	M40
8.	sketch of the calibration line graph (straight line graph passing through the origin) (if sketch is correct and with appropriate axes, M40+M41)	M41
9.	description of use of calibration line to determine concentration of [Ni(en) ₃] ²⁺ in solution X	M42

4	observations with FA 8	observations with FA 9
(a)(i)	Add 1 cm ³ of dilute hydrochloric acid to ½ spatula of the solid sample in a test tube. Blue / Blue-green / green solution is observed.	Cream / Off-white ppt is observed (optional) Yellow ppt / solid is formed on warming. (No need to test for SO ₂) FYI: $\text{Na}_2\text{S}_2\text{O}_3 + 2\text{HCl} \rightarrow 2\text{HCl} + \text{S} + \text{SO}_2 + \text{H}_2\text{O}$
(ii)	Add 2 cm ³ of silver nitrate solution to ½ spatula of the solid sample in a test tube. If need be, filter the resultant mixtures. White ppt in blue solution formed.	A white / yellow ppt and eventually forms black / brown ppt. Do not accept red-brown ppt Do not accept brown solution Can accept eventually brown ppt
(iii)	Add 1 cm ³ of potassium iodide solution to ½ spatula of the solid sample in a test tube. If need be, filter the resultant mixtures. A white / cream ppt is formed in brown solution. FYI: $2\text{CuCl}_2 + 4\text{KI} \rightarrow 2\text{CuI} + \text{I}_2 + 2\text{KCl}$	A colourless solution is formed.
(iv)	Add 1 cm ³ of aqueous iodine to ½ spatula of the solid sample in a test tube.	Brown solution decolourises. Something to the extent of decolourisation
(v)	Add 1 cm ³ of deionised water to ½ spatula of the solid sample in a test tube. To this resultant solution, add aqueous ammonia slowly, with shaking, until no further change is seen. Blue solution is formed.	Blue ppt formed. Ppt soluble in excess NH ₃ (aq) forming a dark blue solution

Question	Answer	Marks
4(a)	1m for each box	M43 to M50
(b)	cation: Cu ²⁺ anion: Cl ⁻ or SO ₄ ²⁻ equation: $2\text{AgNO}_3(\text{aq}) + \text{CuCl}_2(\text{aq}) \rightarrow \text{Cu}(\text{NO}_3)_2(\text{aq}) + 2\text{AgCl}(\text{s})$ OR $2\text{AgNO}_3(\text{aq}) + \text{CuSO}_4(\text{aq}) \rightarrow \text{Cu}(\text{NO}_3)_2 + \text{Ag}_2\text{SO}_4(\text{s})$	M51 M52 M53
(c)	Can accept ionic equation Redox Not displacement	M54
(d)	reducing agent	M55



NATIONAL JUNIOR COLLEGE
SH2 PRELIMINARY EXAMINATION
Higher 2

CANDIDATE
NAME

SUBJECT
CLASS

REGISTRATION
NUMBER

CHEMISTRY

Paper 1 Multiple Choice

9729/01

15 September 2022

1 hour

Additional Materials:

Optical Answer Sheet
Data Booklet

READ THESE INSTRUCTIONS FIRST

Write in soft pencil.

Do not use staples, paper clips, highlighters, glue or correction fluid.

Write your name, subject class and registration number on the Answer Sheet in the spaces provided unless this has been done for you.

There are thirty questions on this paper. Answer all questions. For each question there are four possible answers A, B, C and D.

Choose the one you consider correct and record your choice in soft pencil on the separate Answer Sheet.

Read the instructions on the Answer Sheet very carefully.

Each correct answer will score one mark. A mark will not be deducted for a wrong answer.

Any rough working should be done in this booklet.

The use of an approved scientific calculator is expected, where appropriate.

Instructions on how to fill in the Optical Mark Sheet

Shade the index number in a 5 digit format on the optical mark sheet:

2nd digit and the last 4 digits of the Registration Number.

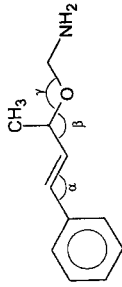
Example:

Student	Examples of Registration No.	Shade:
	2105648	15648

This document consists of 15 printed pages and 1 blank page.

- 1 Technetium (Tc) is a second row transition element that does not occur naturally on Earth. One of its isotopes has 56 neutrons.
What is the nucleon number of this isotope?
A 43 B 56 C 99 D 112
- 2 Which row has the greater number of particles?
A 1 mol of liquid sulfuric acid
B 12000 cm^3 of oxygen gas at s.t.p.
C 32.5 g of zinc
D 16 g of nitrogen gas
- 3 Which species will have the smallest deflection when passed through the same electric field?
A $^{23}Na^+$ B $^{11}B^{3+}$ C $^{19}F^-$ D $^{32}S^{2-}$
- 4 0.0353 g of a sample of volatile organic compound was completely vaporized at 50 kPa and 300K. The vapour occupied a volume of 40 cm^3 . On complete combustion in excess oxygen, 80 cm^3 of carbon dioxide and 80 cm^3 of water vapour were formed. All gaseous volumes were measured under identical conditions.
What would be the molecular formula of the compound?
A C_2H_2O B C_2H_4O C C_2H_6O D C_3H_8
- 5 Which species has the most number of unpaired electrons?
A Co^{2+} B N C Fe D S
- 6 Rubidium and bromine form ions that are isoelectronic.
1 Ionic radius of rubidium is smaller than its atomic radius.
2 Ionic radius of bromine is larger than its atomic radius.
3 Ionic radius of bromine is smaller than that of rubidium.
Which statements are correct?
A 1, 2 and 3 B 1 and 2 only C 1 and 3 only D 2 and 3 only

7 Which row correctly shows the bond angles for α , β , γ in the molecule below?



	α	β	γ
A	109.5°	120°	109.5°
B	120°	109.5°	107°
C	120°	107°	105°
D	120°	109.5°	105°

8 In which pair is the melting point of the **second** species higher than that of the **first** species?

- A C and Si
 B K and Rb
 C NaCl and NaBr
 D SiCl₄ and SiO₂

9 When liquid N₂F₄ is heated, it decomposes into a single product, **B**.

Which statements are correct?

- 1 N-F bonds are broken during this decomposition.
 2 The enthalpy change when N₂F₄ decomposes into **B** is approximately +160 kJ mol⁻¹.
 3 Molecules of **B** are non-linear.

- A 1, 2 and 3 B 1 and 2 only C 2 and 3 only D 1 only

10 Three experiments were carried out involving acids and alkalis of the same concentration. The temperature changes were recorded as shown in the table below.

Volumes of acids and alkalis added together	$\Delta T / ^\circ\text{C}$
25.0 cm ³ of HCl(aq) + 25.0 cm ³ of NaOH(aq)	ΔT_1
50.0 cm ³ of HCl(aq) + 50.0 cm ³ of NaOH(aq)	ΔT_2
25.0 cm ³ of HCl(aq) + 25.0 cm ³ of NH ₃ (aq)	ΔT_3

Which row shows the correct relative magnitude of ΔT values?

- A $\Delta T_2 > \Delta T_3 > T_1$ B $\Delta T_1 = \Delta T_2 > \Delta T_3$ C $\Delta T_2 = \Delta T_3 > \Delta T_1$ D $\Delta T_1 = \Delta T_2 = \Delta T_3$

11 Some ΔH values are given below.

	enthalpy change of formation / kJ mol ⁻¹
Fe ₂ O ₃	- 824.2
CO	- 110.5
CO ₂	- 393.5

In the industrial production of iron, iron(III) oxide is reduced by carbon monoxide.

What is the enthalpy change of reaction for one mole of iron formed?

- A - 24.8 kJ mol⁻¹
 B + 24.8 kJ mol⁻¹
 C - 12.3 kJ mol⁻¹
 D + 541.2 kJ mol⁻¹

- 12 Nitrogen and hydrogen form ammonia in an exothermic reaction. The rate and yield of the reaction can be altered by changing the experimental conditions.

Which row correctly describes the effect of the changes in condition?

change in condition	effects		
	equilibrium yield	rate of forward reaction	rate of backward reaction
1 increasing temperature	decreases	increases	increases
2 increasing temperature	increases	decreases	increases
3 addition of catalyst	increases	increases	no effect
4 addition of catalyst	no effect	increases	increases

- A 1 and 4 only B 2 and 4 only C 2 and 3 only D 1 and 3 only

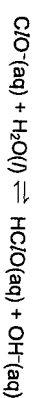
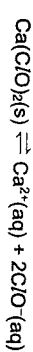
- 13 Four solutions, each of concentration 0.1 mol dm^{-3} , were tested with a pH meter. The results are shown.

solution	pH
$\text{CH}_3\text{CO}_2\text{H}$	4
HNO_3	1
CH_3NH_2	11
NaOH	14

Which statement is incorrect?

- A Conjugate base of $\text{CH}_3\text{CO}_2\text{H}$ is less stable than that of HNO_3 .
 B HNO_3 has a lower pH than $\text{CH}_3\text{CO}_2\text{H}$ because it is more soluble.
 C NaOH has a higher concentration of hydroxide ions in solution than CH_3NH_2 .
 D Mixing equal volume of CH_3NH_2 and HNO_3 form a solution with pH less than 7.

- 14 Solid calcium hypochlorite pellets, $\text{Ca}(\text{ClO})_2(\text{s})$, are added to swimming pools to form $\text{HC}(\text{O})(\text{aq})$ which kills disease-causing bacteria and algae.



What is the effect on the solubility of calcium hypochlorite and bacterial growth when pH increases?

	effect on solubility of calcium hypochlorite	effect on bacterial growth
A	decreases	increases
B	decreases	decreases
C	increases	increases
D	increases	decreases

- 15 A mixture of two oxides of period 3 elements is added to water and the resultant solution has a pH value below 7.

What could be the constituents of the mixture?

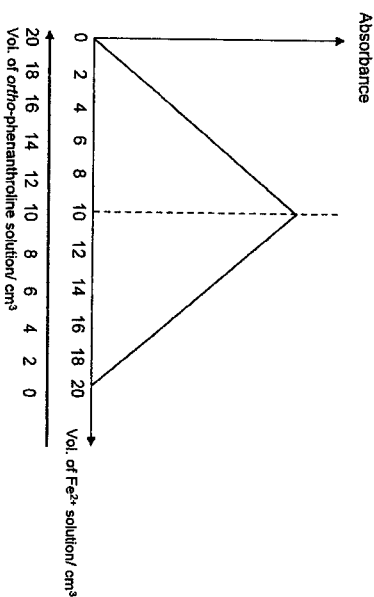
- A Al_2O_3 and MgO
 B Na_2O and MgO
 C Na_2O and P_4O_{10}
 D SO_3 and P_4O_{10}

- 16 Anhydrous magnesium nitrate, $\text{Mg}(\text{NO}_3)_2$, decomposes when heated, giving a white solid and a mixture of two gases, D and E. E is oxygen.

What is the ratio of mass of D released to mass of E released?

- A $\frac{1}{0.174}$ B $\frac{1}{0.267}$ C $\frac{1}{0.348}$ D $\frac{1}{3.43}$

- 21 Fe^{2+} ion forms a red octahedral complex with *ortho*-phenanthroline molecules. Various samples containing different volumes of $1 \times 10^{-5} \text{ mol dm}^{-3} \text{Fe}^{2+}$ and $3 \times 10^{-4} \text{ mol dm}^{-3} \text{ortho}$ -phenanthroline were prepared. The following graph was obtained when the colour intensity of the samples was measured using a colorimeter.



Which statement about the complex ion is correct?

- A The complex ion absorbs red light.
 B The overall charge of the complex ion is -4 .
 C The co-ordination number of the Fe^{2+} ion is 3.
 D *Ortho*-phenanthroline is a bidentate ligand.

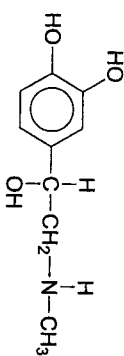
- 22 One molecule of dodecane, $\text{C}_{12}\text{H}_{26}$, is cracked to produce three products, R, S and T. R is a straight chain alkane. S and T are straight chain alkenes with different M_r values.

Which statements about R, S and T are correct?

- 1 If S and T are but-1-ene and ethene respectively, R will be hexane.
 2 If R is butane, only one, either S or T, exhibits cis-trans isomerism.
 3 R could be octane.

- A 1, 2 and 3 B 1 and 2 only C 2 and 3 only D 1 only

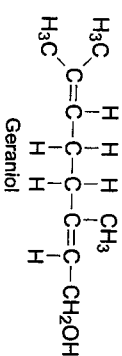
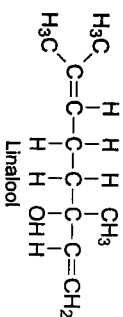
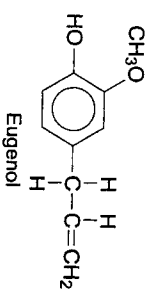
- 23 Adrenalin is a stimulant produced in the adrenal glands. It has the following structure.



Which statement about adrenalin is correct?

- A One mole of adrenalin can only react with one mole of ethanoyl chloride.
 B One mole of adrenalin reacts with two moles of hydrogen chloride.
 C It gives effervescence with potassium carbonate.
 D It reacts with ethanoic acid to form amide.

- 24 The following compounds are found in essential oils extracted from herbs and spices.



Which statement is incorrect?

- A Both Linalool and Geraniol exhibit stereoisomerism.
 B One mole of Eugenol reacts with at least two moles of Br_2 in the absence of light.
 C Linalool gives yellow precipitate with warm alkaline $\text{I}_2(\text{aq})$.
 D Geraniol decolorises cold acidified KMnO_4 .

- 25 Which reactions of propan-1-ol produce water as a by-product?
- 1 passing propan-1-ol vapour over hot Al_2O_3
 - 2 mixing propan-1-ol with warm ethanoic acid and a few drops of concentrated H_2SO_4
 - 3 warming propan-1-ol with HCN
- A 1, 2 and 3 B 1 and 2 only C 2 and 3 only D 1 only

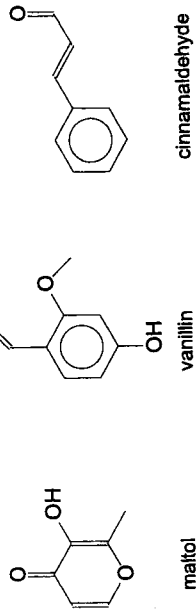
26 Hex-2-ene can be made by the reaction shown.



Which statement about this reaction is correct?

- $(\text{CH}_3)_3\text{CO}^-$ is behaving as a Lewis base.
- $(\text{CH}_3)_3\text{CO}^-$ is behaving as an oxidising agent.
- The C–I bond breaks via homolytic fission.
- This is a nucleophilic substitution reaction.

27 Maltol, vanillin and cinnamaldehyde are some naturally occurring flavouring agents.



Which pair of reagents would enable the three compounds to be distinguished from one another?

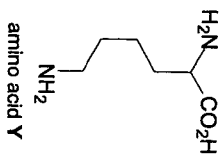
	reagent 1	reagent 2
A	2,4-dinitrophenylhydrazine	hot acidified $\text{K}_2\text{Cr}_2\text{O}_7$
B	$[\text{Ag}(\text{NH}_3)_2]^+$ solution	neutral aqueous FeCl_3
C	Fehling's solution	hot acidified KMnO_4
D	anhydrous SOCl_2	aqueous Br_2

28 The following compounds were treated with hot acidified KMnO_4 (aq).

Which compound gives an organic product that is **different** from the other three?

- A CH_3COCl
 B $\text{CH}_3\text{CH}_2\text{OCCOCH}_3$
 C $\text{CH}_3\text{CH}=\text{CHOH}$
 D $\text{CH}_3\text{CH}_2\text{COOCH}_3$

29 Amino acid Y has three pK_a values given below:

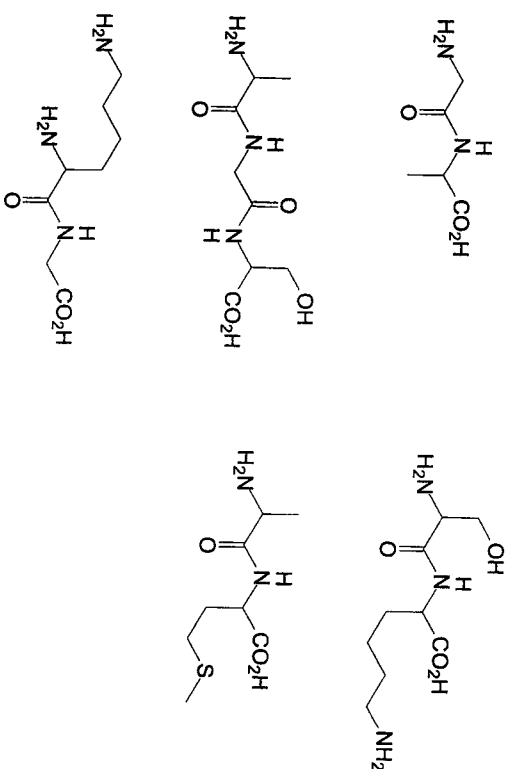


pK_a	α -carboxyl group	α -amino group	Side chain
	2.15	9.16	10.67

What is the net charge of the predominant species of amino acid Y at pH 7?

- A +2 B +1 C 0 D -1

30 Heptapeptide X contains seven amino acid residues. When X is partially hydrolysed, the following dipeptide and tripeptide fragments are produced.



Which of the four heptapeptides on page 15 is the formula of X?

