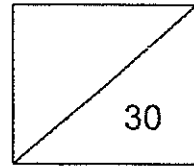




Maha Bodhi School  
Topical Review 2  
Primary 1 Mathematics



Name : \_\_\_\_\_ (      )

Class: Primary 1 \_\_\_\_\_


Duration : 50 minutes

Date : \_\_\_\_\_ Parent's Signature : \_\_\_\_\_


Questions 1 to 6 carry 1 mark each.  
Questions 7 to 18 carry 2 marks each.  
Write your answers in the spaces provided.


1. Write the number in words.

39	
----	--

2. How many  are there altogether?

Fill in the missing numbers in the place value chart.





Tens	Ones

Marks: 

2
---



3. Compare the numbers and fill in the blank.



The greatest number is \_\_\_\_\_.

4.  $16 + 3 =$  \_\_\_\_\_

5. Use the number tape to help you find the answer.



2 less than 30 is \_\_\_\_\_.

Marks: 

3
---

6. In a Mathematics quiz, four children scored the following marks.

I scored 24 marks.

Amy

I scored 5 more marks than Amy.

Benny

Denise scored 7 more marks than me.

Caden

I scored 23 marks.

Denise


Who scored the highest mark?

\_\_\_\_\_ scored the highest mark.

Marks: 

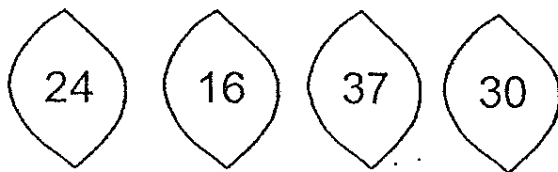
1
---

7.



There are \_\_\_\_\_ apples.

8. Arrange the numbers in order. Begin with the smallest.



\_\_\_\_\_, \_\_\_\_\_, \_\_\_\_\_, \_\_\_\_\_  
smallest

9. Fill in the answer in the blank.

$$20 - 12 = \underline{\hspace{2cm}}$$

Marks: 

6
---

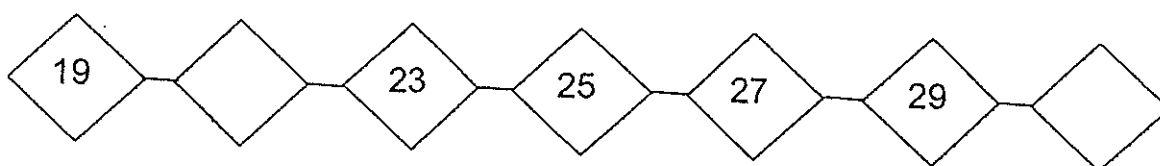
10. Fill in the missing number in the box to complete the addition equation.

$$\boxed{5} + \boxed{\phantom{00}} = \boxed{38}$$

11. Fill in the missing digits in the boxes.

	Tens	Ones
	3	9
-	1	7
-----		
	<input type="text"/>	<input type="text"/>

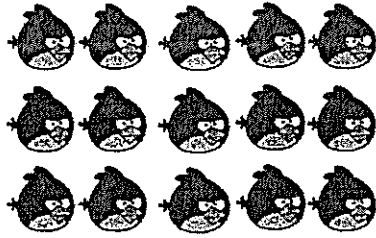
12. Complete the number pattern. Fill in the missing numbers.




Marks: 

6
---

13. Fill in the missing number.



Set A

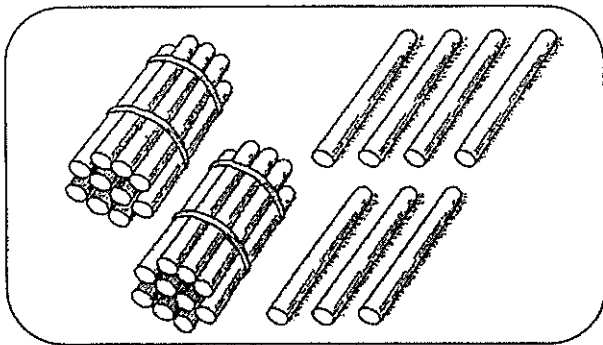


Set B

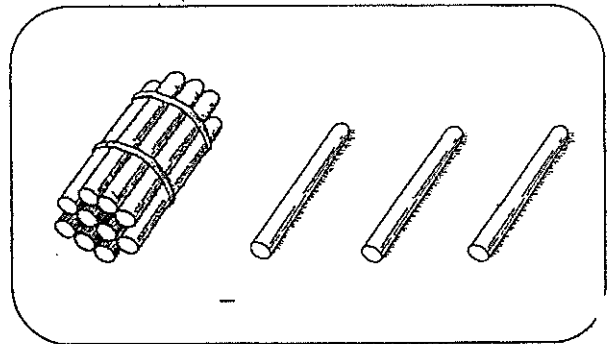
Set A has \_\_\_\_\_ more birds than Set B.


14.

Liming



Mary



How many  do Liming and Mary have altogether?

Complete the equation below to find the answer.

$$\square + \square = \square$$

Marks: 

4
---

15. Pick two numbers below and complete the subtraction equation.

18



17

25

9

$$\square - \square = 7$$

16. Circle the two stars that have the **same** answer.





Marks: 

4
---



17.



There are 12 monkeys swinging on the branches.

6 monkeys come to join them.

How many monkeys are there altogether?


Complete the equation below to find the answer.

$$\square \bigcirc \square = \square$$

Marks: 

2
---

18.




Miss Tan buys 16 stickers.

She buys 7 more stickers than Miss Ng.

How many stickers does Miss Ng buy?

Miss Ng buys \_\_\_\_\_ stickers.

----- The End -----



**Remember to check your work!**

*This is the property of Maha Bodhi School.  
No part of this should be duplicated without the permission from Maha Bodhi School.*

Marks: 

2
---