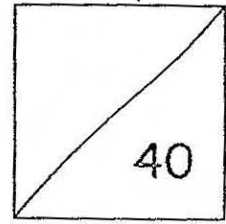




HENRY PARK PRIMARY SCHOOL
MATHEMATICS
PRIMARY 2 (TERM 3)
TOPICAL QUIZ 3



Name: _____ ()

Date: 19 August 2014

Class: Pr 2 _____

Parent's Signature: _____

Section A: Multiple Choice Questions (6 x 1 mark = 6 marks)

Choose the correct answer and write its number in the brackets provided.

1. Multiply 3 by 5. What is the answer? _____

(1) 8

(2) 2

(3) 12

(4) 15

()

2. $20 \div 2 =$ _____

(1) 20


(2) 10

(3) 5

(4) 4

()

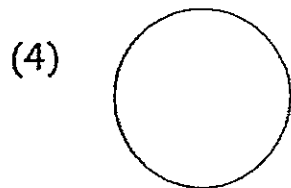
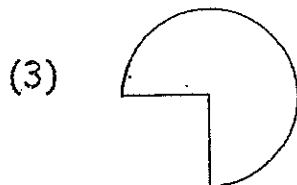
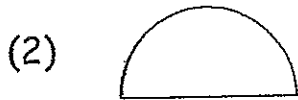
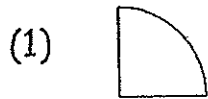
3. How much money is shown in the box below?



- (1) \$20.00
- (2) \$20.50
- (3) \$21.00
- (4) \$21.50

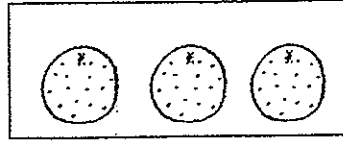
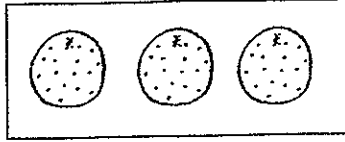
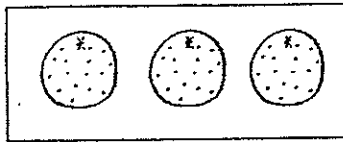
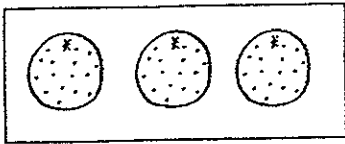
()

4. Which of the following figure is a quarter circle?



()

5.



Which of the following represents the above picture?

(1) 3 groups of 4

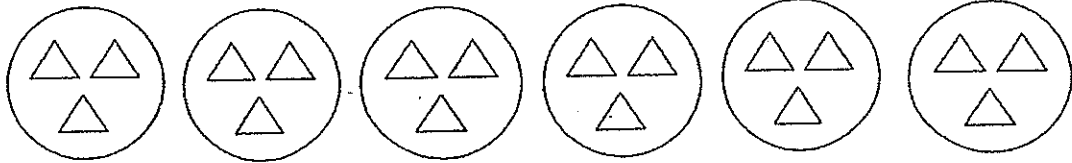
(2) $3 + 3 + 3 + 3 + 3$

(3) 4×3

(4) $4 + 4 + 4$

()

6.



The division equation that shows the above picture is _____.

(1) $6 \div 3 = 2$

(2) $6 \div 2 = 3$

(3) $18 \div 3 = 6$

(4) $18 \div 2 = 9$

()

Section B: Open - Ended Questions

Question 7 to 17 carry 1 mark each. Question 18 to 22 carry 2 marks each.


Fill in your answers in the boxes provided.

7. $27 \div \underline{\hspace{2cm}} = 9$

8. Peter bought 4 boxes of cupcakes.

There are 4 cupcakes in each box.


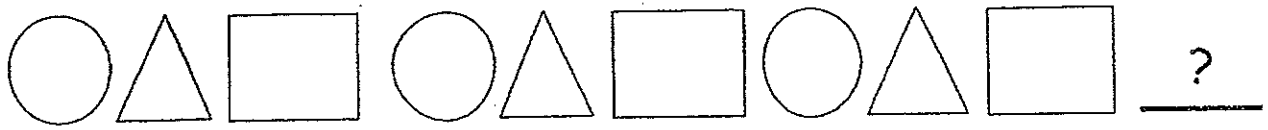
How many cupcakes are there altogether?




9. I have 3 sides. I have 3 corners.

What shape am I?


10. Draw the next shape in the box provided.



11. Circle the correct amount to show \$5.15.

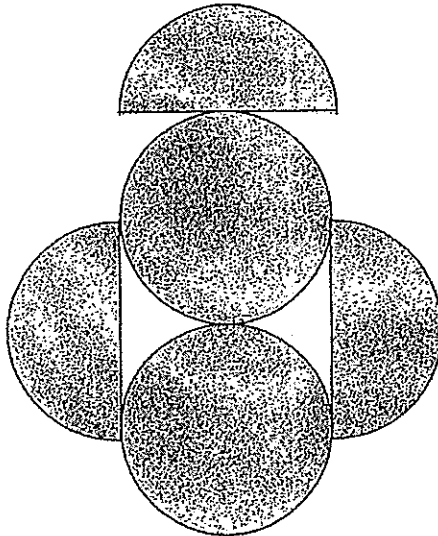


12. Count this set of coins and write its amount in dollars and cents.



\$

13. Count the number of circle(s) and semicircle(s) used to form this picture.



semicircle(s)

circle(s)

14. Mary packs 28 sweets into 4 bags.
How many sweets are there in each bag?

sweets

15. $5 + 5 + 5 + 5 + 5 + 5 = \underline{\hspace{2cm}} \times 5$

16. Draw the next shape in the box provided.




17. How many quarter circles make 2 circles?

18. How many two-dollar notes make \$18 ?

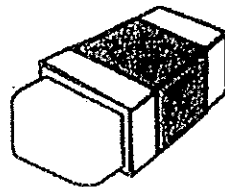
19. Ali has \$2 to spend on stationery at the bookshop. Which 3 items could he buy for exactly \$2 ? Circle the 3 items.

pencil



50 cents

eraser




60 cents

pen



85 cents

ruler



55 cents

sharpener




40 cents

20. Divide 30 butterflies into three equal groups.

Write a **division equation** to show this grouping.

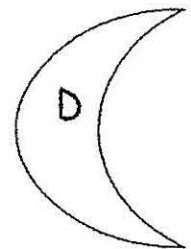
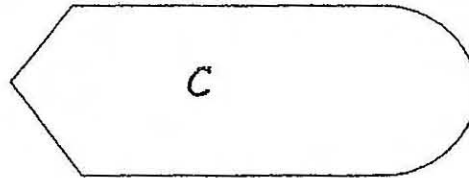
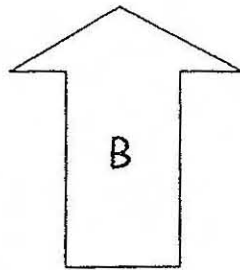
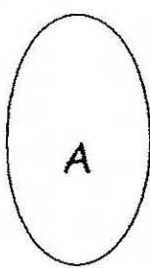
21. Write 2 multiplication equations for the picture given.



$$2 \times \boxed{} = \boxed{}$$

$$3 \times \boxed{} = \boxed{}$$

22. Write the letters of the figures that belong to the groups given in the table. Use each letter once only.



Figure(s) made up of straight lines only	Figure(s) made up of curves only	Figure(s) made up of both straight lines and curves

Section C: Word Problems

Question 23 to 25 carry 3 marks each, Question 26 carries 4 marks.

Read each question carefully. Show your equations and word statements clearly in the spaces provided.

23. Ben spent 10 days to read 60 pages of his storybook.

He read the same number of pages each day.

How many pages did he read each day?

Working

24. There are 8 groups of pupils in the hall.

There are 4 pupils in each group.

How many pupils are there in the hall?

Working

25. Matt had some money. He paid \$12 for a water bottle and \$28 for a bag. He received \$10 as change.

How much money did Matt have at first?

Working

26. At a fruit stall, a box of apples cost \$10.

There are 5 apples in each box.

(a) Mdm Lee bought 40 apples from the fruit stall.

How many boxes of apples did she buy?

Working

(b) How much did she pay for 40 apples?

Working

- End of Paper -

Setters: Mrs Mona Leong, Ms Ow Yeong and Ms Norasikin

Year: 2014

Level: Primary 2

School: Henry Park Primary School

Subject: Mathematics


CA2

1.	2.	3.	4.	5.	6.
4	2	3	1	3	3

7. 3

8. 16

9. triangle

10. 


11. Circle: 5 × \$1 coin, 1 × \$0.10, 1 × \$0.05

12. 0.95

13. 3 semicircles
2 circles

14. 7

15. 6

16. 

17. 8

18. 9

19. Circle: ruler, pen, eraser

20. $30 \div 3 = 10$

21. $2 \times 6 = 12$

$3 \times 4 = 12$

22. Figure(s) made of straight lines only: B
Figure(s) made up of curves only: A & D

Figure(s) made up of both straight lines and curves: C

23. $60 \div 10 = 6$

He read 6 pages each day.

24. $8 \times 4 = 32$

There are 32 pupils in the hall.

25. $28 + 12 + 10 = 50$

He had \$50 at first.

26. a) $40 \div 5 = 8$

She bought 8 bottles of apples.

b) $8 \times 10 = 80$

She paid \$80 for the 40 apples.