

Pei Chun Public School

Name : _____

Date: _____

Class : 2 _____

Money

A) Write the correct amount of money in the box.

1) 



\$


2) 



\$

3) 

\$

4) 

\$

B) Fill in the missing amount to make \$2.00 .

	Missing amount
e.g. \$0.10	190¢
1) \$0.40	_____ ¢
2) 80¢	\$ _____
3) \$ _____	150¢
4) 100¢	\$ _____

C) Study the picture carefully and answer the following questions.



toy plane - \$0.80



toy car - \$1.50



toy rabbit - \$5.50



marble - \$0.35


- 1) The _____ is more expensive than the toy car.
- 2) James bought a toy plane. He gave the cashier \$1. He would get back _____ ¢ change.
- 3) The _____ is cheaper than the toy plane.

D) Study the picture carefully and answer the following questions.

1. Look at the price of the entrance tickets to the National Zoo.

Entrance tickets to the National Zoo

Adult	\$24
Child	\$9

The image shows three cartoon-style illustrations. On the left is a small child with a large head and a single hair curl, wearing a dark shirt and shorts, holding a stick. In the middle is a lion's head with a large, textured mane. On the right is a full-body illustration of a lioness with a large, dark, spiky mane, wearing a small hat and holding a small object.

Mr Phang spent a total of \$60 to buy tickets for his children and himself. How many children are there altogether?

There are _____ children altogether.

2. Look at the ticket prices for a play at ABC Theatre.

<p>ABC Theatre proudly presents "<i>Alice In Lala Land</i>"</p> <p>Adult \$10 Child \$8</p> <p>**Special family package** of 2 Adults & 2- Children at \$30</p>

Mrs Chia wants to buy tickets for her family of two adults and three children. How should she buy the tickets in order to save the most money?

Explain your answer by showing the working clearly below.

3. Rahman went to a bookstore with \$30.

calculator

notebook

colour pencils

stapler



\$16

\$6

\$12

\$8

(a) Rahman bought 3 of the above items for exactly \$30.


He bought _____

(b) If he gave the cashier \$100, how much change would he receive?

He received \$ _____


4. Mary has five 20¢ coins.
 What are the things she can buy with the money she has?
 (She can buy only one of each item.)

sharpener




55 cents

pair of scissors



40 cents

pencil



50 cents

ruler



45 cents

eraser



30 cents

pen



70 cents

Write down the different combination of things she can buy in the table below.

a.	
b.	
c.	

Pei Chun Public School
Topical Review – Shapes and Time
Mathematics
Primary 2

Name: _____ () Date: _____

Class: Primary 2 / _____

Section A

Write your answers in the spaces provided.

-
1. Read the clues and identify the shape. Write the name of the shape in the blank.

square	circle	semicircle
rectangle	triangle	quarter circle


- a) This shape is formed by a curve and a straight line,
You get this shape when you cut a circle into 2 equal parts.

This shape is a

- b) This shape is formed by a curve and 2 straight lines.
You get this shape when you cut a circle into 4 equal parts.


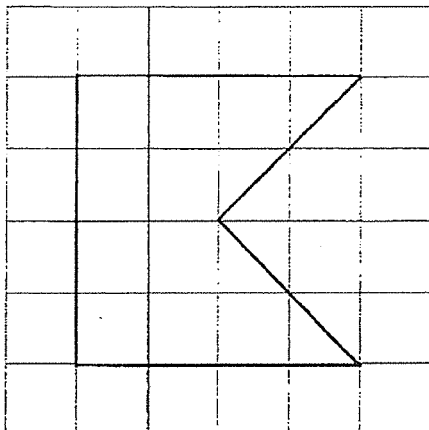
This shape is a

2. Look at the figure below. Fill in the table below.



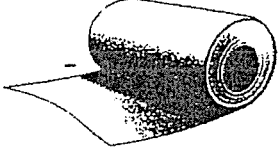

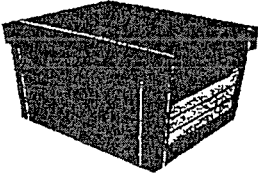






Name of shape	Number
Rectangle	
Square	
Triangle	
Quarter circle	
Semicircle	
Circle	

3. Copy the given figure to the square grid on the right.



4. Group the objects by shape correctly.

		
Tennis ball	Rubik toy	Toilet roll
		
Dice	Shoe box	Ice cream
		
Microwave	Party hat	Pencil holder

Cone	
Cube	
Cuboid	
Cylinder	
Sphere	


5. Fill in the blanks with "a.m" or "p.m".

a) After completing his homework every night, Benny goes to bed at 11 _____.

b) John has his breakfast at 7 _____ every day.


6. Write the time shown on the clock in a.m or p.m.

a) Sally goes for her swimming lesson every Saturday at the time shown on the clock below.



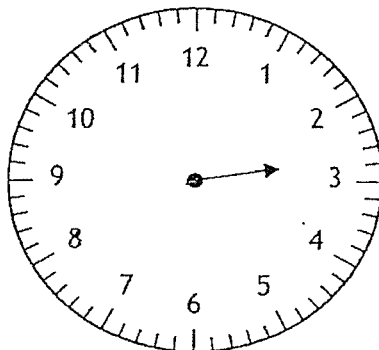
Sally goes for a swim at _____ every Saturday.

b) Mandy does her homework at the time shown on the clock below.

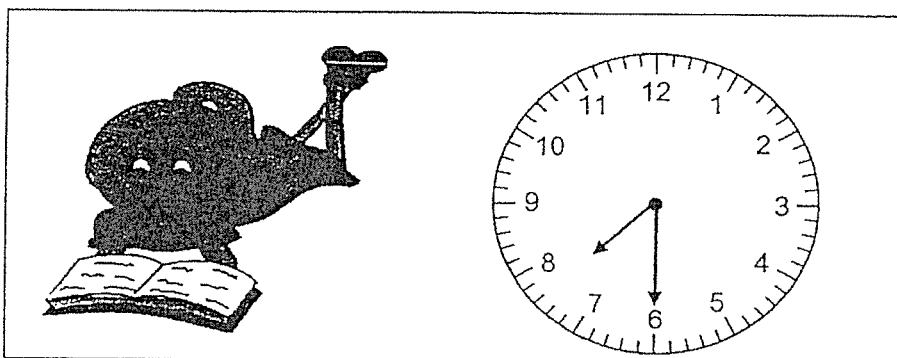


Mandy does her homework at _____.

7. Draw the minute hand on the clock to show 2.40 p.m.



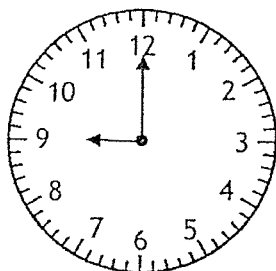
8. Su Ping started reading her story book at 7.30 p.m. She read for 1 hour. What time did she stop reading the book?

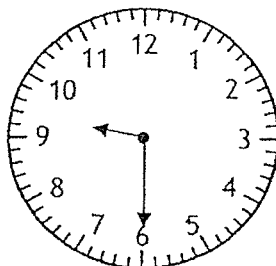


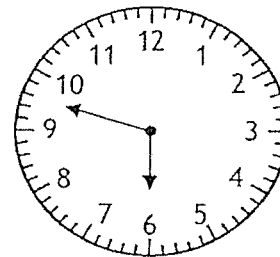
_____ p.m

9. Joanne reached the library at 9.00 a.m. She left the library half an hour later. What time did Joanne leave the library?


Put a tick at the box with the correct timing.







10. Hamid spent $\frac{1}{2}$ hr at a bookshop.

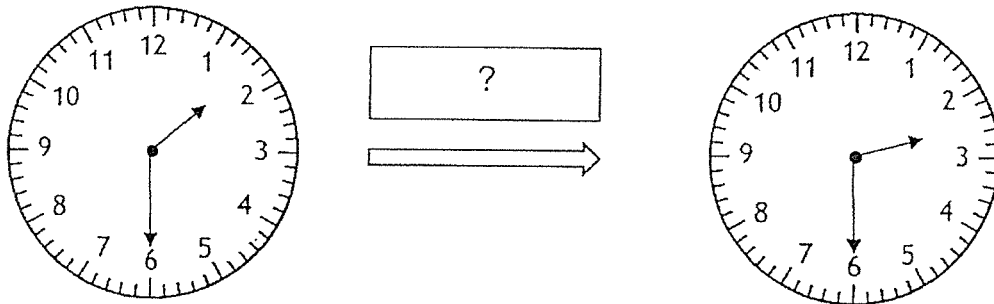


He left the bookshop at the time shown above.

What time did he arrive at the bookshop?

_____ a.m.

11. Andrew had his piano lessons at 1.30 p.m. His piano lesson ended at 2.30 p.m. What long was the piano lesson?



Andrew's piano lesson lasted for _____.

Overall Assessment				
Question	(✓Tick)	My Assessment	(✓Tick)	Teacher's Assessment
				<i>I agree with your assessment.</i>
			You can work on the followings:	
1		I am able to identify, name and describe 2D shapes.		Able to identify, name and describe 2D & 3D shapes.
2		I am able to identify the basic shapes that make up a given figure.		Able to identify the basic shapes that make up a given figure.
3		I am able to copy figures on dot or square grid.		Able to copy figures on dot or square grid.
4		I am able to classify 3D shapes.		Able to classify 3D shapes.
5 & 6		I am able to tell time to 5 minutes using a.m and p.m.		Able to tell time using a.m and p.m.
7		I am able to draw hands on the clock face to show the time.		Able to draw hands on the clock face to show the time.
8 to 10		I am able to find end time based on 1 hour or half-hour duration with respect to a given time.		Able to find end time based on 1 hour or half-hour duration with respect to a given time.
11		I am able to find duration of 1 hour or half hour.		Able to find duration of 1 hour or half hour.

Parent's Signature: _____

Pei Chun Public School

Name : _____ ()

Date: _____

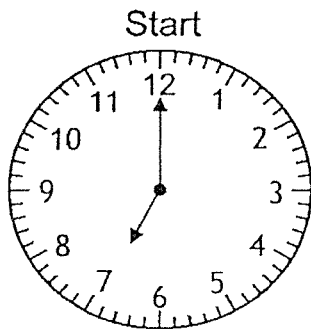
Class : 2 _____

Time

Answer the questions below

- 1

1. Huihui started jogging at 7.00 a.m. If she jogged for 30 minutes, what time did she stop jogging?

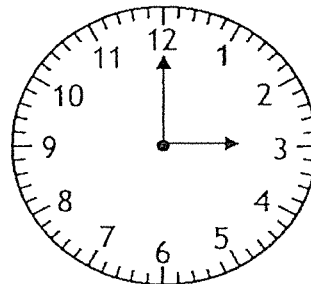


End

?

2. Mary talked on the telephone for 1 hour. She stopped talking at 3.00 p.m. What time did she start talking on the telephone?

?



Start

End

3. James left his house for school in the morning. He took 30 minutes to wash up and get to the bus stop. The bus journey took 1 hour and he reached his school at 7.15 a.m. At what time did he wake up?

4. Jerry started doing his homework at 2.50 p.m. and completed his homework half an hour later.
His sister, Mary, took 45 minutes more to complete her homework.
At what time did Jerry's sister complete her homework?

5. Mdm Shela finished her cooking at 11.50 a.m. after cooking for an hour. Then she went to take a bath and came out from the bathroom half an hour later.

- (a) At what time did she start cooking?

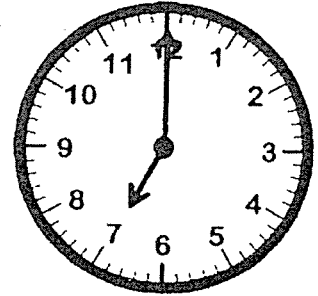
She started cooking at _____.

- (b) At what time did she come out from the bathroom?

She came out from her shower at _____.

6. Ashton took a bus from Toa Payoh to City Hall.
The clock on the right shows the time on Ashton's watch
when he boarded the bus.

- (a) The journey took 1 hour and 30 minutes. What time did he reach City Hall?



He arrived at City Hall at _____ a.m.

- (b) After spending 2 hours in City Hall, he took the MRT home.
The journey took 30 minutes. What time did he reach home?

He reached at _____

Pei Chun Public School

Name : _____

Date: _____

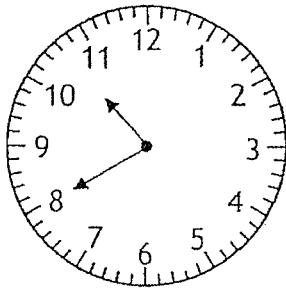
Class : 2 _____

Time

A) Look at the clock.

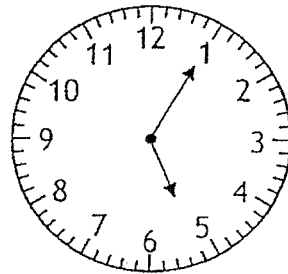
Write the time in the blanks provided.

1.




_____ a.m

2.



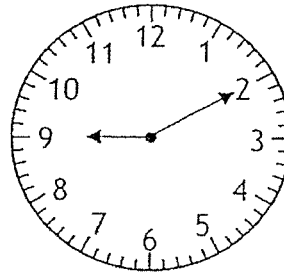
_____ a.m

3.



_____ p.m

4.

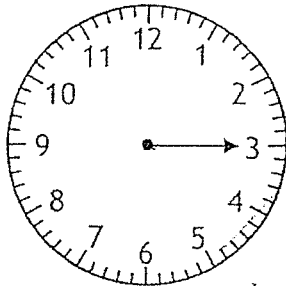


_____ p.m

B) Look at the clock.

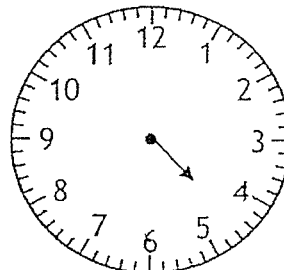
Draw the missing hands to show the time.

1.



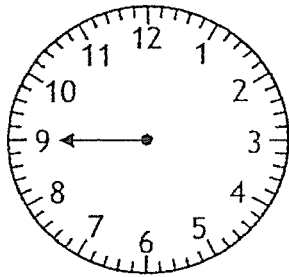
1.15

2.



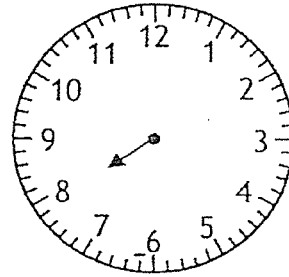
4.30

3.



5.45

4.



7.55

C) Fill in the blanks. Write 'a.m.' or 'p.m.' in your answer.

1. What time is 30 minutes after noon? _____
2. What time is 1 hour before noon? _____
3. What time is 30 minutes after midnight? _____
4. What time is 1 hour before midnight? _____

D) Fill in the blanks with 'a.m.' or 'p.m.' .

1. Mrs Tan bathes her daughter every morning at 8.35 _____
2. Mary watches her favourite television programme at 2.30 _____
in the afternoon.
3. Mrs Ravi comes home from work at 8.45 _____ in the
evening.
4. Muthu sleeps at 9 _____ every night.

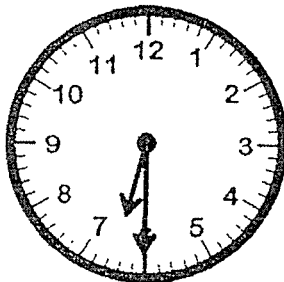
E) Write the following times in numerals.

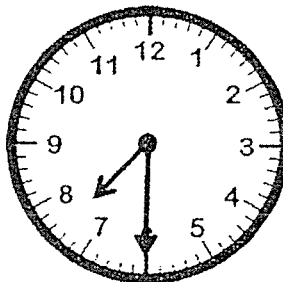
1. The time on the clock is 6.55 p.m. It is _____ minutes past 6 o'clock. It is also _____ minutes to 7 o'clock.
2. The time on the clock is 2.40 a.m. It is _____ minutes past 2 o'clock. It is also _____ minutes to 3 o'clock.
3. A quarter past four in the afternoon is _____.
4. Twenty minutes to two in the afternoon is _____.

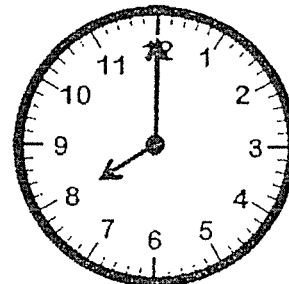
F) Answer the questions below

1. Juliet woke up 30 minutes after the alarm clock rang. What time did the alarm clock ring if she woke up at 7 a.m?

a) Tick the clock that shows the correct time.










The alarm clock rang at _____.

- b) Juliet missed the bus and arrived at school 1 hour after the lessons had started. If the lessons had started at 9 a.m., what time did she arrive?

Tick the clock that shows the correct time.



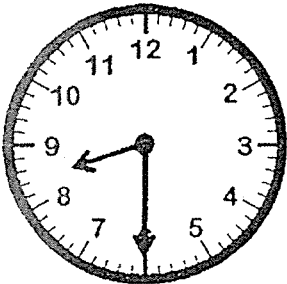


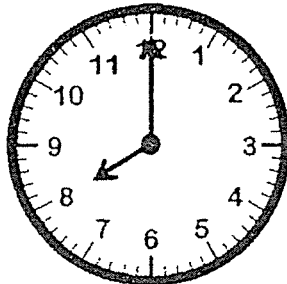


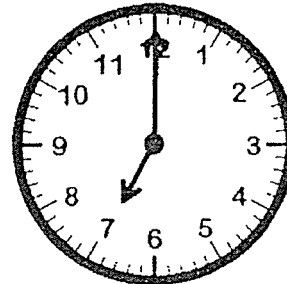
She arrived at _____

- c) Juliet was also late for a movie. She arrived at the movie theatre 30 minutes after the show had started at 7.30 p.m.

What time did she arrive? Tick the clock that shows the correct time.







She arrived at _____.

Pei Chun Public School

Name: _____




Date: _____

Class : 2 _____

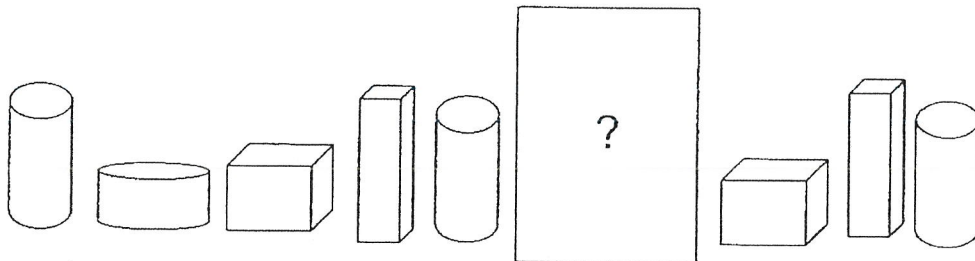
Shapes, Solid Figures and Patterns (II)



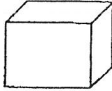

1. Which solids should be in the blanks? Write the letters in the boxes.





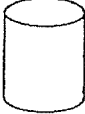
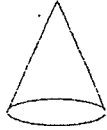
2. What is the missing shape? Put a tick in the box.





			

3. What is the missing shape? Write the letter in the box.

The sequence of shapes is: cone, cube, circle, cylinder, cone, box (a), circle, box (b), cone.

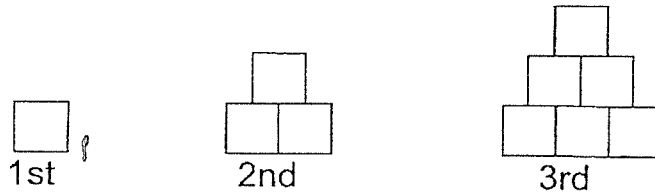
			

4. Study the pattern. Draw the dots in the empty box.

		
---	--	---

5. How many squares are there in the 5th figure?

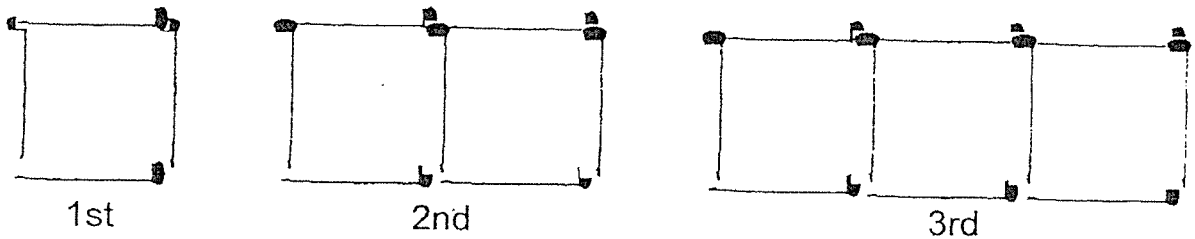
Tip: Study the pattern. Draw the squares in the space provided.



There are _____ squares

6. Each figure shown below is formed by matchsticks.

How many matchsticks are needed to form the 5th figure?



_____ matchsticks are needed to form the 5th figure.

Pei Chun Public School

Name : _____

Date: _____

Class : 2 _____

Shapes, Solid Figures and Patterns (I)

1. Look at the figure below.



How many straight lines do you see? _____

How many curved lines do you see? _____


2. (a) Circle the items with at least one curved surface.



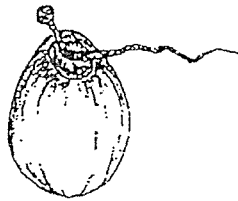
tree



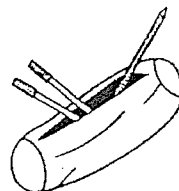
marble



sugar cubes



coconut




pencil case




ice-cream

(b) Which of these items have the shape of a sphere?

3. Add 3 straight lines to form a square and 2 triangles.

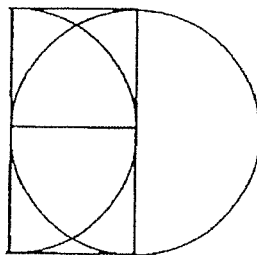


4. How many rectangles can you find in this shape?



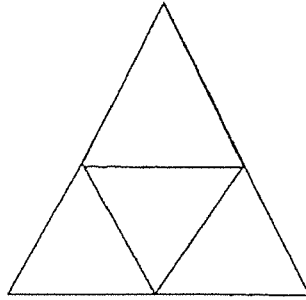
There are _____ rectangles.

5. How many circles, semicircles and quarter circles can you find in this shape?



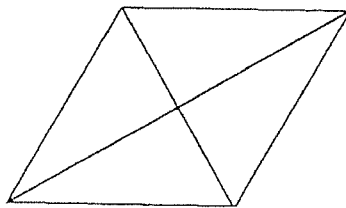
There are _____ circle(s), _____ semicircles and
_____ quarter circles

6. How many triangles are there in the figure below?



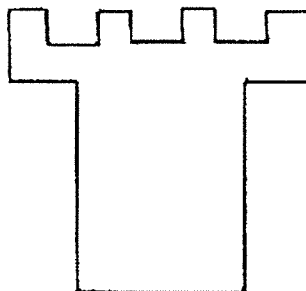
There are _____ triangles.

7. How many triangles are there in the figure below?



There are _____ triangles

8. Draw lines to show 4 squares and 2 rectangles used to make the figure.



ANSWER KEY

YEAR : 2019
LEVEL : PRIMARY 2
SCHOOL : PEI CHUN PUBLIC SCHOOL
SUBJECT : MATH
DATE : 27 SEPTEMBER 2019

A)

- 1) \$63.20
- 2) \$49.00
- 3) \$1.15
- 4) \$4.10

B)

1)	160¢
2)	\$1.20
3)	\$0.50
4)	\$1.00

C)

- 1) Toy rabbit
- 2) 20¢
- 3) Marble

D)

- 1. There are 4 marbles altogether.
- 2. $10 \times 2 = 20$
- $8 \times 3 = 24$
- $20 + 24 = 44$
- $\$30 + \$8 = \$38$

Mrs Chia should buy a special family package and a ticket for one child to save the most money.

3.(a) He bought a calculator, stapler and a notebook.

(b) He received \$70

4. a.Eraser, Pen

b.Ruler, sharpener

c.Pair of scissor, pencil

Topical Review- Shapes and Time


1. a) Semicircle

b) quarter

2.

Name of shape	Number
Rectangle	5
Square	1
Triangle	4
Quarter circle	1
Semicircle	2
Circle	6

3.



4.

Cone	Party hat, ice cream cone
Cube	Dice, Rubik toy
Cuboid	Shoe box, microwave
Cylinder	Toilet roll, Pencil holder
Sphere	Tennis ball

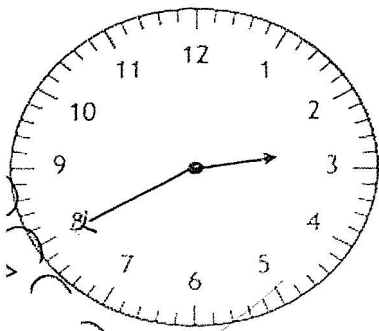
5. a)p.m..

b)a.m. (

6. a)7.50 a.m.

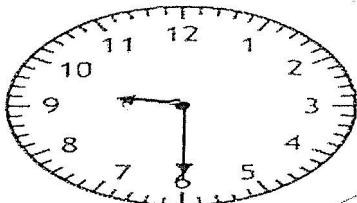
b)7.20 p.m.

7.



8. 8.30p.m. (

9.



10. 10.30 a.m.

11. 1 hour

Time

1. 7.30 a.m.
2. 2.00 p.m.
3. 5.45 a.m.
4. 4.05 p.m.
5. (a) 10.50 a.m.
(b) 12.20 p.m.
6. (a) 8.30
(b) 11.00 a.m.

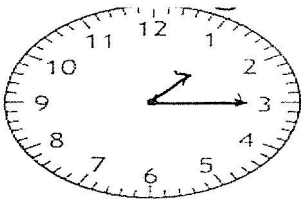
Time

A)

1. 10.40 a.m.
2. 5.05 a.m.
3. 12.50 p.m.
4. 9.10 p.m.

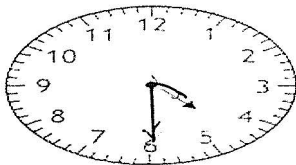
B)

1.



1.15

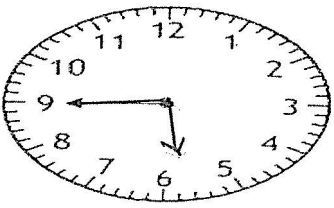
2.



4.30

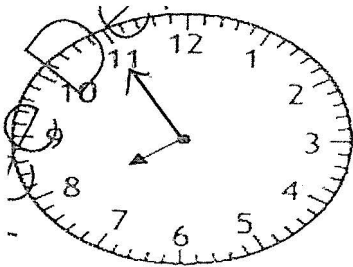
H

3.



5.45

4.



7.55

- e)
- 1. 12.30 p.m.
 - 2. 11.00 a.m.
 - 3. 12.30 a.m.
 - 4. 11.00 p.m.

D)

- 1. a.m.
- 2. p.m.
- 3. p.m.
- 4. p.m.

E)

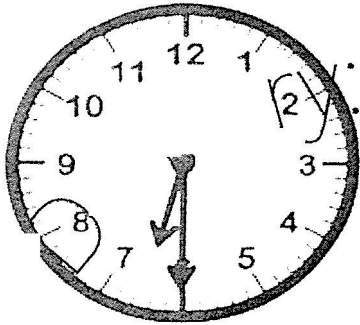
- 1. 55 minutes
- 5 minutes
- 2. 40 minutes
- 20 minutes,

3. 4.15

4. 1.40

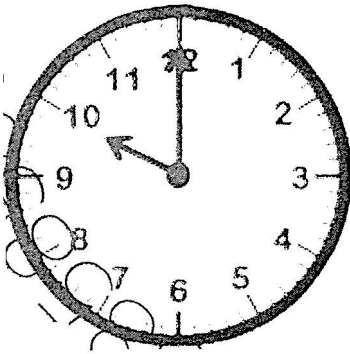
F)

1. (a)



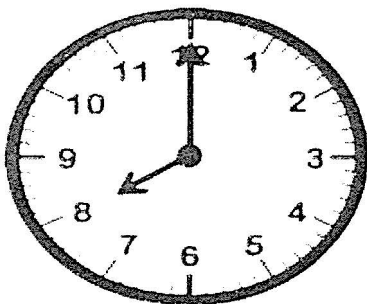
~~6.30~~ a.m.

(b)



10 a.m.

c)



8.00p.m.

Shapes, Solid Figures and Patterns (II)

1.

	(a)	(b) & (c)
--	-----	-----------

5. There are 15 squares

6. 16 matchsticks are needed to form the 5th figure.

Shapes, Solid Figures and Pattern (I)

1. 3

3

7


2. (a)



tree



marble



sugar cubes



coconut



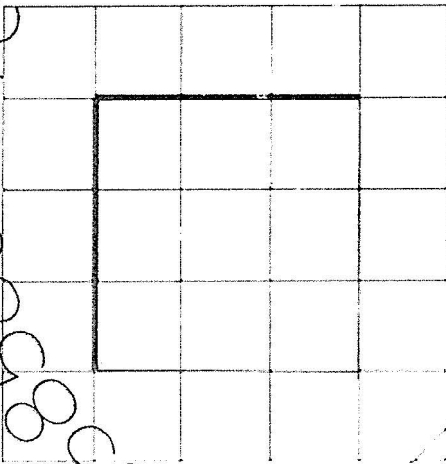
pencil case



ice-cream

(b) marble

3.



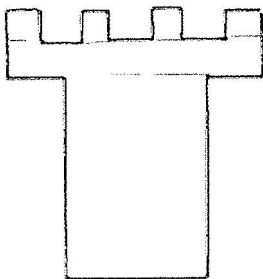
4. There are 9 rectangle.

5. There are 1 circle, 3 semicircles and 4 quarter circles

6. There are 5 triangles.

7. There are 8 triangles

8.



END

8

