



HENRY PARK PRIMARY SCHOOL
2024 PRIMARY 2
MATHEMATICS QUIZ 1

Name: _____ () Date: _____

Class: Primary 2 _____

Section A: Multiple-choice Questions

Choose the correct answer and write its number (1, 2, 3 or 4) in the brackets provided.

1. What is the value of the digit 7 in 785?

- 1) 7
- 2) 700
- 3) 785
- 4) 7 tens

()

2. Which of the following is the same as 904?

- 1) $90 + 4$
- 2) $90 + 40$
- 3) $900 + 4$
- 4) $900 + 40$

()

3. What is 10 less than 379?

- 1) 369
- 2) 380
- 3) 389
- 4) 378

()

4. Which odd number is greater than 300?

- 1) 312
- 2) 601
- 3) 297
- 4) 133

()

Section B: Open-ended Questions**Fill in the correct answers in the spaces provided.**

5. In 705, which digit is in the hundreds place?

The digit is .

6. The sum of 470 and 316 is .

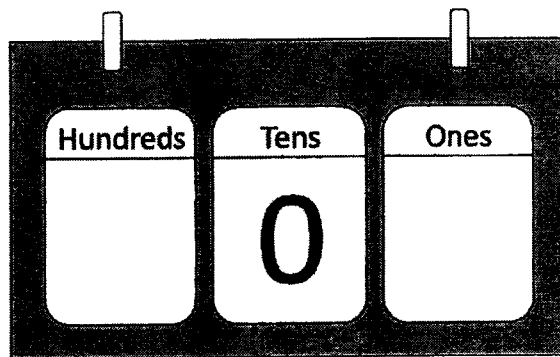
7. Fill in the boxes with the correct numbers.

3 0 9

7 6

<input type="text"/>	<input type="text"/>	<input type="text"/>
----------------------	----------------------	----------------------


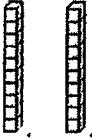
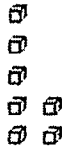
8. I am thinking of a 3-digit number. It is smaller than 200. The digit zero is in the tens place. What is the greatest 3-digit number that I am thinking of?



The greatest 3-digit number that I am thinking of is

Questions 9 to 15


9(a) What is the number shown on the place value chart?

Hundreds	Tens	Ones
		

The number is

(b) Write your answer to (a) in words.

12. Look at the numbers below. Fill in the box with the correct answer.



799 is greater than 680 but smaller than

13. Find the missing number in the box.

$$202 + 74 = 200 +$$

The missing number is

14. Study the number pattern carefully.
What is the missing number in the box?

712 , 716 , 715 , 719 , ? , 722 , 721 , 725 , 724

The missing number is

15. James had some stickers at first. After giving away 233 stickers to Eve, he had 691 stickers left. How many stickers did James have at first?

James has stickers at first.

Section C: Problem Sums

Do these sums carefully. You may use models to help you. Show all your equations and workings clearly in the spaces provided.

16. There are 685 pupils in the school last year. 127 pupils joined the school this year. How many pupils are there in the school now?

Working

There are pupils in the school now.

17. Lisa has 540 stamps. She has 300 more erasers than stamps. How many erasers does Lisa have?

Working

Lisa has erasers.

18. A shopkeeper sold 428 kg of rice on Tuesday morning.
He sold 39 kg of rice on Tuesday afternoon.

(a) How many more kilograms of rice did he sell in the morning than in the afternoon?

Working

He sold kg more rice in the morning than in the afternoon.

(b) How many kilograms of rice did he sell on Tuesday altogether?

Working

He sold kg of rice on Tuesday altogether.

--- END OF PAPER ---
Setter: Mrs Julia Wan

SCHOOL : HENRY PARK PRIMARY SCHOOL
 LEVEL : PRIMARY 2
 SUBJECT : MATHEMATICS
 TERM : QUIZ 1

SECTION A

Q1	Q2	Q3	Q4
2	3	1	2

SECTION B

Q5	7
Q6	786
Q7	233
Q8	109
Q9 (a)	427
Q9 (b)	Four hundred and twenty-seven
Q10 (a)	742
Q10 (b)	567, 657, 675, 765
Q11	7, 6
Q12	900
Q13	76
Q14	718
Q15	$691 + 233 = 924$

SECTION C

Q16	$685 + 127 = 812$
Q17	$540 + 300 = 840$
Q18 (a)	$428 - 39 = 389$
Q18 (b)	$428 + 39 = 467$



**HENRY PARK PRIMARY SCHOOL
2024 PRIMARY 2
MATHEMATICS QUIZ 2**

Name: _____) Date: _____

Class: Primary 2 _____

Section A: Multiple-choice Questions

Choose the correct answer and write its number (1, 2, 3 or 4) in the brackets provided.

1. Which of the following shows 4 groups of 2?

1) 

2) 

3) 

4)  ()

2. Mr Wong packs 10 cookies into bags of 5.
How many bags of cookies are there?

1) 5

2) 2

3) 15

4) 50 ()

3. Share 16 stickers equally among 2 friends.
Which of the following equations shows the number of stickers each friend receives?

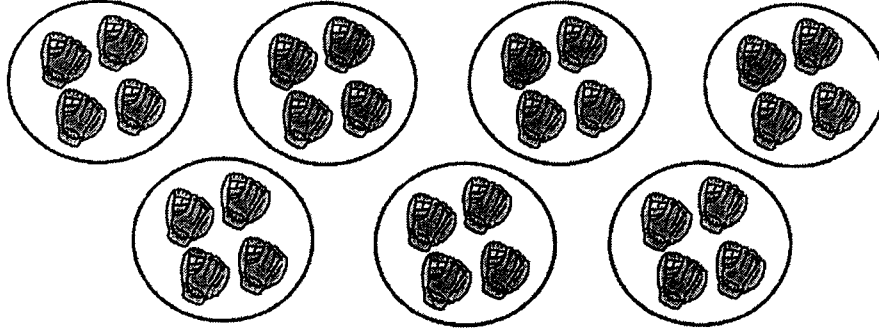


- 1) $16 - 2 = 14$
 2) $16 + 2 = 18$
 3) $16 \div 2 = 8$
 4) $16 \times 2 = 32$ ()
4. $10 + 10 + 10 + 10 + 10 + 10 + 10 = \underline{\hspace{2cm}} \times 10$
 1) 7
 2) 10
 3) 70
 4) 80 ()
5. $35 \div 5$ is less than $40 \div 5$.
 1) 1
 2) 5
 3) 7
 4) 8 ()

Section B: Open-ended Questions


Fill in the correct answers in the spaces provided.

6. Based on the picture below, complete the equation.



$$28 \bigcirc 4 = 7$$

7. Circle the pencils to show 4 equal groups.



8. Multiply 2 by 7.

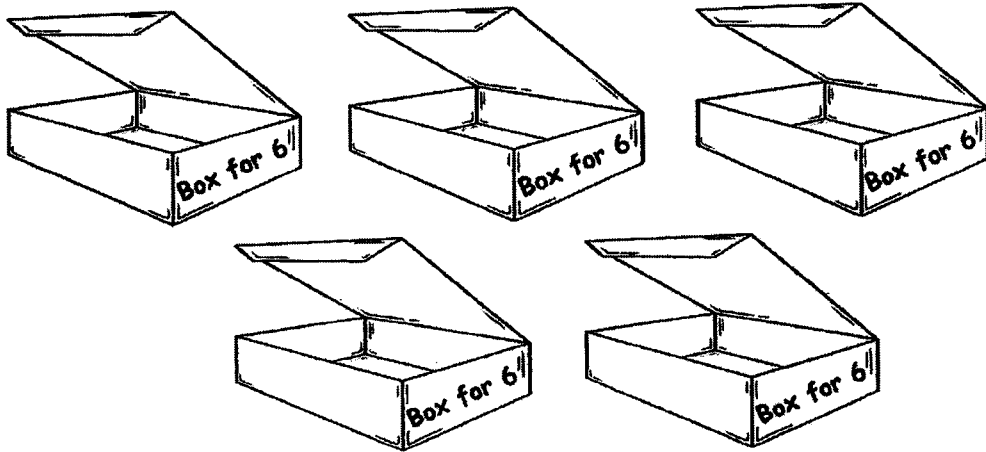
The answer is .

9. What is the missing number in the box below?

$$5 \times 5 = \boxed{?}$$


The missing number is .

10. Mrs Ang bought some doughnuts and 5 boxes.
1 box can hold 6 doughnuts.
How many doughnuts did Mrs Ang buy to fill up all the 5 boxes completely?



Mrs Ang bought doughnuts.


11. Based on the picture below, write a multiplication and a division equation.



$$\boxed{} \times \boxed{} = \boxed{}$$

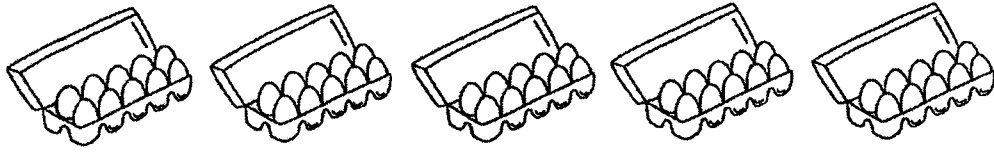
$$\boxed{} \div \boxed{} = \boxed{}$$

12. Circle the strawberries to show groups of 7.



There are groups of 7 strawberries.


13. Complete the equations.



$$\boxed{} \times 10 = 50$$


$$\boxed{} \div 5 = 10$$

14. Ben shared 12 toy cars equally with Sam.
How many toy cars did each of them have?



Each of them had toy cars.

15. Put a tick (✓) or a cross (x) in the box next to the statement that describes the picture below.



Statements	Correct (✓)	Wrong (x)
$8 \times 10 = 80$		
$10 \times 10 = 90 + 10$		
$100 \div 10 = 10$		

16. Mr Tan has \$40 in his wallet.
He has two \$5-notes, two \$10-notes and some \$2-notes.
How many \$2-notes are there in his wallet?




There are \$2-notes in his wallet.

Section C: Problem Sums

Do these sums carefully. Show all your equations and workings clearly in the spaces provided.

17. A cat ate 18 fish in 6 days. It ate the same number of fish each day. How many fish did the cat eat in one day?



The cat ate _____ fish in one day.

18. There are 9 apples in each basket. There are 2 baskets. How many apples are there altogether?

There are _____ apples altogether.

19. (a) A pole is 2 m long.
What is the total length of 10 such poles?

The total length of 10 such poles is _____ m.

- (b) Miss Lee bought a ribbon that is 5 m long. She cut the ribbon into equal pieces. Each piece of ribbon is 1 m long. How many equal pieces of ribbon are there?

There are _____ equal pieces of ribbon.

--- END OF PAPER ---

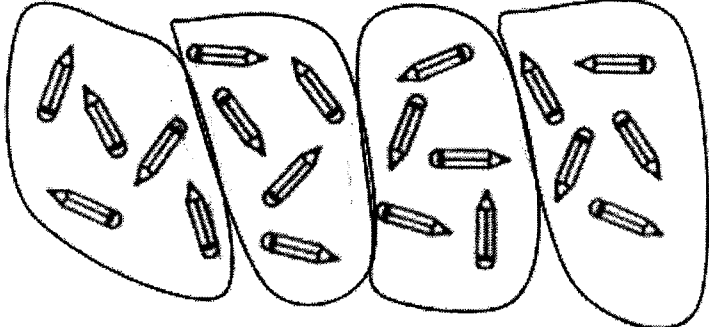
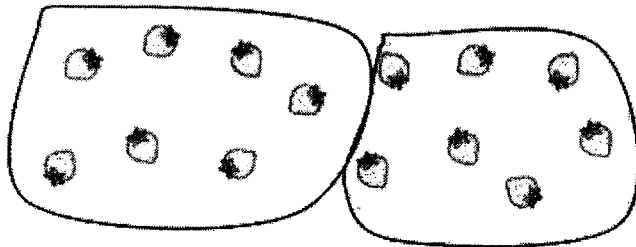
Setter: Mrs Wong Ser Huay

SCHOOL : HENRY PARK PRIMARY SCHOOL
 LEVEL : PRIMARY 2
 SUBJECT : MATHEMATICS
 TERM : QUIZ 2

SECTION A

Q1	Q2	Q3	Q4	Q5
4	2	3	1	1

SECTION B

Q6	$28 \div 4 = 7$								
Q7									
Q8	14								
Q9	25								
Q10	30								
Q11	$3 \times 8 = 24$ $24 \div 3 = 8$								
Q12									
Q13	$5 \times 10 = 50$ $50 \div 5 = 10$								
Q14	6								
Q15	<table border="1" style="width: 100%;"> <tr> <td style="text-align: center;">Correct (✓)</td> <td style="text-align: center;">Wrong (x)</td> </tr> <tr> <td style="text-align: center;">✓</td> <td style="text-align: center;">X</td> </tr> <tr> <td> </td> <td> </td> </tr> <tr> <td> </td> <td> </td> </tr> </table>	Correct (✓)	Wrong (x)	✓	X				
Correct (✓)	Wrong (x)								
✓	X								
Q16	5								

SECTION C

Q17	$18 \div 6 = 3$
Q18	$2 \times 9 = 18$
Q19 (a)	$2 \times 10 = 20$
Q19 (b)	$5 \div 1 = 5$



HENRY PARK PRIMARY SCHOOL
2024 PRIMARY 2
MATHEMATICS QUIZ 3

Name: _____ (\) Date: _____

Class: Primary 2 _____ Parent's Signature: _____

Section A: Multiple-choice Questions

Choose the correct answer and write its number (1, 2, 3 or 4) in the brackets provided.

1. $7 \times 4 =$ _____

- 1) 11
- 2) 24
- 3) 3
- 4) 28

()

2. $27 \div 3 =$?

- 1) 8
- 2) 9
- 3) 24
- 4) 30

()

3. 5×4 is _____ more than 2×4 .

- 1) 8
- 2) 12
- 3) 3
- 4) 20


()

4. Sam receives a sticker for every 4 questions that he answers correctly. He received 8 stickers, how many questions did he answer correctly?

- 1) 12
- 2) 2
- 3) 32
- 4) 34

()

5. Look at the picture below.



Which of the following does **not** describe the picture?

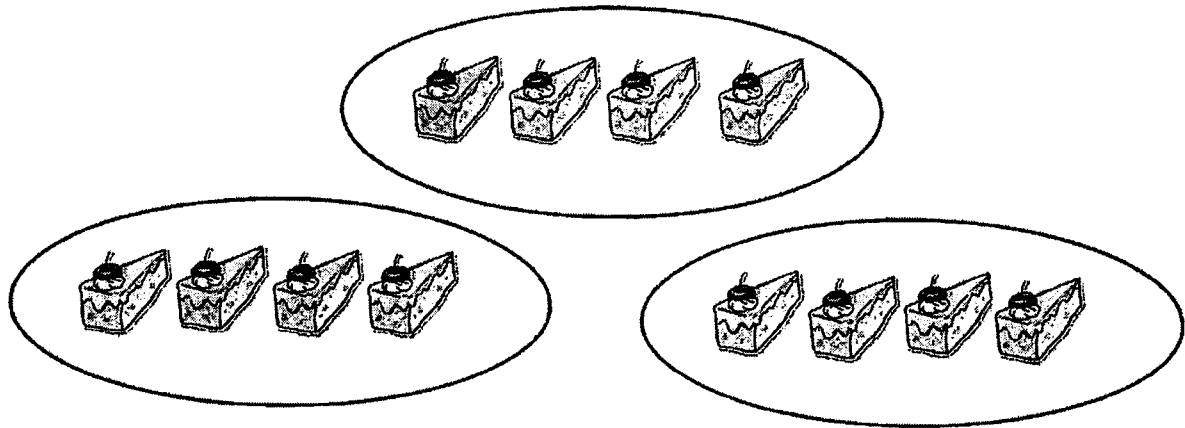
- 1) $7 + 7 + 7$
- 2) 7×3
- 3) 3 groups of 7
- 4) $3 + 3 + 3 + 3 + 3$

()

Section B: Open-ended Questions

Fill in the correct answers in the spaces provided.

6. Fill in the boxes to complete the multiplication equation based on the picture below.



$$\square \times \square = \square$$

7. Cupboard A has a mass of 254 kg. It is 118 kg lighter than Cupboard B. What is the mass of Cupboard B?

kg

8. Emma wanted to buy a storybook that costs \$18. She saved \$3 a day starting from Monday. On which day will she be able to buy the book?



\$18

Days of the Week

Monday

Tuesday

Wednesday

Thursday

Friday

Saturday

Sunday

9. Molly bought 20 marbles. She kept 12 marbles for herself and packed the rest equally into 4 bags. For each of the statements below, put a tick (✓) in the box to indicate if it is true or false.

	Statements	True	False
(a)	Molly packed 8 marbles.		
(b)	There was an odd number of marbles in each bag.		

Section C: Problem Sums

Do these sums carefully. Write all your equations, workings and final answers clearly in the spaces provided. You may use models to help you.

10. There are 320 students in Primary Two.
146 of them are boys and the rest are girls.
(a) How many girls are there in Primary Two?

Working

There are _____ girls in Primary 2.

- (b) How many more girls than boys are there in Primary Two?

Working

There are _____ more girls than boys in Primary Two.

11. Mrs Wong sold 430 cupcakes at a food fair.
She sold 145 more cupcakes than Mdm Lee.
How many cupcakes did they sell in all?

Working

They sold _____ cupcakes in all.

12. Danny had some candies.
His mother bought him another 150 candies.
He gave 60 candies to his friend.
He had 310 candies left.
How many candies did he have at first?

Working

He had _____ candies at first.

13. Ravi bought some stickers and 4 cards.
He had 8 stickers left after pasting 9 stickers on
each of the 4 cards.
How many stickers did he buy at first?

Working

Ravi bought _____ stickers at first.

14. Jill had 8 boxes of toys.
There were 3 toys in each box.
Jill gave all the toys to 6 of her friends.
Each friend received the same number of toys.
How many toys did each of her friend receive?

Working

Each friend received _____ toys .

--- END OF PAPER ---

SCHOOL : HENRY PARK PRIMARY SCHOOL
 LEVEL : PRIMARY 2
 SUBJECT : MATHEMATICS
 TERM : QUIZ 3

SECTION A

Q1	Q2	Q3	Q4	Q5
4	2	2	3	4

SECTION B

Q6	$3 \times 4 = 12$							
Q7	$254 + 118 = 372$							
Q8	Saturday							
Q9	<table border="1"> <thead> <tr> <th>True</th> <th>False</th> </tr> </thead> <tbody> <tr> <td style="text-align: center;">✓</td> <td></td> </tr> <tr> <td></td> <td style="text-align: center;">✓</td> </tr> </tbody> </table>		True	False	✓			✓
True	False							
✓								
	✓							

SECTION C

Q10 (a)	$320 - 146 = 174$
Q10 (b)	$174 - 146 = 28$
Q11	$430 - 145 = 285$ $430 + 285 = 715$
Q12	$310 + 60 = 370$ $370 - 150 = 220$
Q13	$9 \times 4 = 36$ $36 + 8 = 44$
Q14	$8 \times 3 = 24$ $24 \div 6 = 4$



**HENRY PARK PRIMARY SCHOOL
2024 PRIMARY 2
MATHEMATICS QUIZ 4**

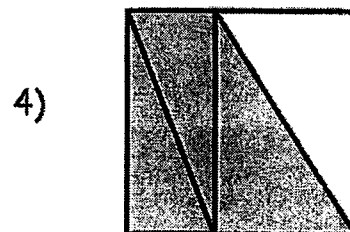



Name: _____ Date: _____

Class: Primary 2 _____

Section A: Multiple-choice Questions

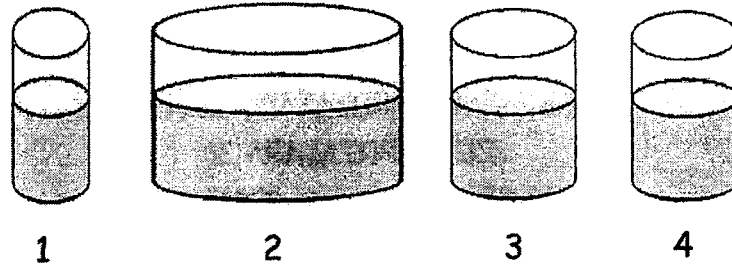
Choose the correct answer and write its number (1, 2, 3 or 4) in the brackets provided.

1. Which of the following shows that $\frac{3}{4}$ of the figure is shaded?



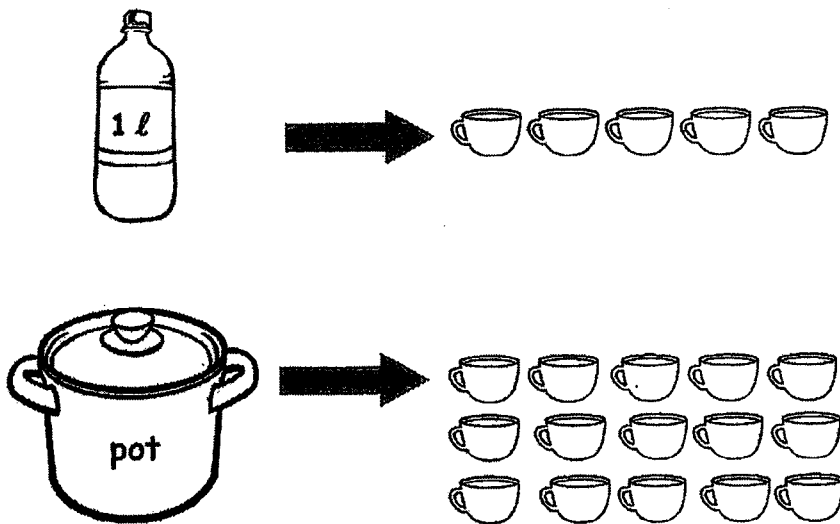
()

2. Which container holds the greatest volume of water?



()

3. How many litres of water can the pot hold?



- 1) 5
- 2) 15
- 3) 3
- 4) 4

()

4. Miss Lee showed the students a fraction bar.

The shaded parts were greater than $\frac{3}{7}$ but smaller than $\frac{6}{7}$.

Which fraction bar below did Miss Lee show?



()

5. A cake was cut into 12 equal slices.
Jane ate 4 slices and her brother ate 3 slices.
What fraction of the cake was left?

1) $\frac{3}{12}$

2) $\frac{4}{12}$

3) $\frac{5}{12}$

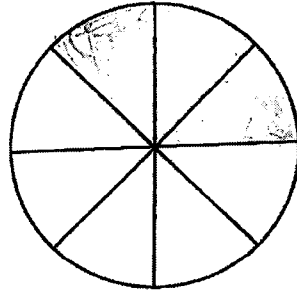
4) $\frac{7}{12}$

)

Section B: Open-ended Questions

Fill in the correct answers in the spaces provided.

6. The figure below is divided into eight equal parts. Shade $\frac{3}{8}$ of the figure.


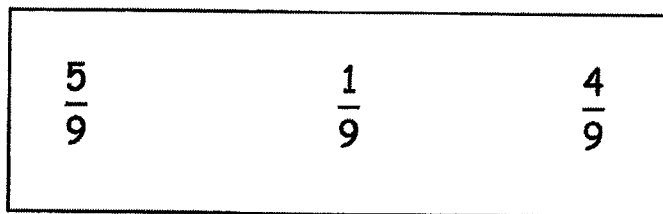


Write the missing fractions in the boxes.

7. $\frac{3}{9} + \frac{5}{9} = \boxed{}$


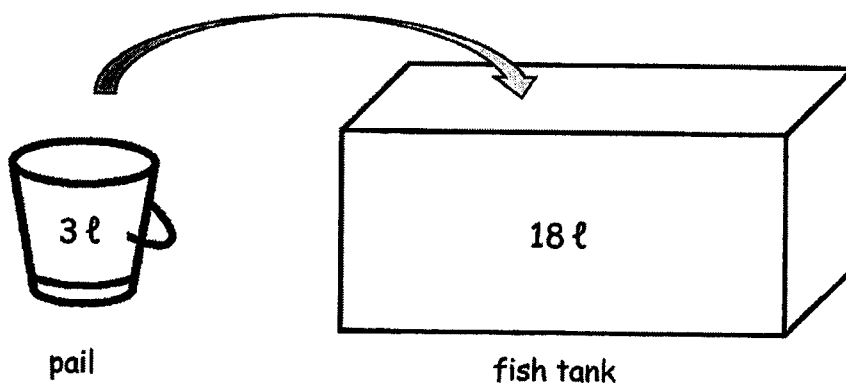
8. $\frac{2}{7} + \boxed{} = 1$

9. Arrange the fractions in order, beginning with the largest.




largest

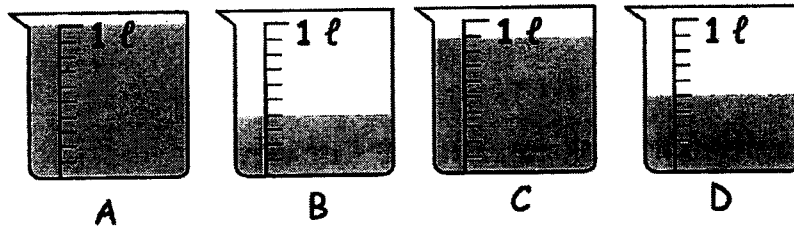
10. The empty fish tank can hold 18 ℓ of water.
Sally filled it with water using a 3-litre pail.
How many pails of water did Sally use to fill up the fish tank completely?



11. The figure below is made up of 3 similar squares. What fraction of the figure is not shaded?



12. Beakers A, B, C and D are of the same size.



(a) Beaker contains the least amount of water.

(b) Arrange the beakers A, B, C and D in order.
Begin with the beaker that has the largest volume of water.

, , ,
largest

13. Circle three fractions that add up to 1 whole.

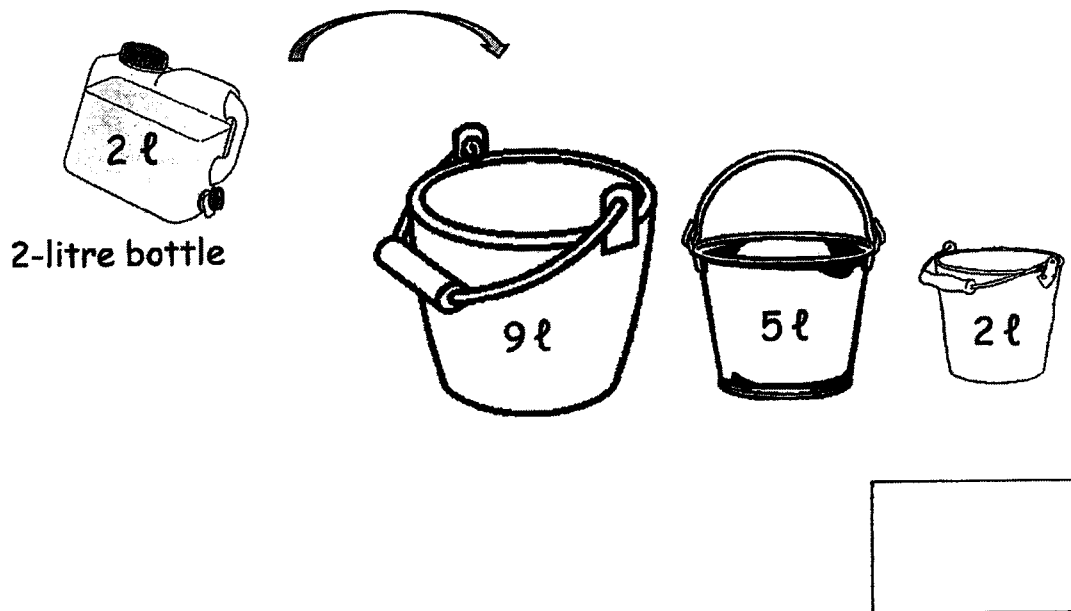
$\frac{3}{11}$	$\frac{8}{11}$	$\frac{7}{11}$	$\frac{6}{11}$	$\frac{2}{11}$
----------------	----------------	----------------	----------------	----------------

14. Arrange the following fractions in order.
Begin with the smallest fraction.

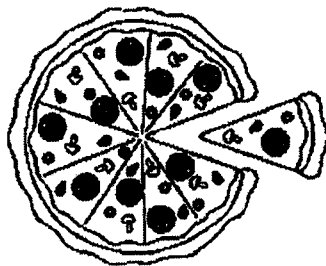
$\frac{1}{5}$	$\frac{1}{7}$	$\frac{1}{3}$	$\frac{1}{9}$
---------------	---------------	---------------	---------------

smallest	,	,	,

15. How many 2-litre bottles are needed to fill up all the three pails completely?



16. Tom's mother bought a pizza for dinner.
She gave half the pizza to their neighbour.
Then she and Tom ate $\frac{1}{10}$ of the pizza each.
What fraction of the pizza is left?




Section C: Problem Sums

Do these sums carefully. Write all your equations, workings and final answers clearly in the spaces provided. You may use models to help you.

17. Aunt Tinah mixed 2ℓ of fruit syrup with 10ℓ of water to make fruit punch. She then poured all the fruit punch equally into 6 jars. How many litres of fruit punch are there in each jar?

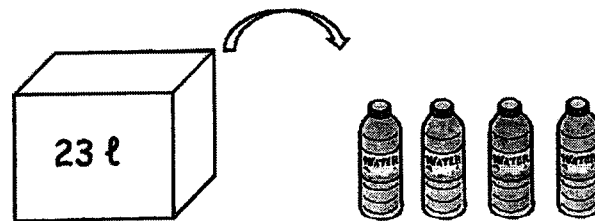
Working



There are _____ of fruit punch in each jar.

18. A container had 23 ℓ of water.
Jen filled up 4 identical bottles equally with the water from the container. In the end, there was 3 ℓ of water left in the container.
How many litres of water was there in each bottle?

Working



There was _____ of water in each bottle.

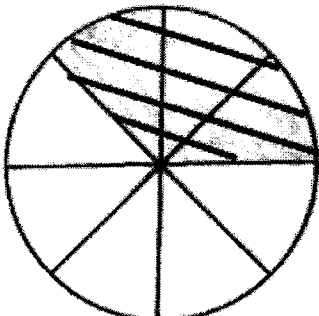
--- END OF PAPER ---

SCHOOL : HENRY PARK PRIMARY SCHOOL
 LEVEL : PRIMARY 2
 SUBJECT : MATHEMATICS
 TERM : QUIZ 4

SECTION A

Q1	Q2	Q3	Q4	Q5
3	2	3	4	3

SECTION B

Q6	
Q7	$\frac{8}{9}$
Q8	$\frac{5}{7}$
Q9	$\frac{5}{9}, \frac{4}{9}, \frac{1}{9}$
Q10	6
Q11	$\frac{1}{6}$
Q12 (a)	B
Q12 (b)	Beaker A, Beaker C, Beaker D, Beaker B
Q13	$\frac{3}{11}, \frac{6}{11}, \frac{2}{11}$
Q14	$\frac{1}{9}, \frac{1}{7}, \frac{1}{5}, \frac{1}{3}$
Q15	8
Q16	$\frac{3}{10}$
Q17	$2 + 10 = 12$ $12 \div 6 = 2$
Q18	$23 - 3 = 20$ $20 \div 4 = 5$

