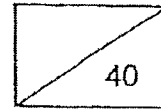


CHIJ ST NICHOLAS GIRLS' SCHOOL  
 PRIMARY 2  
 TERM 3 REVISION PAPER  
 MATHEMATICS



Name: \_\_\_\_\_ ( )

Duration: 50 minutes

Class: Primary 2 \_\_\_\_\_

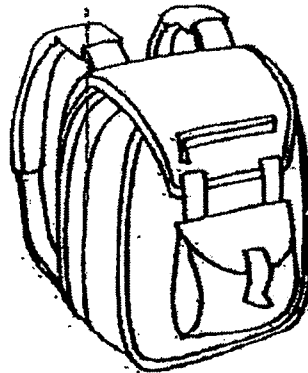
Date: \_\_\_\_\_

Parent's Signature: \_\_\_\_\_

Section A (6 x 1 mark = 6 marks)

Read each question carefully and choose the correct answer.  
 Write the number of the correct answer (1, 2, 3 or 4) in the brackets provided.

1. The mass of the school bag is about \_\_\_\_\_.

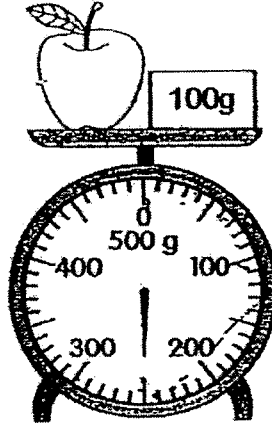


- (1) 3 g  
 (2) 30 g  
 (3) 3 kg  
 (4) 30 kg

( )

Working


2. What is the mass of the apple shown below?



- (1) 100 g  
 (2) 150 g  
 (3) 250 g  
 (4) 350 g

( )

3. What is the amount of money shown below?

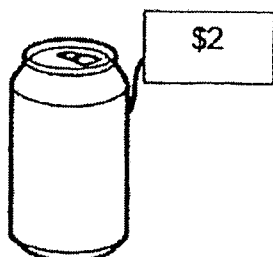


- (1) \$1.60  
 (2) \$1.90  
 (3) \$160  
 (4) \$190

( )

Working

4. Ben bought 4 cans of fruit juice.  
How much did he pay altogether?



- (1) \$8  
(2) \$6  
(3) \$5  
(4) \$4

( )

5. The eraser below has \_\_\_\_\_ flat surfaces.

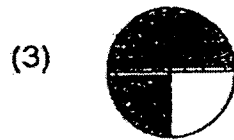
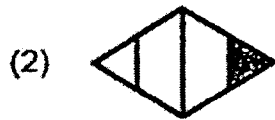


- (1) 6  
(2) 2  
(3) 3  
(4) 4

( )

Working

6. Which of the following shows  $\frac{1}{4}$  of the figure shaded.




( )

Working

Section B (24 marks)

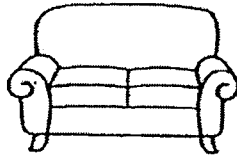
Questions 7 to 10 carry 1 mark each.  
Questions 11 to 20 carry 2 marks each.  
Write your answers in the spaces provided.  
Show all number equations and workings clearly.

7. Study the diagram below.  
Fill in the blank with "more" or "less".




The pumpkin is \_\_\_\_\_ than 4 kg.


8. Compare the prices of the 3 items below.



Sofa  
\$343.60



Shelf  
\$200.45



Dining table  
\$334.90

The \_\_\_\_\_ is the most expensive item.

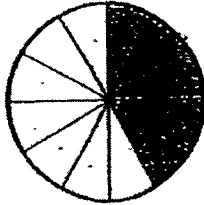
Working

9. Simpson drew a figure below with straight lines and curves.



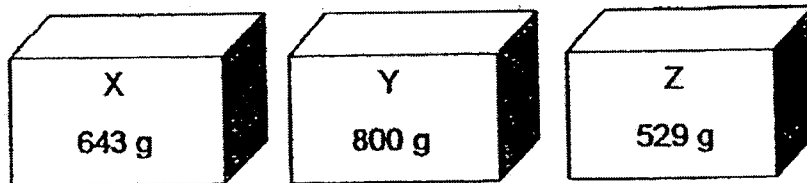
The figure has \_\_\_\_\_ straight lines and \_\_\_\_\_ curves.

10. What fraction of the figure below is shaded?



\_\_\_\_\_ of the figure is shaded.

11. Arrange the objects below in order beginning with the lightest. Write the letters (X, Y, Z) in the correct order.



Answer: \_\_\_\_\_,  
(lightest)

Working

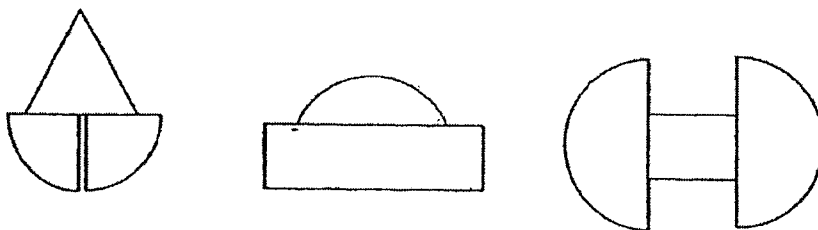
12 Write the amount in dollars or cents.

(a) \$3 = \_\_\_\_\_ ¢

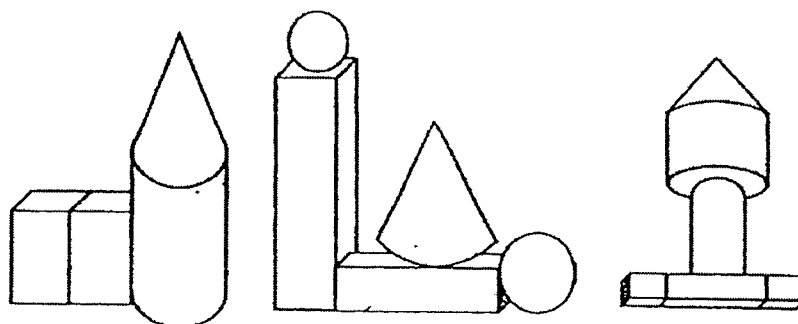
(b) 5¢ = \$ \_\_\_\_\_

13. This figure is made up of 2 semicircles and 1 rectangle.  
Circle the correct figure.

(a)



(b) This figure is made up of 1 cone, 1 cylinder and 2 cuboids.  
Circle the correct figure.



Working

14. Match the fractions that make 1 whole.

$$\frac{4}{5} \cdot$$

$$\cdot \frac{1}{4}$$

$$\cdot \frac{7}{12}$$

$$\frac{5}{12} \cdot$$

$$\cdot \frac{1}{5}$$

$$\cdot \frac{6}{12}$$

Working

- 15 (a) Circle the greater fraction.

$$\frac{1}{9}$$

$$\frac{1}{4}$$

- (b) Circle the smaller fraction.

$$\frac{3}{6}$$

$$\frac{4}{6}$$

16. Arrange the fractions in order.  
Begin with the greatest.

$$\frac{1}{7}, \quad \frac{3}{7}, \quad \frac{1}{11}$$

Ans: \_\_\_\_\_ , \_\_\_\_\_ , \_\_\_\_\_  
(greatest)



17(a)  $\frac{1}{5} + \frac{3}{5} = \square$

(b)  $1 - \frac{3}{10} = \square$

Working

18. The mass of each  is 10 gram.

Working



The mass of the cake is \_\_\_\_\_ g heavy.

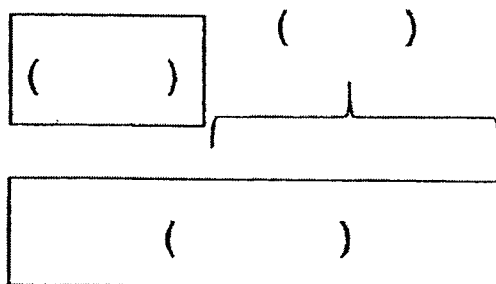
19. 350 children were at the zoo.  
105 of them were girls and the rest were boys.

Working

(a) How many more boys than girls were there?


Answer: \_\_\_\_\_

- (b) Complete the model.  
Fill in the blanks with the correct numbers.

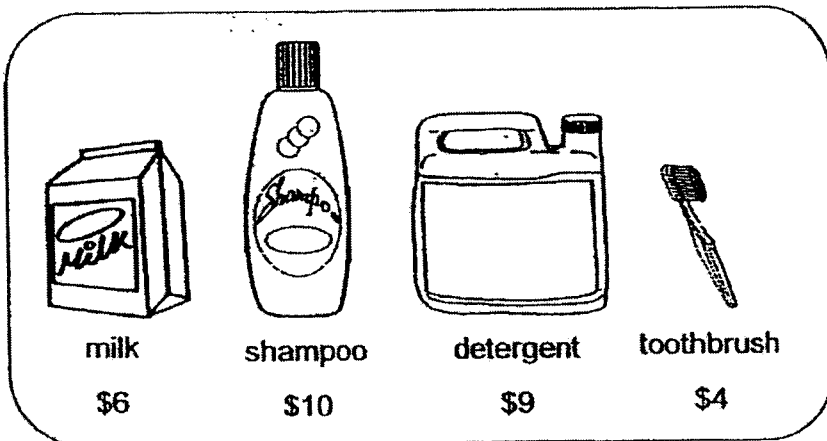


20. Sam had the following coins and notes in his wallet.

Working



He went to the supermarket and bought two items.  
 He had \$4 left.  
 Which two items did he buy?



He bought \_\_\_\_\_ and \_\_\_\_\_.

Section C (10 Marks)

Questions 21 and 22 carry 3 marks each.

Question 23 carries 4 marks.

Write your answers in the spaces provided.

Show all number equations and workings clearly.

21. Brandon had 123 marbles. After he gave away 86 marbles, he had the same number of marbles as David. How many marbles did they have altogether in the end?

Working

Answer: \_\_\_\_\_

22. Ziyang bought 7 handkerchiefs.  
The cost of each handkerchief was the same.  
He paid the cashier \$50 and received a change of \$29.

(a) How much did the 7 handkerchiefs cost?

Answer: \_\_\_\_\_

(b) How much did each handkerchief cost?

Answer: \_\_\_\_\_

Working

TERM 3 REVISION PAPERSection A

Q1	Q2	Q3	Q4	Q5	Q6
3	2	2	1	1	4

Section B

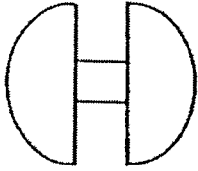
- 7) The pumpkin is less than 4 kg.
- 8) The sofa is the most expensive item.
- 9) The figure has 3 straight lines and 2 curves.
- 10)  $\frac{5}{12}$
- 11) Z , X , Y



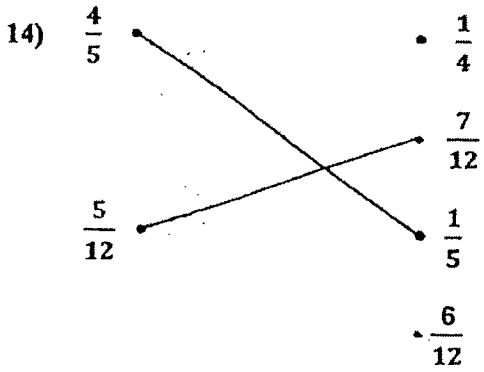
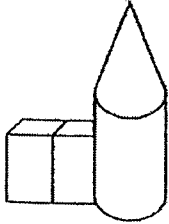
12) (a)  $\$3 = \underline{300} \text{¢}$

(b)  $5 \text{¢} = \$0.05$

13) (a)



(b)



15) (a)  $\frac{1}{4}$

(b)  $\frac{3}{6}$

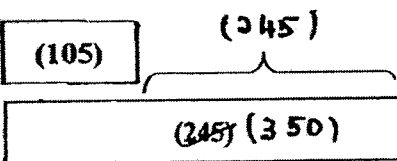
16)  $\frac{3}{7}$  ,  $\frac{1}{7}$  ,  $\frac{1}{11}$

17) (a)  $\frac{4}{5}$

(b)  $\frac{7}{10}$

18) The mass of the cake is 80 g heavy.

19) (a) 140

(b) 

20) He bought shampoo and toothbrush.

Section C

21)  $123 - 86 = 37$   
 $37 + 37 = 74$

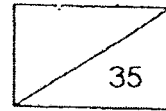
They had 74 marbles altogether in the end.

22) (a)  $50 - 29 = 21$   
 7 handkerchiefs cost \$21.

(b)  $21 \div 7 = 3$   
 Each handkerchief cost \$3.

End

CHIJ ST NICHOLAS GIRLS' SCHOOL  
 PRIMARY 2  
 TERM 2 REVISION PAPER  
 MATHEMATICS



Name: \_\_\_\_\_ ( )

Duration: 45 minutes

Class: Primary 2 \_\_\_\_\_

Date: \_\_\_\_\_

Parent's Signature: \_\_\_\_\_

**Section A (6 x 1 mark = 5 marks)**

Read each question carefully and choose the correct answer.

Write the number of the correct answer (1, 2, 3 or 4) in the brackets provided.

1. How many fives are there in 2 groups of 10?

(1) 25

(2) 20

(3) 5

(4) 4

( )

Working

2.  $6 \times 4$  is the same as \_\_\_\_\_  $\times 3$ .

(1) 7

(2) 8

(3) 24

(4) 27

( )

3. Which of the following is the same as  $3 + 3 + 3 + 3 + 3 + 3 + 3$ ?

Working

(1)  $3 \times 3$

(2)  $7 + 3$

(3) 7 groups of 3

(4) 24

( )

4. What is the missing sign in the box?

$$7 \times 5 = 5 \times 5 \quad \square \quad 2 \times 5$$

(1) +

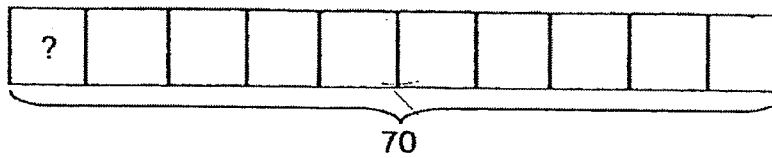
(2) -

(3)  $\times$

(4)  $\div$

( )

5. Look at the model below. Find the answer.



- (1) 7  
 (2) 8  
 (3) 63  
 (4) 77

( )

6. Mr Mok wants to divide 18 pupils equally into smaller groups. Which of the following groupings is not possible?

- (1) 2 groups of 9  
 (2) 3 groups of 6  
 (3) 6 groups of 3  
 (4) 8 groups of 2

( )

Working

**Section B (15 marks)**

Questions 7 to 9 carry 1 mark each.

Questions 10 to 17 carry 2 marks each.

Write your answers in the spaces provided.

Show all number equations and workings clearly.

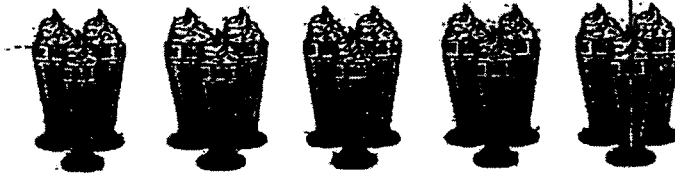
7. Multiply 4 by 8.

The answer is \_\_\_\_\_.

Answer: \_\_\_\_\_

Working


8. Write one multiplication equation based on the picture below.


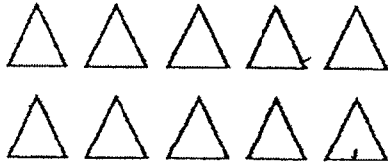


$$\square \circ \square = \square$$

9. Fill in the blank with 'cm' or 'm'.

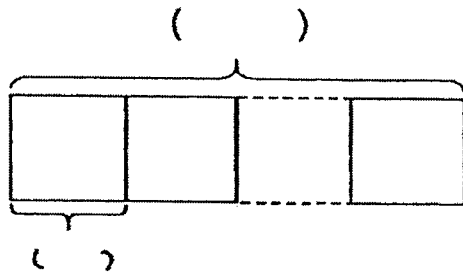
The height of a box of tissue is about 8

10. How many more  are needed to show 7 twos?  
Draw your answer in the box.



Working

11. Mrs Pang bought 40 cookies from a bakery.  
The cookies are packed in boxes of 5.  
Use the information given above to complete the model below.



12. Circle the cards below which have the same value as 16.

$$2 \times 8$$

4 sixes

$$32 \div 4$$

4 groups of 4

13. Leo had 17 tennis balls and Ziyang had 11 tennis balls. They put all their tennis balls equally into 4 boxes. How many tennis balls were there in each box?

Answer: \_\_\_\_\_


14. I am a 2-digit number.  
I am greater than 25 but smaller than 30.  
I can be found in the multiplication table of 3.  
What number am I?

Answer: \_\_\_\_\_

Working

15. Celest saved 50 coins in a piggy bank. She took out some coins and grouped them into stacks of 10 as shown below.

Working



How many coins were left in the coin bank?

Answer: \_\_\_\_\_


16. Study the table below carefully.

Names of Boys	Height (cm)
Ethan	132
Hamid	107
Jiaming	119
Krishnan	125

Find the difference in height between the tallest boy and the shortest boy.

Answer: \_\_\_\_\_ cm

17. Study the diagram below.  
Answer questions 17(a) and 17(b).



- (a) The length of the pencil is about \_\_\_\_\_ cm.

Answer: \_\_\_\_\_

- (b) The sharpener is \_\_\_\_\_ cm shorter than the pencil.

Answer: \_\_\_\_\_

Working

**Section C (10 Marks)**

Questions 18 and 19 carry 3 marks each.

Question 20 carries 4 marks.

Write your answers in the spaces provided.

Show all number equations and workings clearly.

- 18. Leah has a ribbon that is 200 cm long.  
She uses 65 cm to tie a present and 32 cm to tie a box.  
What is the length of ribbon left?

Working

Answer: \_\_\_\_\_

- 19. Ariana shared 27 lollipops with her 2 sisters.  
How many lollipops did each child get??

Answer: \_\_\_\_\_

20. Mdm Nijah bought 3 bags of apples.  
There were 10 apples in each bag.

(a) How many apples did she buy?

Answer: \_\_\_\_\_

Mdm Nijah put all the apples equally on 5 plates.

(b) How apples were there on each plate?

Answer: \_\_\_\_\_

Working

- END OF PAPER -

# ANSWER KEY

LEVEL : PRIMARY 2  
 SCHOOL : CHIJ ST NICHOLAS GIRLS'  
 SUBJECT : MATHEMATICS

## TERM 2 REVISION PAPER

### Section A

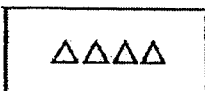
Q1	Q2	Q3	Q4	Q5	Q6
4	2	3	1	1	4

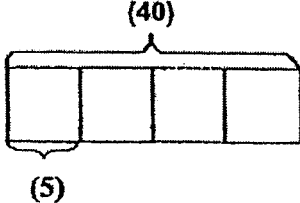
### Section B


7) 32

8)  $5 \times 3 = 15$

9) The height of a box of tissue is about 8 cm.

10) 

11) 

12) 

13) 7 tennis balls

14) 27

- 15) 10 coins  
16) 25 cm  
17) (a) 11 cm  
(b) 8 cm

**Section C**

- 18)  $200 - 65 - 32 = 103$   
The length of ribbon left is 103 cm.
- 19)  $27 \div 3 = 9$   
Each child had 9 lollipops.
- 20) (a)  $3 \times 10 = 30$   
Mdm Nijah bought 30 apples.
- (b)  $30 \div 5 = 6$   
There were 6 apples on each plate.