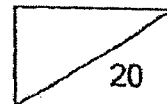


Nan Hua Primary School  
Primary 2 Mathematics  
Term 1 Review (Unit 1 – 2)

Name: \_\_\_\_\_ ( )      Class: Primary 2 ( )

Date: \_\_\_\_\_

Marks:



Duration: 30 minutes

Parent's Signature: \_\_\_\_\_

**A. Fill in the boxes with the correct answers. (1 m each)**

1. Write three hundred and eighty-nine in numerals.

2.  $200 + \boxed{\phantom{00}}$  tens + 15 ones = 275

3. Arrange these numbers in order.  
Begin with the smallest number.

255 ,      172 ,      249

,  ,

smallest

4. What number is 10 less than 506?

The number is  .

5.  $734 + 142 = \boxed{\phantom{000}}$

6.  $877 - 406 = \square$

7.  $458 + 293 = \square$

8.  $535 - 189 = \square$

9. You are given the three number cards below.



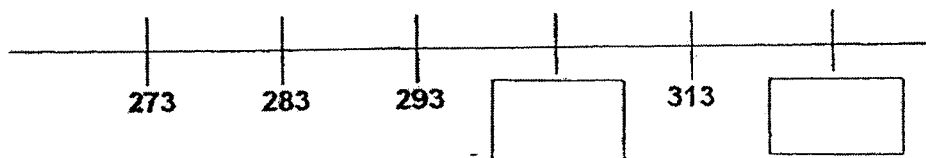
Arrange these cards to form the greatest number that is less than 500.

The greatest number is

10. There are  even numbers from 135 to 147.

**B. Fill in the boxes with the correct answers. (2 m each)**

11. What are the 2 missing numbers?



12.   $- 339 = 474$

- C. Read the following word problems carefully.  
Show your equations, workings and models clearly.  
Complete the answer statements. (3 m each)

13. Darren has 135 stickers.  
Mary gives him another 48 stickers.  
How many stickers does Darren have now?

Darren has  stickers now.

14. Andy has 546 marbles.  
He has 167 more marbles than Jane.  
How many marbles does Jane have?



Jane has  marbles.




Nan Hua Primary School  
Primary 2 Mathematics Worksheet  
Term 2 Test - Units 5 and 6

Name: \_\_\_\_\_ ( )      Class: Primary 2 ( )

Date: 8 May 2018

Marks:



Parent's Signature: \_\_\_\_\_

**A. Read the instructions and answer the questions carefully.**  
**(1 mark each)**

1.  $6 \times 2 =$

2.  $5 \times 10 =$

3.  $7 \times 5 =$


4.  $20 \div 5 =$

5.  $80 \div 10 =$

6.  $3 \times 5$  is the same as   $\times 3$

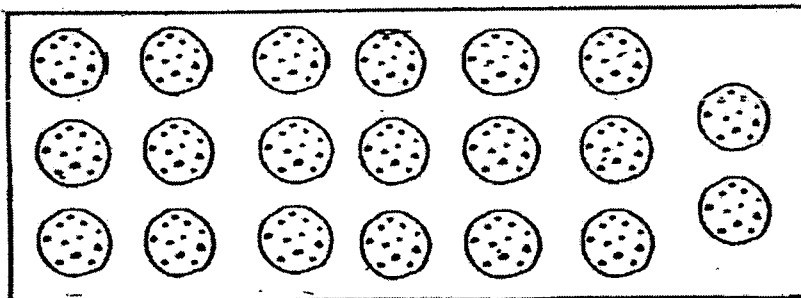
7.  $8 + 8 + 8 + 8 + 8$  is the same as  groups of 8.

8. Share 12 bananas equally between 2 monkeys.




$$12 \div 2 = \square$$

9. Circle the cookies to show groups of 10.



10. Write a multiplication equation to show the total number of bees in the pictures below.



$$\square \times \bigcirc = \square$$

B. Fill in the boxes with the correct answers. (2 marks each)

11. Bala saves \$2 each day.

How much will he save in 7 days?


$$\boxed{\phantom{00}} \times \boxed{\phantom{00}} = \boxed{\phantom{00}}$$

He saves \$  $\boxed{\phantom{00}}$  in 7 days.

12. The picture below shows 5 groups of butterflies.

Write a **division equation** for the picture below and

complete the sentence.



$$\boxed{\phantom{00}} \div \boxed{\phantom{00}} = \boxed{\phantom{00}}$$

Each group has  $\boxed{\phantom{00}}$  butterflies.

**Read the following word problems carefully.**  
**Show your equations, workings and models clearly.**  
**Complete the answer statements. (3 marks each)**

13. There are 6 baskets.

Each basket has 5 watermelons.

How many watermelons are there in all?

There are \_\_\_\_\_ watermelons in all.

14. 40 stamps are shared equally among 4 friends.

How many stamps did each friend receive?

Each of them received \_\_\_\_\_ stamps.

## ANSWER KEY

LEVEL : PRIMARY 2  
SCHOOL : NAN HUA PRIMARY SCHOOL  
SUBJECT : MATHEMATICS  
TERM : TERM 1 REVIEW , TERM 2 TEST

## TERM 1 REVIEW

A

Q1) 389

Q2) 6

Q3) 172 , 249 , 255

smallest

Q4) 496

Q5) 876

Q6) 471

Q7) 751

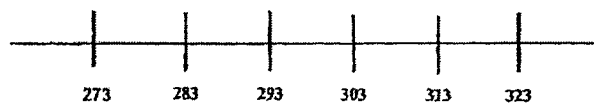
Q8) 346

Q9) 453

Q10) 6

B

Q11)



Q12) 813

C

Q13) ( 183 )

$$135 + 48 = 183$$

Q14) (379)

$$546 - 167 = 379$$

**TERM 2 TEST**

Q1)  $6 \times 2 = 12$

Q2)  $5 \times 10 = 50$

Q3)  $7 \times 5 = 35$

Q4)  $20 \div 5 = 4$

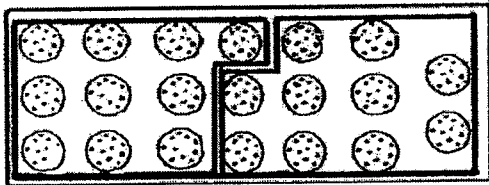
Q5)  $80 \div 10 = 8$

Q6)  $3 \times 5$  is the same as  $5 \times 3$

Q7)  $8 + 8 + 8 + 8 + 8$  is the same as 5 groups of 8.

Q8)  $12 \div 2 = 6$

Q9)



Q10)  $2 \times 7 = 14$

B

Q11)  $2 \times 7 = 14$

Q12)  $15 \div 5 = 3$

Q13) (30)

$$6 \times 5 = 30$$

Q14) (10)

$$40 \div 4 = 10$$

**THE END**