

PEI HWA PRESBYTERIAN PRIMARY SCHOOL
SEMESTRAL ASSESSMENT 2

PRIMARY 2
MATHEMATICS PAPER

Name: _____ ()

Class: 2 Respect ()

Parent's Signature

Total time: 1h-30 min

INSTRUCTIONS TO CANDIDATES

1. Write your Name, Class and Register No. in the spaces provided above.
2. DO NOT turn over this page until you are told to do so.
3. Follow all instructions carefully.
4. Answer all questions.
5. Write all your answers in this booklet.

Marks (Section A)	10
Marks (Section B)	24
Marks (Section C)	16
Total Marks (Section A & B & C)	50

Section A (10 questions x 1 mark each)

Choose the correct answers (1, 2, 3 or 4) and write them in the brackets provided.

1 In 319, the value of the digit 1 is _____.

(1) 1

(2) 10


(3) 100

(4) 1000

()

2 Study the picture given below.

Which one of the following number sentences is not correct?



(1) 6 groups of 2

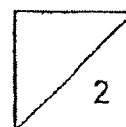
(2) 6 twos

(3) 6×2

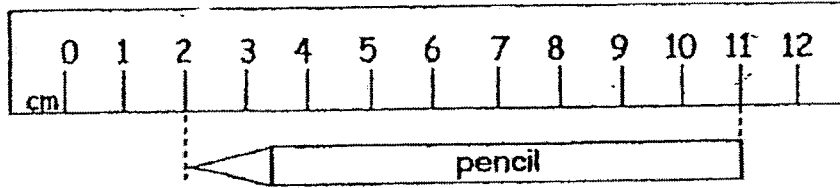
(4) $6 + 2$

()

1



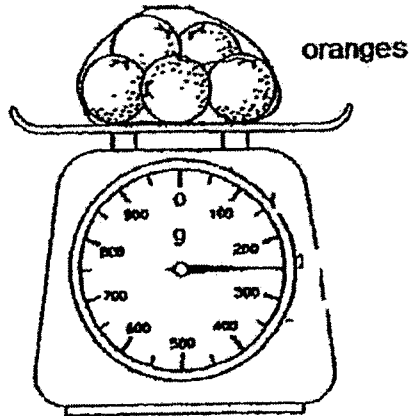
3 Study the picture given below.



The length of the pencil is _____ cm long.

- (1) 9
- (2) 2
- (3) 10
- (4) 11

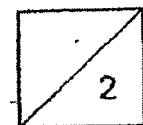
4 Look at the picture below.



The mass of the packet of oranges is _____ g.

- (1) 210
- (2) 220
- (3) 250
- (4) 260

2




5 580¢ is the same as _____

- (1) \$0.58
- (2) \$5.08
- (3) \$5.80
- (4) \$58.00

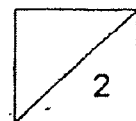
()

6 The solid below is a _____



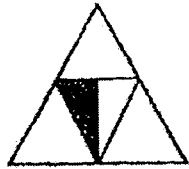
- (1) cuboid
- (2) cube
- (3) cone
- (4) cylinder

()




7 Which of the following shows that $\frac{1}{4}$ of the figure is shaded?


(1)




(2)



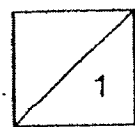
(3)



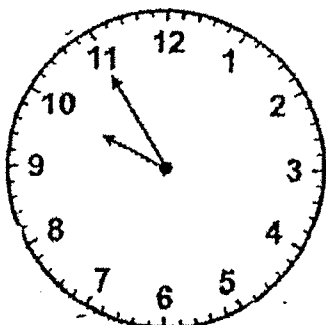
(4)



()



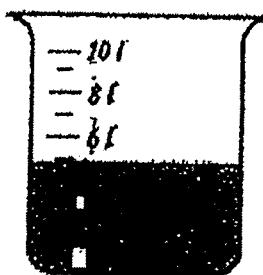
8 What is the time shown below?



- (1) 9.55
- (2) 10.11
- (3) 10.55
- (4) 11.10

()

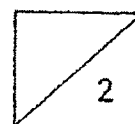
9 The volume of water in the beaker is _____ l.






- (1) 7
- (2) 6
- (3) 5
- (4) 4

()

5



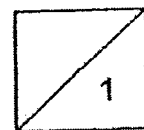
- 10 The picture graph below shows the number of cakes Julie sold from Monday to Wednesday.

Monday	
Tuesday	
Wednesday	

Each  stands for 3 cakes.

How many cakes did Julie sell on all three days?

- (1) 28
 (2) 21
 (3) 14
 (4) 7 ()




Section B

Questions 11 to 18 carry 1 mark each. Questions 19 to 26 carry 2 marks each.

Solve each of the following problems. Show all your workings and number equations clearly. Write the correct answer in the space provided.

11 Study the number pattern below.

What is the missing number?



Ans: _____

12 Study the picture below.

What is the missing number in the box?

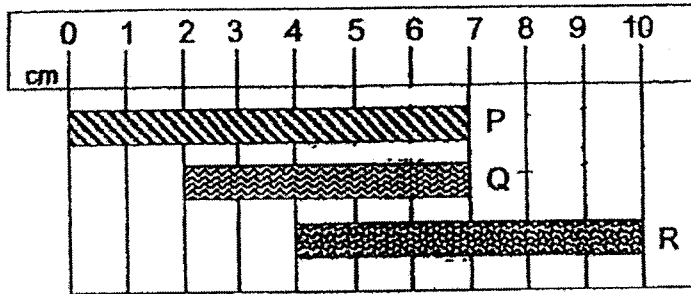


$$15 \div \square = 3$$

Ans: _____



13 The diagram below shows the length of three ribbons, P, Q and R.



Which ribbon is the longest?

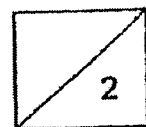
Ans: Ribbon _____

14 Study the picture below.


What is the mass of the pear?



Ans: _____ g

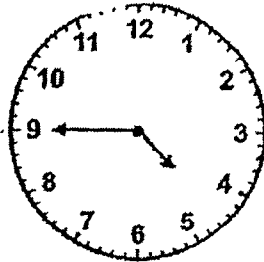


15 What is the total amount of money shown below?

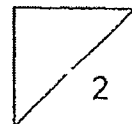


Ans: \$ _____

16 The clock below shows a time in the afternoon.
What is the time 30 minutes later?



Ans: _____ p.m.



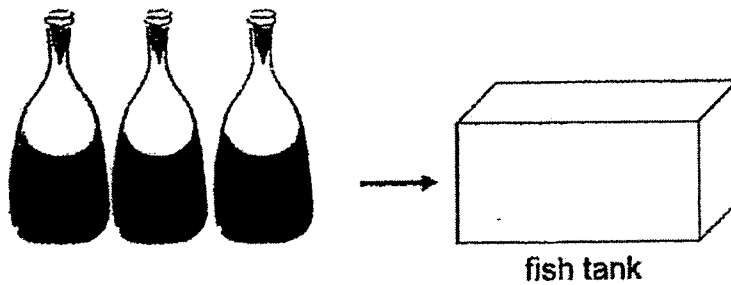
17 The table below shows the number of stickers collected by 4 girls.

●	● ● ●	● ●	● ● ● ●
Lauren	Molly	Norah	Olivia
Each ● stands for 10 stickers.			

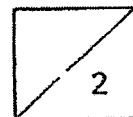
How many girls collected more than 20 stickers?

Ans: _____

18 Mrs Chan used three 2-litre bottles to fill the fish tank until it was full.
How much water could the fish tank hold?



Ans: _____ ℓ

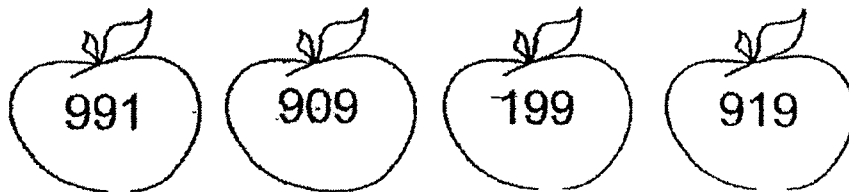


19 8 hundreds 15 tens and 13 ones = _____

Ans: _____

20 Look at the numbers shown below.

What is the difference between the greatest and the smallest number?



Ans: _____

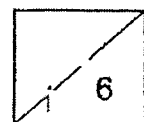
21 I am a 3-digit number between 300 and 400.

The digit in the tens place is 2.

The digit in the ones place is three times the digit in the tens place.

What number am I?

Ans: _____



- 22 Benny and his 3 friends ate 7 cookies each.
How many cookies did they eat altogether?

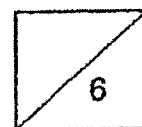
Ans: _____

- 23 A pen cost \$2.
Rena paid \$18 for a few similar pens.
How many pens did she buy?

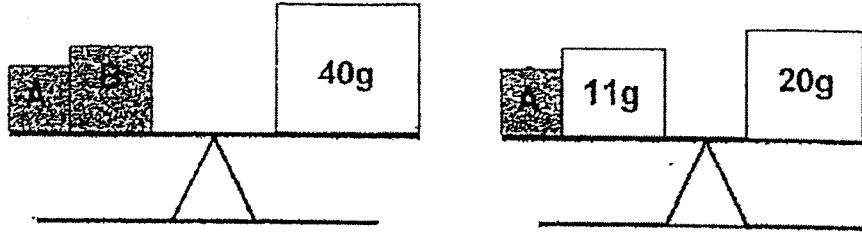
Ans: _____

24. Mary has 5 vases and 12 flowers.
She wants to put 3 flowers in each vase.
How many more flowers does she need?

Ans: _____

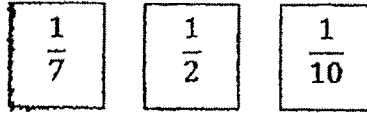


25 Study the diagram shown below.
What is the mass of B?

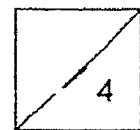


Ans: _____ g

26 Arrange the following fractions from the smallest to the greatest.



Smallest _____



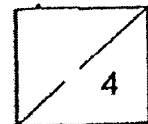
Section C (4 questions x 4 marks each)**Solve each of the following problems.****Show all your workings and number equations clearly.****Write your answer in the spaces provided.****Working**

- 27 There were 1000 people at a concert.
349 of them were children and the rest were adults.
(a) How many adults were at the concert?

_____ adults were at the concert.

- (b) How many more adults than children were at the concert?

There were _____ more adults than children
at the concert.



28 A book has 90 pages.

Jean reads 10 pages each day.

(a) How many days will Jean take to finish reading the book?

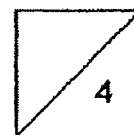
Jean will take _____ days to finish reading the book.

(b) Jean starts reading the book on Monday.

How many pages of the book would she have read by the end of Friday?

She would have read _____ pages of the book by Friday.

Working



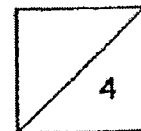
- 29 Jeremy had 800 marbles.
He put 256 marbles in Box A and 178 marbles in
Box B.
(a) How many marbles did he put in the two boxes?

Working

He put _____ marbles in the two boxes.

- (b) Jeremy then gave away the rest of the marbles to
Martin.
How many marbles did he give to Martin?

He gave _____ marbles to Martin.



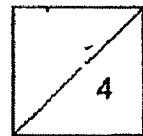
- 39 The mass of Parcel A is 450 g.
It is 285 g heavier than Parcel B.
(a) What is the mass of Parcel B?

Working

Parcel B is _____ g.

- (b) What is the total mass of Parcel A and Parcel B?

The total mass of Parcel A and Parcel B is _____ g.



————— END OF PAPER —————

ANSWER KEY

LEVEL : PRIMARY 2
SCHOOL : PEI HWA PRESBYTERIAN PRIMARY SCHOO
SUBJECT : MATHEMATICS
TERM : SA2

SECTION A

Q1	2	Q2	4	Q3	1	Q4	3	Q5	3
Q6	1	Q7	3	Q8	1	Q9	3	Q10	2

SECTION B

Q11) 730

Q12) 5

Q13) Ribbon P

Q14) 300g

Q15) \$21.75

Q16) 5.15 p.m

Q17) 2

Q18) 6

Q19) 963

Q20) 792

Q21) 326

Q22) 28

Q23) 9

Q24) 3

Q25) 31g

Q26) $\frac{1}{10}, \frac{1}{7}, \frac{1}{2}$

SECTION C

Q27a) $1000-349 = 651$

651 adults were at the concert.

Q27b) $651-349 = 302$

There were 302 more adults than children at the concert.

Q28a) $90 \div 10 = 9$

Jean will take 9 days to finish reading the book

Q28b) $5 \times 10 = 50$

She would have read 50 pages of the book by Friday.

Q29a) $256+178 = 434$

He put 434 marbles in the two boxes.

Q29b) $800-434 = 366$

He gave 366 marbles to Martin.

Q30a) $450-285 = 165$

Parcel B is 165g

Q30b) $165+450 = 615$

The total mass of Parcel A and Parcel B is 615g.

$\frac{2}{20/10}$

