



**ROSYTH SCHOOL
MATHEMATICS
PRIMARY 2
TERM 4 TOPICAL REVIEW (2)**

Name: _____

Class: Pr 2- _____ Register No. _____ Duration: 40 minutes

Date: _____

Parent's Signature: _____

Instructions to Pupils:

1. Do not open this booklet until you are told to do so.
2. Follow all instructions carefully.
3. This paper consists of 3 parts, Sections A, B and C.
4. ANSWER ALL THE QUESTIONS.
5. Check all answers carefully.

* This paper consists of 10 printed pages altogether (including the cover page).

This paper is not to be reproduced in part or whole without the permission of the Principal.

Your child is able to:	Question	Getting there	Got It!
<u>Length</u>			
• Measure length in centimetres	1		
<u>Time</u>			
• Tell time on a clock face	2		
• Tell time in hours and minutes after a given time	11		

<u>Fractions</u> <ul style="list-style-type: none"> • Recognise fraction as equal parts of a whole • Compare and order unit fractions • Compare and order like fractions • Find a fraction that combines with a given fraction to make a whole • Add like fractions 	3, 10 6 9 7 8		
<u>Shapes</u> <ul style="list-style-type: none"> • Identify straight lines and curve in a given 2-D figure 	4		
<u>Solids</u> <ul style="list-style-type: none"> • Complete patterns according to one or two attributes 	5		
<u>Volume</u> <ul style="list-style-type: none"> • Estimate and measure the volume of water in litres 	12		
<u>Graphs</u> <ul style="list-style-type: none"> • Read and interpret data from picture graphs with scales 	14		
<u>Word problems</u> <ul style="list-style-type: none"> • Solve two-steps word problems involving mass and money 	13, 15		
Teacher's Feedback (if any):			

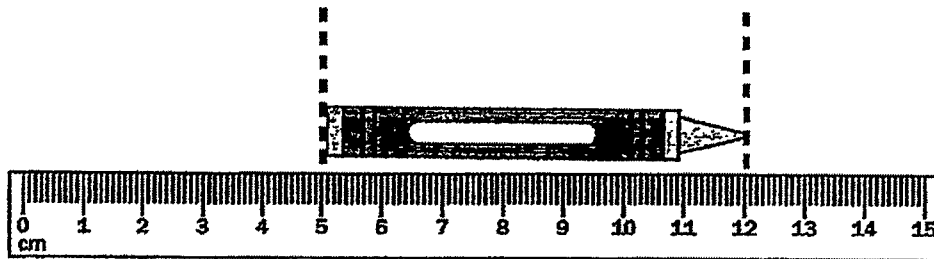
SECTION A

There are 6 questions in this section.

Read the questions carefully. Choose the correct answer.

Write its number 1, 2, 3 or 4 in the brackets provided.

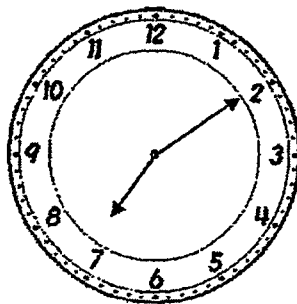
1. What is the length of the crayon?



- (1) 5 cm
 (2) 7 cm
 (3) 12 cm
 (4) 15 cm

()

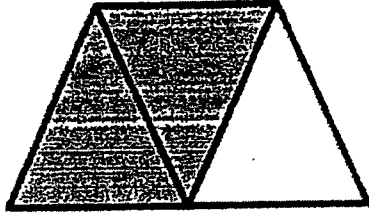
2. What is the time shown below?



- (1) 2.07
 (2) 2.35
 (3) 7.02
 (4) 7.10

()

3. What fraction of the figure is shaded?



(1) $\frac{1}{3}$

(2) $\frac{2}{3}$

(3) $\frac{3}{1}$

(4) $\frac{3}{2}$

()

4. Which of the following shapes is made up of curved lines only?

A	B	C	D

(1) A

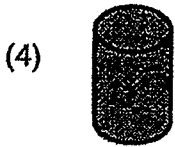
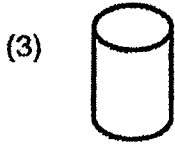
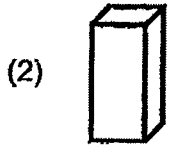
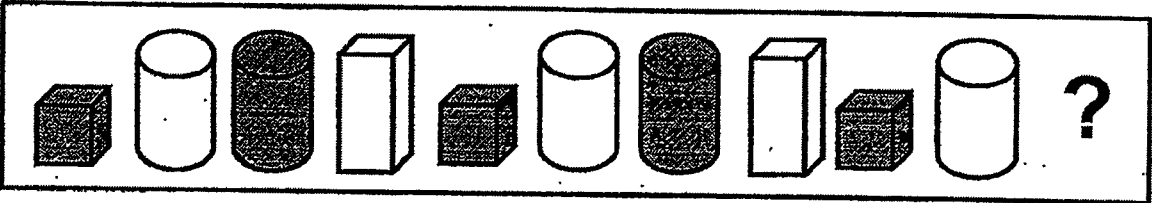
(2) B

(3) C

(4) D

()

5. Which solid comes next in the pattern?



()

6. Which of the following fractions is the smallest?

(1) $\frac{1}{2}$

(2) $\frac{1}{4}$

(3) $\frac{1}{6}$

(4) $\frac{1}{10}$

()

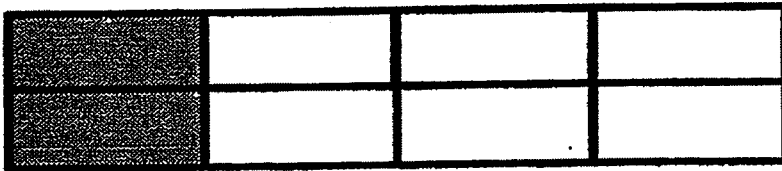
SECTION B

There are 6 questions in this section.

Read the questions carefully. Write your answers in the space provided.

Show all your workings clearly.

7.


 $\frac{2}{8}$ and



make 1 whole.

8. $\frac{2}{7} + \frac{4}{7} =$

9. Arrange the fractions below in order.
Begin with the greatest fraction.

$$\frac{3}{12}, \quad \frac{8}{12}, \quad \frac{6}{12}$$

greatest

10. If  is a whole, then  is _____.

Write the correct fraction in the box.

11. Fill in the boxes with the correct time.


30 minutes after 4.00 p.m. is

p.m.


12. Look at the picture below.

The volume of the pail is 19 ℓ

Circle the two containers that can fill the pail to its brim.



19 ℓ



7 ℓ



12 ℓ



9 ℓ



2 ℓ

SECTION C

There are 3 questions in this section.

Read the questions carefully.

Write down your number equations, answer statements and workings clearly.

13. Mrs Loh bought 9 packets of sugar.

a) How much sugar did she have in all?



Working

She had _____ kg of sugar in all.

b) Mrs Loh used 8kg of sugar to make some drinks.

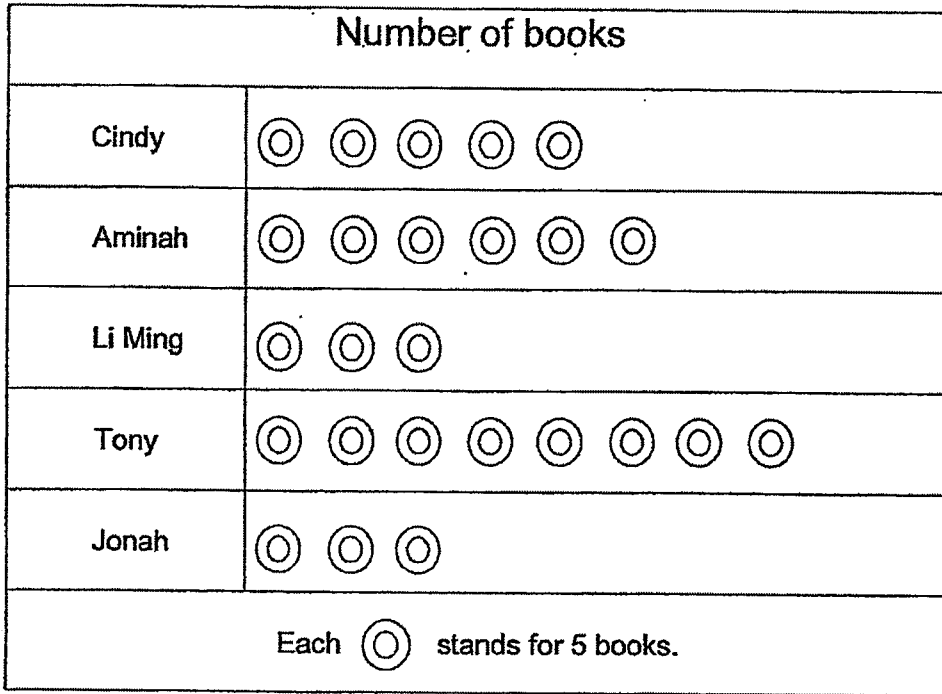
How much sugar did she have left?

She had _____ kg of sugar left.

14. The picture graph shows the number of books read by 5 children during the school holidays.

Working

Study the picture graph and answer the questions below.



a) read the most number of books.

b) Aminah read more books than Cindy.

c) Cindy and Li Ming read books altogether.

d) read as many books as .

15. Mike bought a notebook for 55¢.
He also bought an eraser for 30¢.
He paid the cashier \$1.
How much change did he get?

Working

He got _____ ¢ change.

End of paper

Have you checked your work?

ANSWER KEY

LEVEL : Primary 2
SCHOOL : Rosyth School
SUBJECT : MATHEMATICS
TERM : Term 4 Topical Review

Term 4 Topical Review (2)

Q1	2	Q2	4	Q3	2	Q4	3	Q5	4
Q6	4								

Q7	$\frac{6}{8}$	Q8	$\frac{6}{7}$
Q9	$\frac{8}{12}, \frac{6}{12}, \frac{3}{12}$	Q10	$\frac{1}{4}$
Q11	4.30p.m.	Q12	7+12=19 Circle 7ℓ and 12ℓ
Q13	(a) $9 \times 3 = 27$ (b) $27 - 8 = 19$	Q14	(a) Tony (b) 5 (c) 40 (d) Jonah read as many books as Li Ming
Q15	$55 + 30 = 85$ $100 - 85 = 15$		

