



Established since 1930

RULANG PRIMARY SCHOOL

Nurturing Competencies, Inspiring Excellence, Empowering Individuals
Scholars of Tomorrow

Name : _____)

Level : Primary Two

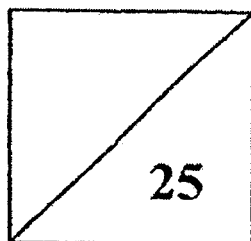
Class : Primary 2 _____

Setter : Ms Ee Wei Leng and Ms Lim Yan Cheng

MINI-TEST 1

MATHEMATICS

PAPER 1



TOTAL TIME FOR PAPER 1: 20 minutes

15 questions


25 marks

- DO NOT OPEN THIS BOOKLET UNTIL YOU ARE TOLD TO DO SO.
- READ ALL THE INSTRUCTIONS CAREFULLY.
- ANSWER ALL THE QUESTIONS.

Questions 1 to 10 carry 2 marks each. For each question, four options are given. One of these is the correct answer. Make your choice and write its number (1, 2, 3 or 4) in the bracket provided.
(20 marks)

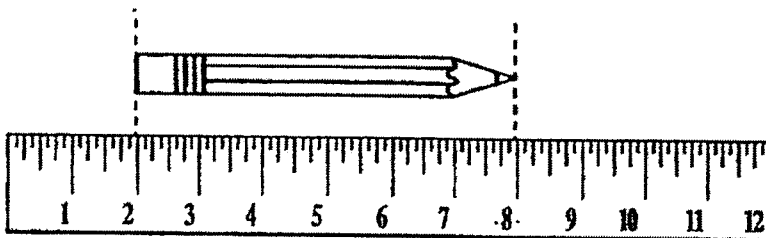
-
1. Which of the following numbers is greater than 967?
 (1) 679 (2) 769
 (3) 966 (4) 976 ()
2. Which of the following numbers has the greatest digit in the tens place?
 (1) 123 (2) 132
 (3) 213 (4) 321 ()
3. 527, 521, 515, 509, 503,
 What is the missing number in the number pattern above?
 (1) 487 (2) 497
 (3) 500 (4) 597 ()
4. $764 + 23 = \text{$
 What is the missing number in the box above?
 (1) 787 (2) 797
 (3) 984 (4) 994 ()
5. $468 - 34 = \text{$
 What is the missing number in the box above?
 (1) 128 (2) 138
 (3) 424 (4) 434 ()
6. Add 69 to 128.
 What is the answer?
 (1) 187 (2) 197
 (3) 718 (4) 818 ()
7. Subtract 218 from 440.
 What is the answer?
 (1) 122 (2) 221
 (3) 222 (4) 238 ()

The height of a standing fan in the classroom is about .



- (1) 13 cm
 - (2) 13 m
 - (3) 130 cm
 - (4) 130 m
- ()


9.



The length of the pencil is .

- (1) 6 cm
 - (2) 7 cm
 - (3) 8 cm
 - (4) 9 cm
- ()

10.



Measure the length of Marker A with a ruler. What is its length?


- (1) 11 cm
 - (2) 13 cm
 - (3) 15 cm
 - (4) 17 cm
- ()

Questions 11 to 15 carry 1 mark each. Show your working clearly in the space below each question and write your answers in the spaces provided. For questions which require units, give your answers in the units stated. (5 marks)

11. In 386, which digit is in the hundreds place?

Ans:

12.



What number does the above picture show?

Ans:

13. 845 is less than 895.
What is the missing number in the box above?

Ans:


778 is more than 478.

What is the missing number in the box above?

Ans:

-
15. Draw a straight line that is 2 cm longer than Line XY in the box below.

X  Y



End-of-Paper 1



Established since 1930

RULANG PRIMARY SCHOOL

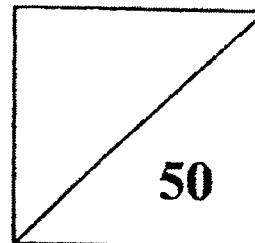
Nurturing Competencies, Inspiring Excellence, Empowering Individuals
Scholars of Tomorrow

Name : _____ ()

Total Marks
Papers 1 & 2

Level : Primary Two

Class : Primary 2 _____

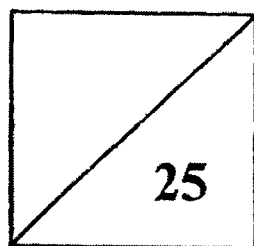


Setter : Ms Ee Wei Leng and Ms Lim Yan Cheng

MINI-TEST 1

MATHEMATICS

PAPER 2



TOTAL TIME FOR PAPER 2: 40 minutes

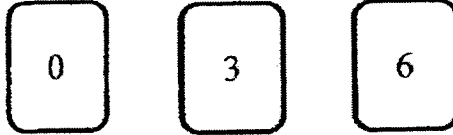
10 questions

25 marks

- DO NOT OPEN THIS BOOKLET UNTIL YOU ARE TOLD TO DO SO.
- READ ALL THE INSTRUCTIONS CAREFULLY.
- ANSWER ALL THE QUESTIONS.

Questions 1 to 5 carry 2 marks each. Show your working clearly in the space below each question and write your answers in the spaces provided. For questions which require units, give your answers in the units stated. **(10 marks)**


1.



Use all the three cards above to form a number greater than 456 but smaller than 613.
What is the number?

Ans:

2. Fill in the missing numbers in the boxes below.




Ans: A is

B is

3. $628 + 236$ is the same as $828 + \boxed{?}$
What is the missing number in the box above?

Ans:

Write a subtraction equation for the figure below.



Ans:

5. Jenny bought some ice-cream sticks.
 After giving 42 ice-cream sticks to her sister, she received 57 ice-cream sticks from her brother.
 She had 69 ice-cream sticks in the end.
 How many ice-cream sticks did she buy?

Ans:

Questions 6 to 10 carry 3 marks each. Show your working clearly in the space provided for question as marks will be awarded for relevant equations, statements and correct answers. (15 marks)

6. Alice has 381 stickers.
She has 165 fewer stickers than Bala.
How many stickers does Bala have?

Bala has stickers.

-
7. Mrs Tan baked 358 cookies in the morning.
She baked 268 cupcakes in the afternoon.
How many cookies and cupcakes did she bake altogether?

She baked cookies and cupcakes altogether.

486 children were at a cinema.
There were 230 more children than adults.
How many adults were at the cinema?

adults were at the cinema.

9. Mary bought 349 beads.
Jenny bought 167 fewer beads than Mary.
How many beads did the two girls buy altogether?

The two girls bought beads altogether.

10. After selling 250 m of cloth, Mrs Lee had 270 m of cloth left.
How many metres of cloth did she have at first?

She had m of cloth at first.

End-of-Paper

ANSWER SHEET

SCHOOL : RULANG

SUBJECT : MATHEMATICS

TERM : SA1

Q1	Q2	Q3	Q4	Q5	Q6	Q7	Q8	Q9	Q10
4	2	2	1	4	2	3	3	1	2

11)3 12)243 13)50 14)300 15)X _____ Y

PAPER 2

1)603

2)A: 207 B:187

3)36

4)346 - 132 = 214

5)69 + 42 = 111

$$111 - 57 = 54$$

6)381 + 165 = 546

Bala has 546 stickers.

7)358 + 268 = 626

She baked 626 cookies and cupcakes altogether.

8)486 - 230 = 256

256 adults were at the cinema.

9)349 - 167 = 182

The two girls bought 531 beads altogether.

$$10)250 + 270 = 520$$

She had 520 m of cloth at first.