



PEI HWA PRESBYTERIAN PRIMARY SCHOOL  
MINI TEST 1  
PRIMARY 3  
MATHEMATICS

Name: \_\_\_\_\_ (      )

Class: 3 Responsibility (      )

Date : 27 Feb 2018

Parent's Signature

Total time: 1 hour

**INSTRUCTIONS TO CANDIDATES**

1. Write your Name, Class and Register No. in the spaces provided above.
2. DO NOT turn over this page until you are told to do so.
3. Follow all instructions carefully.
4. Answer all questions.
5. Write all your answers in this booklet.

Marks (Section A)	12
Marks (Section B)	12
Marks (Section C)	6
Total Marks (Section A & B & C)	30

**Section A: Multiple Choice Questions (12 × 1 = 12 marks)**

**For each question, four options are given. One of them is the correct answer.**

**Make your choice (1, 2, 3 or 4). Choose the correct option and write it in the bracket provided.**

---

1 Which of the following numerals has digit 6 in the tens place?

(1) 6789

(2) 7689

(3) 8967

(4) 9876

( )

2  $8000 + 70 + 1 =$  \_\_\_\_\_

(1) 871

(2) 8071

(3) 8701

(4) 8710

( )

3 What is 100 more than 2904?

(1) 2804

(2) 2905

(3) 3004

(4) 3904

( )

4 Find the sum of all the odd numbers between 30 and 38.

(1) 102

(2) 126

(3) 136

(4) 170

( )

5  $9000 - 2018 =$  \_\_\_\_\_

- (1) 6092
- (2) 6982
- (3) 7018
- (4) 7982

( )

6 Find the difference between 8392 and 1048.

- (1) 9440
- (2) 9330
- (3) 7356
- (4) 7344

( )

7 Which of the following sets of numbers is arranged from the greatest to the smallest?

- (1) 6705 , 6750 , 7650 , 7560
- (2) 6750 , 6705 , 7560 , 7650
- (3) 7560 , 7650 , 6705 , 6750
- (4) 7650 , 7560 , 6750 , 6705

( )

8 Which one of the following numbers does the digit 7 have the greatest value?

- (1) 7462
- (2) 2746
- (3) 6274
- (4) 4627

( )

9 Dan read 226 pages of his story book on Monday.  
He read another 119 pages of it on Tuesday.  
How many pages did he read altogether?

(1) 107

(2) 113

(3) 335

(4) 345

( )

10 The digit 6 in the sum of 2148 and 3428 has a value of \_\_\_\_\_.

(1) 6

(2) 60

(3) 600

(4) 6000

( )

11 John baked 278 cookies.  
He ate 20 cookies and sold some of them.  
He ate 58 cookies left.  
How many cookies did he sell?

(1) 200

(2) 220

(3) 336

(4) 356

( )

12 A total of 5842 visitors visited a zoo in May and June.  
2258 visitors visited the zoo in May.  
How many visitors were there in June?

(1) 3552

(2) 3584

(3) 3594

(4) 3616

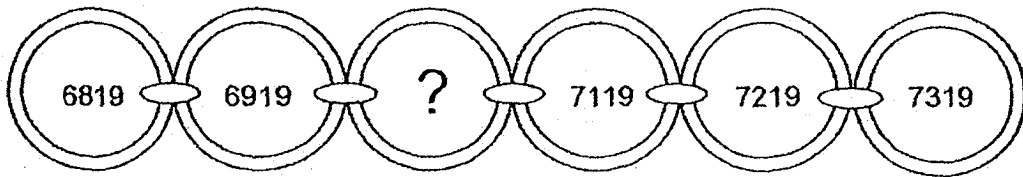
( )

**Section B: (12 x 1 = 12 marks)**

**Solve each of the following problems. Show all your working and statements clearly. Write your answers in the spaces provided.**

13 Write 8493 in words.

14 Look at the number pattern below.  
What is the missing number in the box?



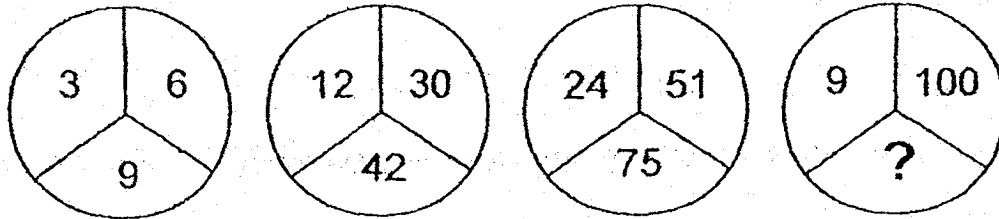
Answer: \_\_\_\_\_

15 Use all the digits given below to form the smallest 4-digit number.



Answer: \_\_\_\_\_

- 16 Look at the pattern below.  
Find the missing number.



Answer: \_\_\_\_\_

- 17 Subtract 20 tens from 42 hundreds.

Answer: \_\_\_\_\_

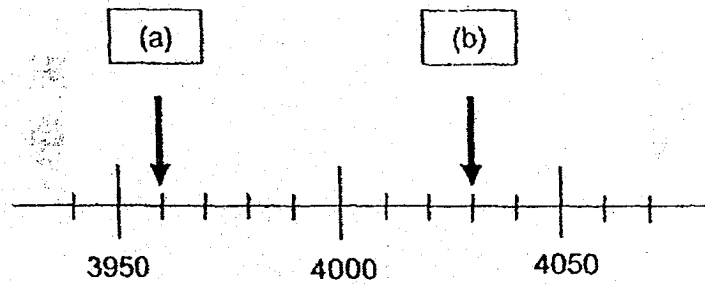
- 18 Look at the numbers below.

5130 , 5642 , 5987 , 5071

Find the difference between the greatest number and the smallest number.

Answer: \_\_\_\_\_


19 Find the missing numbers as indicated by the arrows on the number line below.



Answer: (a) \_\_\_\_\_

(b) \_\_\_\_\_

- 20 Jane is thinking of a 4-digit number starting with 5 as shown below.  
The digit in the ones place is the greatest 1-digit number.  
The digits in the thousands and tens place add up to 8.  
The digit in the hundreds place is 2 less than the digit in the tens place.  
What number is Jane thinking of?



Answer: \_\_\_\_\_

- 21 The figures below are made up of blocks with circles inside.  
Study the pattern to answer the question below.



Figure 1

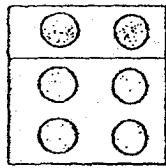


Figure 2




Figure 3




Figure 4

How many circles does Figure 6 have?

Answer: \_\_\_\_\_

- 22 The difference between two numbers is 174.  
The larger number is 3297.  
What is the smallest number?

Answer: \_\_\_\_\_



- 23 Aini and Ben saved some money.  
Study the speech bubbles and answer the question below.

I saved \$217  
more than Ben.



Aini

I saved \$645



Ben

How much did Aini save?

Answer: \$ \_\_\_\_\_

- 24 Suzy is 9 years old and Colin is 15 years old now.  
What is the sum of their age 4 years ago.

Answer: \_\_\_\_\_ years old

**Section C: ( 2 x 3 = 6 marks)**

**Solve each of the following problems. Show all your working and number equations clearly.**

**Write your answers in the spaces provided.**

- 25 Mrs Goh sold 2470 curry puffs on Friday.  
She sold 450 more curry puffs on Saturday than on Friday.  
(a) How many curry puffs were sold on Saturday?  
(b) How many curry puffs were sold on both days?

Working

Answer:(a) \_\_\_\_\_ [1]

(b) \_\_\_\_\_ [2]

26 There were 2537 adults and children at a park.

There were 1109 children.

(a) How many adults were there at the park?

(b) How many fewer children than adults were there at the park?

Working

Answer:(a) \_\_\_\_\_ [1]

(b) \_\_\_\_\_ [2]

\*\*\*\*\*End of paper\*\*\*\*\*



**EXAM PAPER 2018 (P3)**

**SCHOOL : PEI HWA**

**SUBJECT : MATHEMATICS**

**TERM : CA1**

Q1	Q2	Q3	Q4	Q5	Q6	Q7	Q8	Q9	Q10
3	2	3	3	2	4	4	1	4	1
Q11	Q12								
1	2								

**13) eight thousand, four hundred and ninety three**

**14) 7019**

**15) 1489**

**16) 109**

**17) 4000**

**18) 16**

**19) a) 3960**

**b) 4030**

**20) 5139**

**21) 22**

**22) 3123**

**23) \$860**

**24) 16**

**25) a)  $2470 + 450 = 2920$**

**b)  $2920 - 2470 = 5390$**

**26) a)  $2537 - 1109 = 1428$**

**b)  $1428 - 1109 = 319$**

