

PAYA LEBAR METHODIST GIRLS' SCHOOL (PRIMARY)
END-OF-YEAR EXAMINATION 2022
PRIMARY FOUR
MATHEMATICS
Paper 1

Name: _____ ()

Class: Primary 4 _____

Date: 31 October 2022

Total Time for Sections A, B and C: 1 hour 45 minutes

INSTRUCTIONS TO CANDIDATES

1. Do not turn over this page until you are told to do so.
2. Follow all the instructions carefully.
3. Answer all questions.
4. Shade your answers in the Optical Answer Sheet (OAS) provided.
5. All the figures in this paper are **not drawn to scale** unless stated otherwise.

	Marks Obtained / Maximum Marks	
SECTION A	/	32
SECTION B	/	40
SECTION C	/	28
TOTAL	/	100

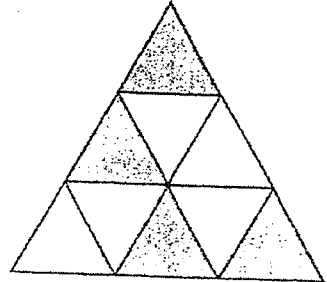
PARENT'S SIGNATURE: _____

Questions 1 to 16 carry 2 marks each. For each question, four options are given. One of them is the correct answer. Make your choice (1, 2, 3 or 4). Shade the correct oval (1, 2, 3 or 4) on the Optical Answer Sheet. (32 marks)

1. 42 thousands and 8 tens is the same as _____.

- (1) 428
- (2) 4280
- (3) 42 008
- (4) 42 080

2. The figure shown is made up of identical triangles.



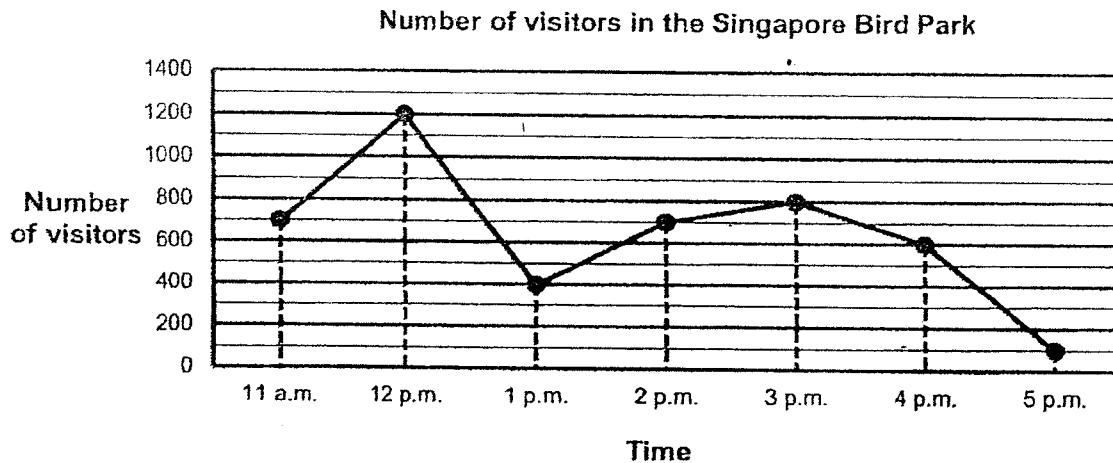
What fraction of the figure is shaded?

- (1) $\frac{4}{5}$
- (2) $\frac{4}{8}$
- (3) $\frac{4}{9}$
- (4) $\frac{5}{9}$

3. In the number 85.76, the digit _____ is in the hundredths place.

- (1) 5
- (2) 6
- (3) 7
- (4) 8

9. The line graph shows the number of visitors who visited the Singapore Bird Park on Saturday from 11 a.m. to 5 p.m.



In which one-hour period did the number of visitors decrease the most?

- (1) 12 p.m. to 1 p.m. (2) 1 p.m. to 2 p.m.
 (3) 3 p.m. to 4 p.m. (4) 4 p.m. to 5 p.m. ()
10. Express $7\frac{3}{20}$ as a decimal.
 (1) 7.3 (2) 7.32
 (3) 7.15 (4) 7.015 ()
11. Joshua went for a movie which started at 20 30. The movie ended at 23 15.
 How long was the movie?
 (1) 2 h 15 min (2) 2 h 45 min
 (3) 3 h 15 min (4) 3 h 45 min ()

PAYA LEBAR METHODIST GIRLS' SCHOOL (PRIMARY)
END-OF-YEAR EXAMINATION 2022

PRIMARY FOUR

MATHEMATICS
Paper 2

Name: _____ ()

Class: Primary 4 _____

Date: 31 October 2022

Total Time for Sections A, B and C: 1 hour 45 minutes

INSTRUCTIONS TO CANDIDATES

1. Do not turn over this page until you are told to do so.
2. Follow all the instructions carefully.
3. Answer all questions.
4. All the figures in this paper are not drawn to scale unless stated otherwise.

	Marks Obtained / Maximum Marks
SECTION B	/ 40
SECTION C	/ 28
TOTAL	/ 68

SECTION B

Questions 17 to 36 carry 2 marks each. Write your answers in the spaces provided. For questions which require units, give your answers in the units stated.

(40 marks)Do not write
in this space

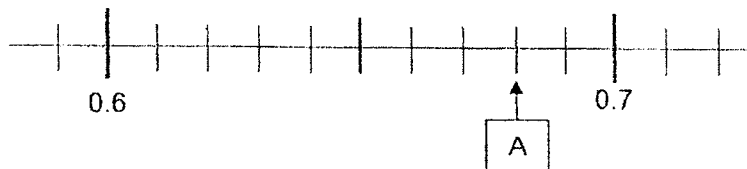
17. Round 35 620 to the nearest hundred.

Ans: _____

18. Write $\frac{17}{4}$ as a mixed number.

Ans: _____

19. Write the decimal represented by A.



Ans: _____

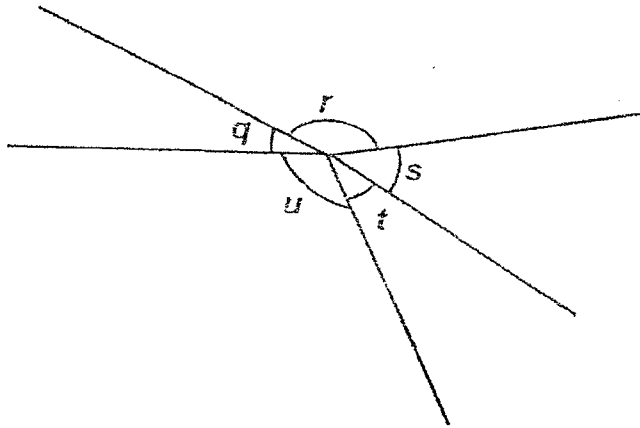
20. Arrange the following numbers from the smallest to the greatest.

3902	3092	3920
------	------	------

Ans: _____ , _____ , _____
(smallest) (greatest)

21. In the figure, name the two angles that are greater than 90°.

Do not write
in this space



Ans: \angle _____ and \angle _____

22. $\frac{3}{5} - \frac{2}{10} =$

Ans: _____

23. $7.2 - 0.45 =$

Ans: _____

24. What is the remainder when 4013 is divided by 6?

Ans: _____

25. Arrange the following fractions from the greatest to the smallest.

$\frac{2}{3}$	$\frac{1}{2}$	$\frac{5}{6}$
---------------	---------------	---------------

Ans: _____, _____, _____
(greatest) (smallest)

Do not write
in this space

26. The area of a rectangle is 48 cm^2 . The length of the rectangle is 8 cm
What is the breadth of the rectangle?

Ans: _____ cm

27. When a number with **1 decimal place** is rounded to the nearest whole number, the answer is 89.

(a) What is the greatest possible number?

Ans: (a) _____

(b) What is the smallest possible number?

Ans: (b) _____

28. The table shows the number of boys and girls in two Primary 4 classes who wear or do not wear spectacles.

Class	Number of boys		Number of girls		Total
	Wears spectacles	Does not wear spectacles	Wears spectacles	Does not wear spectacles	
Primary 4A	9	14	7	?	42
Primary 4B	12	8	11	10	41

- (a) How many boys from both classes wear spectacles?

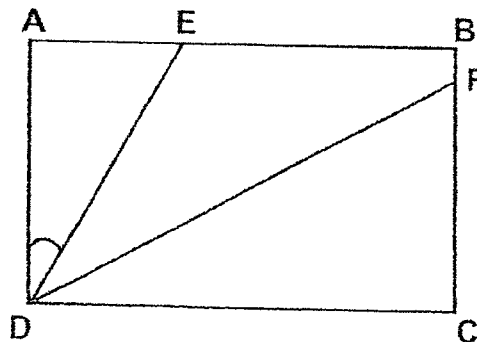
Ans: (a) _____

- (b) How many girls from Primary 4A do not wear spectacles?

Ans: (b) _____

29. ABCD is a rectangle. $\angle ADE = \angle EDF = \angle FDC$.

Find $\angle ADE$.

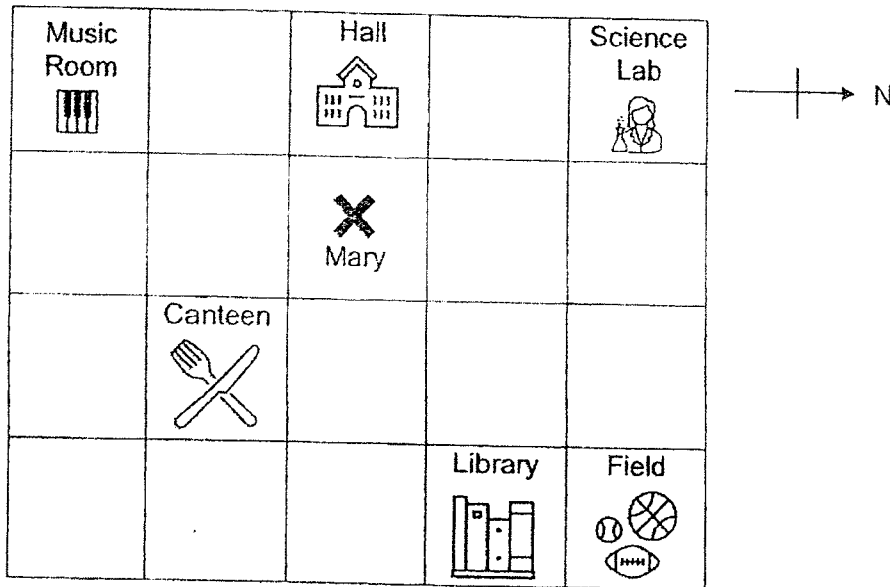


Ans: _____ °

Do not write
in this space

30. The square grid shows different locations in a school.

Do not write
in this space




(a) In which direction is the Science Lab from the Hall?

Ans: (a) _____


(b) Mary is standing at Point X, facing the Canteen.
She makes a 90° turn anti-clockwise.
Where will she be facing after making the turn?

Ans: (b) _____



31. The perimeter of a square is 72 cm. What is the area of the square?

Ans: _____ cm²



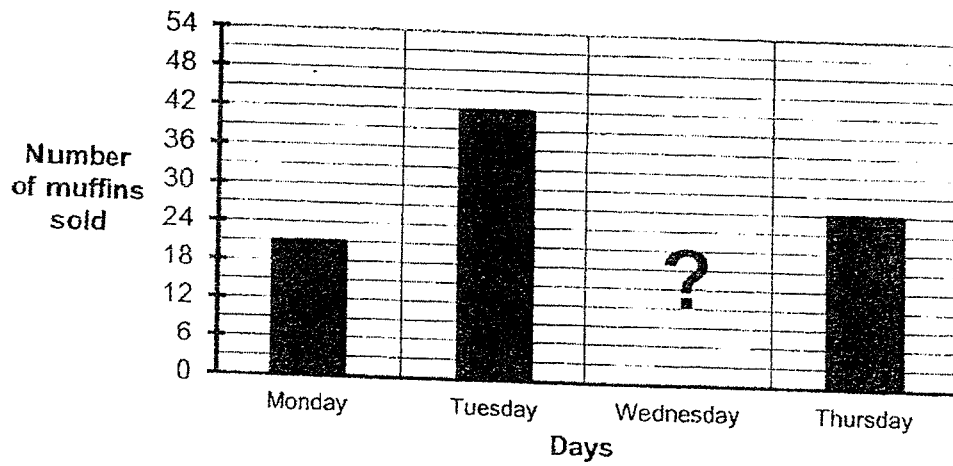
32. Mrs Tan took 15 minutes to walk home from the supermarket.
She left the supermarket at 1.50 p.m. What time did she reach home?
Express the time using the 24-hour clock.

Do not write
in this space

Ans: _____




33. Bobby had some muffins.
The graph below shows the number of muffins sold by Bobby in 4 days.



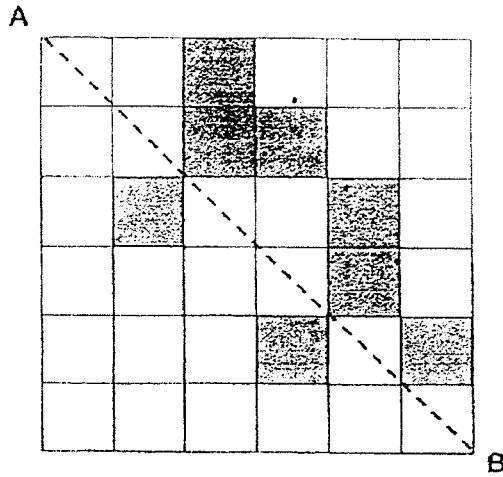
$\frac{3}{4}$ of the total muffins were sold on Monday, Tuesday and Thursday.
How many muffins were sold on Wednesday?

Ans: _____



34. What is the least number of squares needed to be shaded so that the line AB is a line of symmetry for the figure?

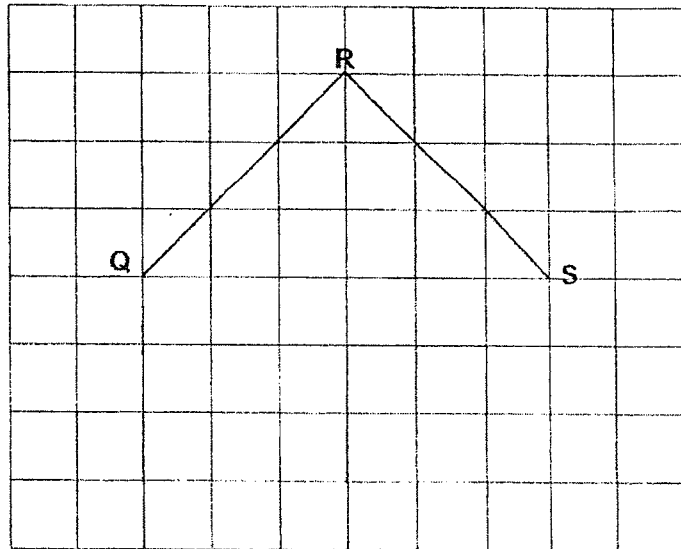
Do not write in this space



Ans: _____

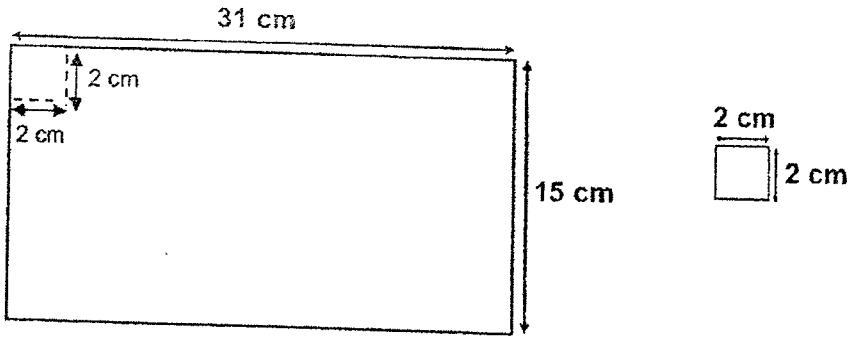


35. Complete the drawing of Square QRST and label the Point T.




36. Javier has a rectangular paper measuring 31 cm by 15 cm as shown below. He wants to cut out small squares measuring 2 cm by 2 cm from the piece of rectangular paper. What is the greatest number of small squares that Javier can cut out?

Do not write in this space



Ans: _____



SECTION CDo not write
in this space

For questions 37 to 43, show your working clearly and write your answers in the spaces provided. The number of marks available is shown in brackets [] at the end of each question or part-question.

(28 marks)

37. Shop X sold 4 times as many cars as Shop Y.
Shop Y sold twice as many cars as Shop Z.
Shop Z sold 602 fewer cars than Shop X.

(a) How many cars did Shop Z sell?

Ans: (a) _____ [2]

(b) How many cars did the three shops sell altogether?

Ans: (b) _____ [2]



38. Belicia mixed 1.43 l of orange syrup with 8 l of water to make an orange drink. The orange drink was then poured into 7 identical jugs.

Do not write
in this space

- (a) How many litres of orange drink were there in total?

Ans: (a) _____ [2]

- (b) How many litres of orange drink were there in each jug?
Round your answer to 2 decimal places.

Ans: (b) _____ [2]

39. Jamie read $\frac{2}{9}$ of a book on Monday, $\frac{1}{3}$ of the book on Tuesday and the remaining pages on Wednesday. She read 25 more pages on Tuesday than on Monday.

Do not write
in this space

- (a) What fraction of the book did she read on Wednesday?


Ans: (a) _____ [1]

- (b) How many pages were there in the book?

Ans: (b) _____ [3]



40. Use the information below to answer question 40.



Do not write
in this space

Mr. and Mrs. Lee brought their 5 children to Dazzle Zoological Gardens: They paid \$67.50 in total for their tickets.

- (a) How much did the tickets for 5 children cost?

Ans: (a) _____ [2]

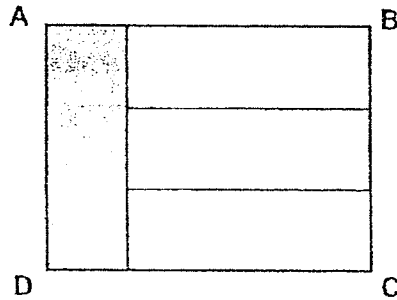
- (b) Find the cost of 1 adult ticket.

Ans: (b) _____ [2]

41. Rectangle ABCD is made up of 4 identical rectangles.

Do not write
in this space

The perimeter of the shaded rectangle is 48 cm.



- (a) What is the area of the shaded rectangle?

Ans: (a) _____ [2]

- (b) What is the perimeter of rectangle ABCD?

Ans: (b) _____ [2]



42. The table below shows the number of dots and arrows used to form each figure.

Do not write in this space

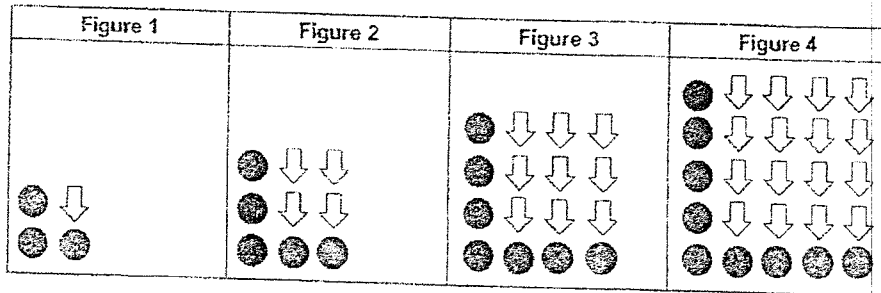


Figure Number	Number of dots	Number of arrows
1	3	1
2	5	4
3	7	9
4	9	16
⋮	⋮	⋮
6	(a) _____	(a) _____


[1]

- (a) Complete the table for Figure 6.
- (b) Which figure would have a total of 43 dots?

Ans: (b) _____ [2]

- (c) How many arrows would be used for Figure 20?

Ans: (c) _____ [1]



43. Poppy paid \$375 for 4 similar watches and 5 similar headphones.
Melody paid \$160 less for 2 similar watches and 3 similar headphones.

Do not write
in this space

- (a) What was the cost of 2 similar watches and 3 similar headphones?

Ans: (a) _____ [1]

- (b) What was the cost of a headphone?

Ans: (b) _____ [3]




End of Paper 2

YEAR : 2022
 LEVEL : PRIMARY 4
 SCHOOL : PAYA LEBAR METHODIST GIRLS' SCHOOL
 SUBJECT : MATHEMATICS
 TERM : END OF YEAR EXAMINATION

(PAPER 1)

Q1	4	Q2	3	Q3	2	Q4	3	Q5	3
Q6	4	Q7	4	Q8	2	Q9	1	Q10	3
Q11	2	Q12	1	Q13	2	Q14	3	Q15	1
Q16	4								

(PAPER 2)

Q17	35 600	Q18	$4\frac{1}{4}$
Q19	0.58	Q20	3092, 3902, 3920
Q21	r and u	Q22	$\frac{2}{5}$
Q23	6.75	Q24	5
Q25	$\frac{5}{6}, \frac{2}{3}, \frac{1}{2}$	Q26	6cm
Q27	(a) 89.4 (b) 88.5	Q28	(a) $9 + 12 = 21$ (b) $9 + 14 + 7 = 30$ $42 - 30 = 12$
Q29	$90 \div 3 = 30^\circ$	Q30	(a) north (b) field
Q31	$72 \div 4 = 18$ $18 \times 18 = 324\text{cm}^2$	Q32	2.05 p.m. : 14 05
Q33	$21 + 42 + 27 = 90$ $90 \div 3 = 30$	Q34	4
Q35		Q36	$31 \div 2 = 15 \text{ R}1$ $15 \div 2 = 7 \text{ R}1$ $15 \times 7 = 105$
Q37	(a) $602 \div 7 = 86$ (b) $86 \times 11 = 946$	Q38	(a) $8\text{€} + 1.43\text{€} = 9.43 \text{€}$ (b) $9.43 \div 7 = 1.347$ $\approx 1.35 \text{€}$
Q39	(a) $\frac{4}{9}$ (b) $25 \times 9 = 225$	Q40	(a) $\$7.50 \times 5 = \37.50 (b) $67.50 - 37.50 = \$30$ $30 \div 2 = \$15$
Q41	(a) $48 \div 22 \div 4 = 6$ $(6 \times 3) \times 6 = 108\text{cm}^2$ (b) $(6 + 6 + 6 + 6 + 18) \times 2 = 84\text{cm}$	Q42	(a) 13 (a) 36 (b) $(43 - 1) \div 2 = 21$ (c) $20 \times 20 = 400$
Q43	(a) $375 - 160 = \$215$ (b) $215 \times 2 = 430$ $430 - 375 = \$55$		

