

METHODIST GIRLS' SCHOOL (PRIMARY)

Founded in 1887



END-OF-YEAR EXAMINATION 2012 PRIMARY 5 MATHEMATICS

PAPER 2

Duration: 1h 40 min

INSTRUCTIONS TO CANDIDATES

Do not turn over this page until you are told to do so.

Follow all instructions carefully.

Answer all questions.

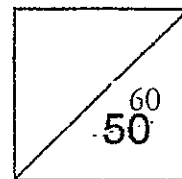
Write your answers in this booklet.

The use of an approved calculator is expected, where appropriate.

Name: _____ . ()

Class: Primary 5. _____

Date: 9 October 2012




This booklet consists of 15 printed pages including this page.

Questions 1 to 5 carry 2 marks each. Show your working clearly and write your answers in the spaces provided. For questions which require units, give your answers in the units stated. (10 marks)

Do not write
in this space

1. Zhiqin needs to shade $\frac{5}{8}$ of the grid below. Some parts of the grid are already shaded. How many more squares must she shade?



Ans: _____

2. A jug contains 6.09 litres of water. Raju drank 350 millilitres of the water. He then used 0.2 litres of it to make an orange drink for his sister. How much water was left in the jug?

Ans: _____ ml

Score

3. Paula's Bakery sells its doughnuts and ~~cakes~~ ^{Muffin} at a 30% discount and sandwiches at a 50% discount after 8 p.m.



How much do you need to pay if you buy 4 doughnuts, 2 muffins and 2 sandwiches after 8 p.m.? Round off your answer to the nearest dollar.

Ans: \$ _____

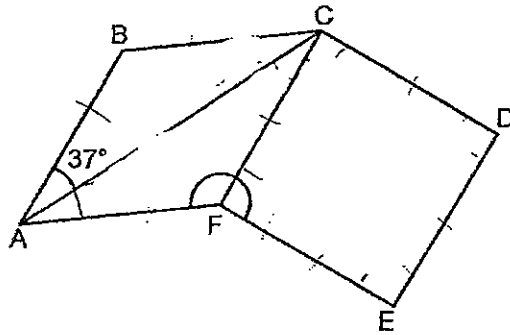
4. One-third of a rectangular tank is filled with water. Devi poured in another 3.6l of water to make it $\frac{5}{7}$ full. What is the capacity of the tank?

Ans: _____ ml

Do not write
in this space

Score

5. In the figure, ABCF is a rhombus and CDEF is a square. Find $\angle AFE$.



Do not write
in this space

Ans: _____ °

Score

For questions 6 to 18, show your working clearly and write your answers in the spaces provided. The number of marks available is shown in brackets [] at the end of each question or part-question. (50 marks)

Do not write in this space

6. Delia and Emily made a donation on Flag Day. Emily donated twice as many 20-cent coins as \$1 coins. Delia gave \$1.80 in 50-cent and 20-cent coins. Both girls donated the same number of 20-cent coins.

- (a) Who donated more money?
- (b) How much more?

Ans _____

7. Mark had \$40. He spent $\frac{1}{5}$ of it on food. He then bought a pen which cost half as much as the cost of the food. How much money had he left?

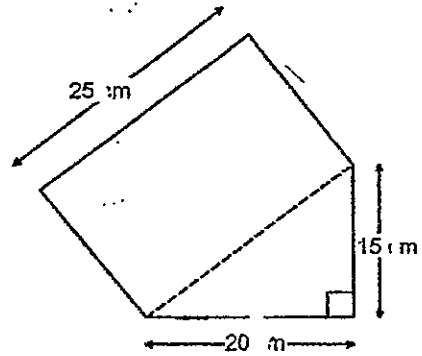
Ans: _____ [3]

Score

--

Do not write
in this space

8. The figure shows the shape of a field that is made up of a rectangle and a triangle. The perimeter of the field is 94 m. What is the area of the field?



Ans: _____ [3]

9. In a Formula X race, the total distance covered is 300 km. Given that one lap of the Marina Bay Circuit in Singapore is 5 079 m, how many laps must a Formula One driver cover in the race? Round off your answer to the nearest whole number.


Ans: _____ [3]

Score

10. (a) In the space below, draw a parallelogram ABCD in which $AB = 7$ cm, $BC = 5$ cm and $\angle ABC = 120^\circ$. The line AB has been drawn for you. [2]
- (b) Measure AC.

ignore

Do not write
in this space



Ans: (b) _____ [1]

Score

11. The average mark Jane obtained for four subjects was 82. The score for two subjects were 83 and 74. The difference between the score for the other two subjects was 9. What was the highest mark she obtained?

Do not write
in this space

Ans: _____ [4]

Score

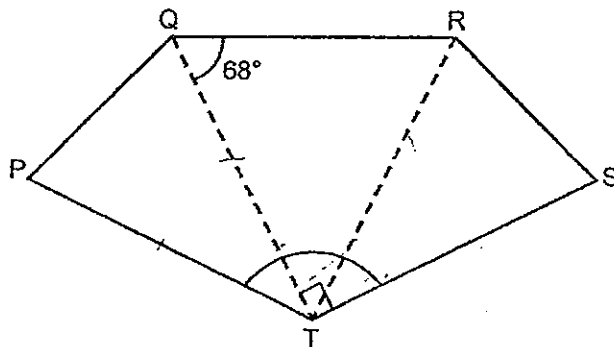
Do not write
in this space

12. Sharma bought some apples and oranges in the ratio 3:5. $\frac{1}{6}$ of the apples and $\frac{1}{4}$ of the oranges were rotten. After throwing the rotten fruits away, Sharma bought another 50 apples and 20 oranges. She then had an equal number of fruits left. How many fruits did she have at first?

Ans: _____ [4]

Score

13. In the figure, PQT and RST are identical triangles. $PT=QT=RT=ST$ and $\angle RQT = 68^\circ$.

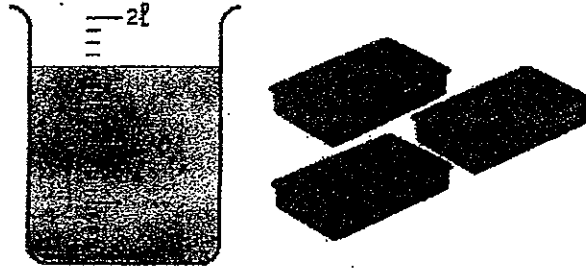


Do not write
in this space

Ans: _____
 _____ [3]

Score

14. The beaker below contains some water. The water is then poured into 3 identical ice trays. Each ice tray can hold 15 cubes of sides 3 cm.



- (a) How much water can one tray hold?
- (b) How much water was left in the beaker after all the three ice trays have been completely filled?
(1 litre = 1 000 cm³)

Ans: (a) _____ [2]

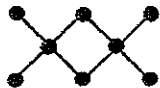
(b) _____ [2]

Score

Do not write
in this space

15. Gail used dots and sticks to create patterns as shown below. She noticed there was a square in Pattern 1 and 2 squares in Pattern 2. She recorded the number of dots and sticks used in the table shown below.

Do not write
in this space



Pattern 1



Pattern 2



Pattern 3

	Number of dots	Number of sticks	Number of squares
Pattern 1	4	4	1
Pattern 2	6	7	2
Pattern 3	8	10	3
Pattern 4	(a)	(a)	4
• •			

- (a) Complete the table above for Pattern 4. [1]
 (b) She made a pattern using 35 dots. How many sticks did she use?
 (c) How many dots and sticks are needed altogether to form 13 squares?

Ans: (b) _____ [2]

(c) _____ [2]

Score

16. The price of an adult air ticket to Korea is \$990. The air ticket price for children below 12 years of age is $\frac{4}{5}$ of the cost of an adult ticket. Mr Lim bought tickets for himself, his wife, his mother and two children, aged 15 and 11. He used $\frac{3}{4}$ of his monthly salary to pay for the tickets. What was Mr Lim's monthly salary?

Do not write
in this space

Ans: _____ [5]

Score

Do not write
in this space

17. Mrs James baked some chocolate and banana muffins in the ratio 8 : 5 respectively. John ate $\frac{1}{4}$ of the chocolate muffins, while Jane ate $\frac{1}{3}$ of the banana muffins.

(a) What was the ratio of the the chocolate muffins left to the banana muffins left?

(b) Mrs James then baked another 60 walnut muffins, there was an equal number of banana and walnut muffins. How many muffins were there in the end?

Ans: (a) _____ [2]

(b) _____ [3]

Score

Do not write
in this space

18. Jane has a box which contained red, white and blue buttons. There were 150 red buttons and an equal number of white and blue buttons. After she added 25% more blue buttons into the box, the number of blue buttons increased to 100.

(a) How many white buttons were in the box at first?

(b) After Jane has given away 38 red buttons, what percentage of her red buttons did she have left? Give your answer correct to 1 decimal place.

Ans: (a) _____ [3]

(b) _____ [2]

Score





ExamSutra 考试圣经

Answer Sheets

SCHOOL : MGS
SUBJECT : PRIMARY 5 MATHEMATICS
TERM : SAZ

Q1	Q2	Q3	Q4	Q5	Q6	Q7	Q8	Q9	Q10	Q11	Q12	Q13	Q14	Q15
2	4	2	4	4	2	2	1	1	2	4	4	2	3	4

16) $8 \times 9 = 72$
 $9 \times 9 = 81$
 $81 + 7 = 88$

17) 14 and 21

18) $35/120 = 7/24$

19) $28 + 7 = 35$
 $2/7 = 10/35$
 $10 - 2 = 8$

20) $18 \div 2 = 9$
 $9 \times 5 = 45$

21) $0.004g \times 50 = 0.2g$

22) $38 \times 4 = 152$
 $152 - 40 = 112kg$

23) $107/100 \times 25 = \$26.75$

24) $180^\circ - 157^\circ = 23^\circ$
 $180^\circ - 90^\circ - 23^\circ = 67^\circ$

25) $64^\circ \times 2 = 128^\circ$
 $180^\circ - 128^\circ = 52^\circ$

26) $4 \times 5 = 20$
 $60c \times 20 = 1200c = \12
 $\$12 - \$1.80 = \$10.20$
 $\$10.20 \div 4 = \2.55

27) $100\% - 35\% = 25\%$
 $40\% \rightarrow \$32$
 $25\% \rightarrow 25 \times 32 / 40 = \20
 $\$20 \div 2 = \10

28) $42 \div 7 = 6$
 $6 \times 6 = 36$
 $6 \div 3 = 2cm$

29) 1 : 8

30) $20 \times 25 \times 15 = 7500$
 $60 \times 25 \times 50 = 75000$
 $75000 + 7500$
 $82500cmts$

Paper 2

1) $4 \times 4 = 16$ (total squares)
 $5/8 = 10/16$
 $10 - 6 = 4$ more squares

2) $6.09L - 0.2L = 5.89L$
 $350ml = 0.35L$
 $5.89L = 0.35L$
 $= 5.54L$
 $= 5540ml$

3) $105c \times 4 = 420c$
 $112c \times 2 = 224c$
 $172.50c \times 2 = 345c$
 $420c + 224c + 345c = 989c$
 $= \$9.89 \approx \10

4) $5/7 - 1/3 = 8/21$
 $3.6L \div 8 = 0.45L$
 $0.45L \times 21 = 9.45L$
 $= 9L 450ml$

5) $180^\circ - 37^\circ - 37^\circ = 106^\circ$
 $106^\circ + 90^\circ = 196^\circ$

6) Della : \$1.80
\$1 (2.50c) 80c (4 - 20c)

Emily : $4 \div 2 = 2$
80c (4 - 20c)
\$2 (2 - \$1)
 $2 + 0.8 = 2.8$

a) Emily
 $2.8 - 1.8 = 1$

7) $1/5 \times \$40 = \8
 $\$8 \div 2 = \4
 $\$8 + \$4 = \$12$
 $\$40 - \$12 = \$28$

$$8) 94 - 25 - 20 - 15 = 34$$

$$34 \div 2 = 17$$

$$25 \times 17 = 425$$

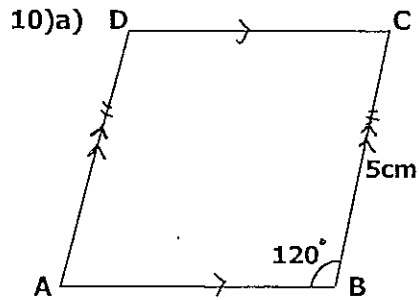
$$\frac{1}{2} \times 20 \times 15 = 150$$

$$425 - 150 = 275 \text{ m}^2$$

$$9) 300 \text{ km} = 300000 \text{ m}$$

$$300000 \text{ m} \div 5079 \text{ m}$$

$$\approx 59.0 \approx 59 \text{ laps}$$



b) 10.1 cm

$$11) 82 \times 4 = 328$$

$$328 - 83 - 74 = 171$$

$$171 - 9 = 162$$

$$162 \div 2 = 81$$

$$81 + 9 = 90 \text{ marks}$$

$$12) 20u + 50 = 30u + 20$$

$$30 = 10u$$

$$3 = u$$

$$192 = 64u$$

Ans: 192 fruits

$$13) 68^\circ \times 2 = 136^\circ$$

$$180^\circ - 136^\circ = 44^\circ$$

$$90^\circ - 44^\circ = 46^\circ$$

$$90^\circ + 46^\circ = 136^\circ$$

14)a) $3 \times 3 \times 3 = 27$

$27 \times 15 = 405\text{cm}^3$

b) $1.6\text{L} = 1600\text{cm}^3$

$405\text{cm}^3 \times 3 = 1215\text{cm}^3$

$1600\text{cm}^3 - 1215\text{cm}^3 = 385\text{cm}^3$

15)a) 17 20

b) $35 - 8 = 27$

$27 \div 3 = 9$

$9 + 1 = 10$ (pattern no)

$10 - 1 = 9$

$9 \times 4 = 36$

$36 + 8 = 44$

c) $13 \times 4 = 52$

$52 + 4 = 56$ (sticks)

$56 - 8 = 48$

$48 \div 4 = 12$

$12 + 1 = 13$ (pattern no)

$13 - 1 = 12$

$56 - 12 = 44$

$44 + 56 = 100$ dots and sticks

16) $4/5 \times \$990 = \792

$\$990 \times 4 = \3960

$\$3960 + \$792 = \$4752$

$\$4752 \div 3 = \1584

$\$1584 \times 4 = \6336

17)a) C : B

8 : 5

24 : 15

$18 : 10 = 9 : 5$

b) $60 \div 10 = 6$

$18 + 10 = 28$

$28 \times 6 = 168$

$168 + 60 = 228$

18)a) $125\% \rightarrow 100$ buttons

$100\% \rightarrow 80$ buttons

b) $150 - 38 = 112$

$112/150 \times 100\% \approx 74.66\% \approx 74.7\%$